



SAMPLE CLASS 5

© kashiguru.com

Phone no. 8797247733 / 9570032899

WHATSAPP no. 8797247733

kashiguru333@gmail.com



NAME : SHIVANSH KUMAR SINGH

CLASS : 5

ASSIGNMENT NO. - 02

SCHOOL : IDEAL INTERNATIONAL SCHOOL


Submission Date: 29th JULY 2025

marks obtained						
full marks						
subject	english	hindi	maths	science	social science	total

Knowledge gives humility, humility brings worthiness,

Worthiness brings wealth, and wealth brings righteousness and happiness.

Gardening Tools




Read the passage below and answer the following questions.

Gardening is a wonderful hobby that allows us to connect with nature and grow our own plants. To make gardening easier and more efficient, we use various tools. One essential tool is a garden shovel. It helps us dig holes for planting seeds or transplanting seedlings. Another useful tool is a garden rake, which helps to level the soil and remove debris. These tools are essential for maintaining a healthy garden.

In addition to shovels and rakes, gardeners also use pruning shears. Pruning shears are like scissors for plants. They are used to trim and shape plants, removing dead or overgrown branches. This helps plants grow better and look more attractive. Another handy tool is a watering can. It allows gardeners to water their plants gently and precisely, ensuring they receive the right amount of water for healthy growth.

Garden tools need proper care to last longer. After using them, it's important to clean them and remove any dirt or debris. Storing them in a dry place helps prevent rusting. Regular maintenance, such as sharpening blades and oiling hinges, ensures that the tools remain in good working condition. By taking care of our garden tools, we can enjoy gardening for years to come.



1) What are some essential garden tools?

PRONOUNS AND POINT OF VIEW

Circle the pronouns in the sentences.
Write whether the sentence is written in
the first person or third person.

1 st person: I and we
2 nd person: you
3 rd person: he, she, it, they

- third person 1. Sam's sister is driving her car to her friend's house after school.
- _____ 2. My brother and I went to our house to make dinner for our parents.
- _____ 3. Paul and Martha wanted to get a dog for their little girl.
- _____ 4. After the game, the players talked to their coach and asked if they could all meet at the restaurant for a team dinner.
- _____ 5. Finally, Sophie remembered to bring her homework to class to show her teacher.
- _____ 6. I think I will go on a vacation all by myself this year so I can have some time alone.



A. Write a paragraph about a football game from a first person point of view.	B. Rewrite the paragraph from a third person point of view.
<hr/> <hr/> <hr/> <hr/> <hr/> <hr/>	<hr/> <hr/> <hr/> <hr/> <hr/> <hr/>

A. Multiple Choice Questions (MCQs)

Which of these is a balanced diet?

- a) Chips and soft drinks
- b) Rice and sugar
- c) Fruits, vegetables, pulses, milk
- d) Only milk

The process by which food is broken down in our body is called —

- a) Circulation
- b) Digestion
- c) Respiration
- d) Reproduction

Which organ is the main site of digestion?

- a) Mouth
- b) Stomach
- c) Small intestine
- d) Liver

Which of these diseases is caused by a virus?

- a) Typhoid
- b) Malaria
- c) Tuberculosis
- d) Common cold



B. Fill in the Blanks

Digestion starts in the _____.

The _____ produces bile juice to help digestion.

Eating stale or dirty food can cause _____ diseases.

_____ food keeps us healthy and strong.

Microorganisms that cause diseases are called _____.

C. Answer in One Sentence

What is digestion?

Name two diseases caused by eating dirty food.

What is a balanced diet?

A. Multiple Choice Questions (MCQs)

The main occupation of most people in villages is —

- a) Teaching
- b) Farming
- c) Trading
- d) Construction

Which of the following is a rabi crop?

- a) Rice
- b) Wheat
- c) Cotton
- d) Maize

Which tool is used to loosen the soil?

- a) Plough
- b) Hammer
- c) Saw
- d) Scissors

Which of the following is used to kill insects on crops?

- a) Pesticide
- b) Water
- c) Fertilizer
- d) Tractor



B. Fill in the Blanks

_____ is the process of growing crops.

A farmer uses a _____ to plough the field.

_____ and _____ are two main cropping seasons in India.

Food grains like wheat and rice are stored in _____.

_____ is added to soil to make it more fertile.

C. True or False

Crops grow well without sunlight. (____)

Farmers use tractors and ploughs in their fields. (____)

Kharif crops are sown in winter. (____)

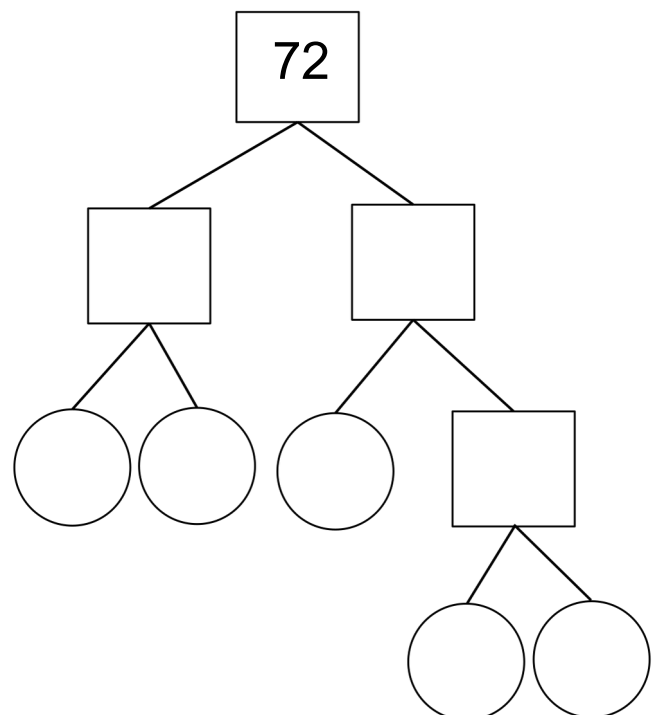
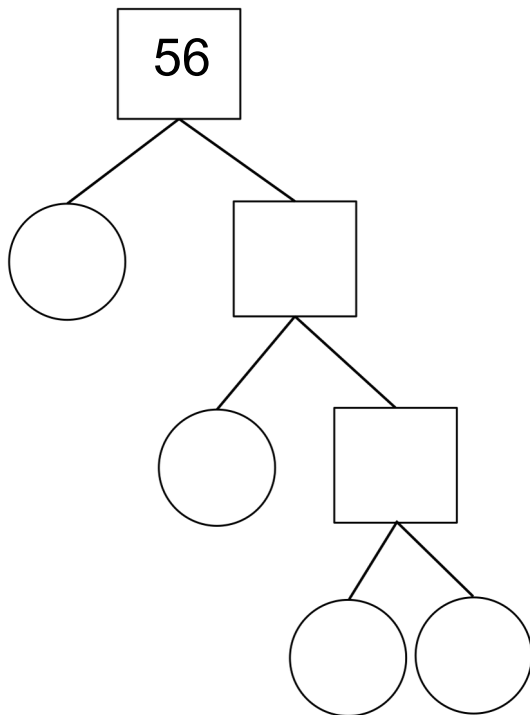
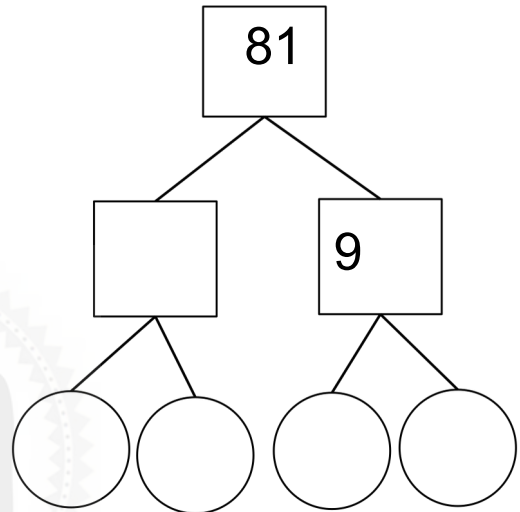
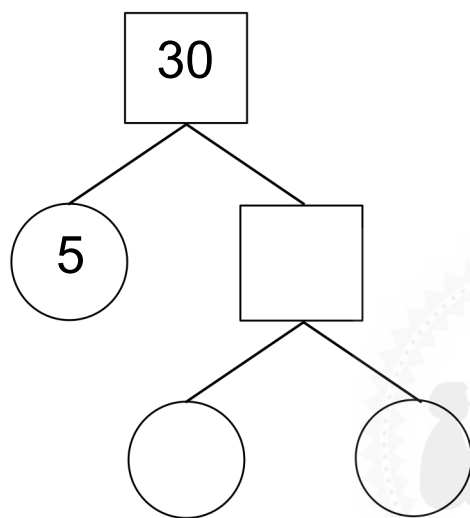
Rice is grown more during the rainy season. (____)

Farmers grow only one type of crop in a year. (____)

PRIME FACTOR TREES



Complete the factor tree to find the prime factors of each number.



Prime factors (numbers under 100)



Example: $24 = 2 \times 2 \times 2 \times 3$ (Not prime)

List the prime factors for each number. Is the number prime?

1. 17= _____
2. 76= _____
3. 78= _____
4. 6 = _____
5. 47= _____
6. 26= _____
7. 29= _____
8. 49= _____
9. 41= _____
10. 43= _____



NAME : RAKHI

CLASS : 07

ASSIGNMENT NO. - 01

SCHOOL : IDEAL INTERNATIONAL SCHOOL

Submission Date: 23rd JULY 2025

marks obtained						
full marks						
subject	english	hindi	maths	science	social science	total

गुरु ब्रह्मा, गुरु विष्णु, गुरु देवो महेश्वरः।

गुरुः साक्षात् परं ब्रह्म तस्मै श्रीगुरुवे नमः॥

ENGLISH

The Indian Constitution is based on the principles of justice, liberty, and equality. One of its most important goals is to ensure equality for all citizens, regardless of their caste, religion, gender, or economic background. Equality means that every person is treated the same before the law and has equal opportunities in all aspects of life.

Article 14 of the Indian Constitution states that “the State shall not deny to any person equality before the law or the equal protection of the laws within the territory of India.” This means no one is above the law, and everyone must be treated fairly by the law and government.

The Constitution also grants Fundamental Rights, especially Articles 15 and 16, to protect citizens from discrimination. Article 15 prohibits discrimination on the basis of religion, race, caste, sex, or place of birth. Article 16 gives every citizen the right to equal opportunity in matters of public employment. These laws help to create a society where all people can live with dignity and respect.

The idea of equality is also supported by various government schemes and policies. The government provides reservations for Scheduled Castes (SC), Scheduled Tribes (ST), and Other Backward Classes (OBC) in education and jobs to ensure that people from weaker sections of society get equal chances. These steps help in correcting historical injustices and creating a balanced society.

Even though our Constitution provides for equality, true equality can only be achieved when people also change their thinking. Discrimination still exists in some parts of the country in the form of untouchability, gender inequality, and economic differences. That is why education, awareness, and active participation of citizens are important.

In conclusion, the Indian Constitution strongly supports the principle of equality. It gives every person the right to live with equal dignity and opportunities. Citizens must follow the law and also treat others equally in daily life to make the idea of equality a reality for everyone.

1. Article 14 of the Constitution deals with:

- A. Right to Education
- B. Equality before law
- C. Freedom of Speech
- D. Right to Religion

2. Discrimination is prohibited under:

- A. Article 12
- B. Article 15
- C. Article 19
- D. Article 32

3. Equal opportunity in government jobs is given by:

- A. Article 21
- B. Article 16
- C. Article 24
- D. Article 13

4. The Constitution provides reservations to:

- A. Rich people
- B. NRIs
- C. SC, ST, and OBC
- D. None of the above

5. True equality can be achieved through:

- A. Wars and protests
- B. Education and awareness
- C. Only by law
- D. Ignoring the Constitution



NAME : ABCD

ROLL NO.-00

THURSDAY 17 APRIL 2025

CLASS : 05

ASSIGNMENT NO. - 04

SCHOOL : IDEAL INTERNATIONAL SCHOOL

marks obtained						
full marks						
subject	english	hindi	maths	science	social science	total

Don't take rest after your first victory because if you fail in second, more lips are waiting to say that your first victory was just luck.

Abdul Kalam

Past perfect tense

Fill in the blanks to complete the sentences in the past perfect tense.

Past tense:

I walked to the store.

Past perfect tense:

I had walked to the store before coming home.

1. My family had finished (finish) their salad when the steaks arrived.
2. We _____ (practice) math before I started school.
3. The cat _____ (go) into my bedroom while we ate dinner.
4. My friends _____ (watch) the movie before I arrived.
5. My parents _____ (want) to take everyone out to celebrate their anniversary.
6. The baseball team _____ (play) well for the entire tournament.
7. Our art teacher _____ (paint) a beautiful landscape before the rain started.
8. We _____ (eat) turkey, mashed potatoes, and gravy before dessert arrived.



Now try on your own:

1. Form a sentence using the past tense.

2. Form a sentence using the past perfect tense.


EVS

A. Fill in the Blanks

1. Dogs are known for their strong sense of _____.
2. The eagle can see things from a great _____.
3. Ants use their _____ to recognize the smell of other ants.
4. _____ do not have external ears but can feel vibrations.
5. Some animals can sense danger through their _____.

B. True or False

1. A mosquito uses its eyes to find humans.
2. Ants leave a smell on the ground as they move.
3. Tigers can see colors like humans.
4. Animals have sharper senses than human beings.
5. Snakes use their tongue to smell.



C. Match the Following

Column A	Column B
Eagle	Smell with tongue
Snake	Smell trail
Ant	Strong eyesight
Dog	Can feel vibrations

MATHS

Build a decimal number

Example: $43.287 = 40 + 3 + 0.2 + 0.08 + 0.007$

- | | |
|-------------------------------|--------------------------------|
| 1) _____ $7 + 0.2$ | 2) _____ $0.6 + 0.09 + 0.006$ |
| 3) _____ $0.7 + 0.09 + 0.007$ | 4) _____ $70 + 3 + 0.3$ |
| 5) _____ $20 + 2 + 0.9$ | 6) _____ $0.8 + 0.08 + 0.003$ |
| 7) _____ $0.4 + 0.09 + 0.009$ | 8) _____ $2 + 0.4 + 0.05$ |
| 9) _____ $90 + 1 + 0.1$ | 10) _____ $0.2 + 0.06 + 0.008$ |
| 11) _____ $70 + 3 + 0.9$ | 12) _____ $6 + 0.5 + 0.09$ |
| 13) _____ $9 + 0.8 + 0.06$ | 14) _____ $0.3 + 0.01 + 0.007$ |





NAME : RAKHI

ROLL NO.-00

WEDNESDAY 16 APRIL 2025

CLASS : 05

ASSIGNMENT NO. - 03

SCHOOL : IDEAL INTERNATIONAL SCHOOL

marks obtained						
full marks						
subject	english	hindi	maths	science	social science	total

Imagination is more important than knowledge. Imagination is the language of the soul.

Pay attention to your imagination and you will discover all you need to be fulfilled. Albert Einstein

Run-on sentences

Correct the run-on sentences by adding conjunctions and punctuation.

run-on sentence occurs when two or more independent clauses are not joined correctly.

1. We wanted to go to the store we decided to stay home.

2. All the parents came to our school play they all liked it.

3. I like to eat chocolate ice cream it is sweet and cool on a hot summer day.

4. Not only did she win the race also she set a record for the best time.

5. I can't sleep it is light outside.

6. Peter wants to be an astronaut he loves science.

7. My mom visits the museum she spends hours looking at the exhibits.

8. Music means a lot to me certain songs bring wonderful memories.

9. The teacher assigned a lot of homework she will be absent tomorrow.

10. Luke dances every day he is a very good dancer.



EVS

Which animal can see things clearly from far distances?

- a) Dog
- b) Eagle
- c) Cat
- d) Cow

Which animal uses its tongue to smell?

- a) Elephant
- b) Dog
- c) Snake
- d) Owl



Which sense do dogs use most to understand the world?

- a) Sight
- b) Smell
- c) Hearing
- d) Taste

B Fill in the Blanks

1. The ability to see, hear, smell, taste and touch is called _____.
2. Mosquitoes find us by the _____ of our body.
3. Animals that come out only at night are called _____.

MATHS

Find the missing place value from a 5-digit number

1) _____ + 90,000 + 600 + 9,000 + 8 = 99,638

2) _____ + 100 + 90 + 4,000 + 8 = 64,198

3) 20 + 50,000 + 400 + _____ + 3 = 56,423

4) 0 + 0 + 900 + 5,000 + _____ = 45,900

5) 6 + 700 + _____ + 10,000 + 70 = 16,776

6) 2 + 80 + _____ + 6,000 + 90,000 = 96,782

7) 90 + 30,000 + 600 + _____ + 5 = 33,695

8) 5 + 800 + 8,000 + _____ + 90 = 48,895

9) 6 + 600 + 6,000 + 20 + _____ = 96,626

10) 50,000 + 800 + 40 + _____ + 8 = 55,848

11) 4 + 20 + 600 + _____ + 20,000 = 22,624



NAME : RAKHI

ROLL NO.-00

CLASS : 05

SCHOOL : IDEAL INTERNATIONAL SCHOOL

MONDAY 14 APRIL 2025

ASSIGNMENT NO. - 02

marks obtained						
full marks						
subject	english	hindi	maths	science	social science	total

Do not lower your goals to the level of your abilities. Instead, raise your abilities to the height of your goals.

Swami Vivekananda

Subject and predicate

Underline the subject. Circle the predicate.

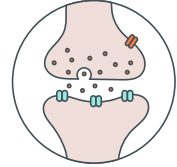
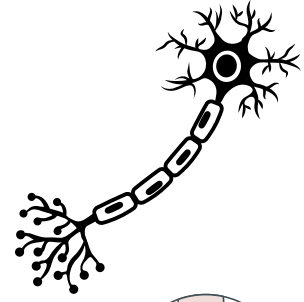
subject is what the sentence is about.
The **predicate** tells you what the subject does or is.

1. My brother and sister love to eat tacos and nachos on Tuesdays.
2. Susan and Charlie will do their homework and go to the library.
3. Those tables and chairs are going to be sold this weekend.
4. Alex, Ann, and Marie go to school and go to their jobs.
5. The boys and the girls are walking quickly to the restroom.
6. Her mom and dad call her every day.
7. My leg and my arm are both sore from my bike accident yesterday.
8. Mary and John watched this movie last week.
9. My grandma and my grandpa gave me an awesome new phone for my birthday.
10. I am going to the store to buy a pizza after school today.



EVS

1. Which nerve helps us feel touch, heat, and pain?
 - a) Motor nerve
 - b) Sensory nerve
 - c) Spinal nerve
 - d) Heart nerve
2. Which nerves carry signals from the brain to the muscles?
 - a) Motor nerves
 - b) Sensory nerves
 - c) Eye nerves
 - d) Ear nerves
3. If you quickly pull your hand away from something hot, which nerve helped you feel it?
 - a) Motor nerve
 - b) Sensory nerve
 - c) Skin nerve
 - d) Heat nerve
4. People who cannot see are called _____.
5. People who cannot hear are called _____.
6. People who use wheelchairs to move are _____ abled.
7. Differently abled people cannot go to school. — (True / False)
8. We should always respect and help differently abled people. — (True / False)



MATHS

Build a 5-digit number from the parts

Example: $71,836 = 70,000 + 1,000 + 800 + 30 + 6$

1. _____ $50,000 + 1,000 + 600 + 20 + 1$
2. _____ $80,000 + 9,000 + 900 + 50 + 7$
3. _____ $30,000 + 4,000 + 400 + 3$
4. _____ $10,000 + 1,000 + 700 + 90 + 7$
5. _____ $20,000 + 7,000 + 400 + 70 + 6$
6. _____ $20,000 + 9,000 + 800 + 10 + 2$
7. _____ $30,000 + 8,000 + 300 + 60 + 1$
8. _____ $90,000 + 2,000 + 300 + 90 + 2$
9. _____ $50,000 + 700 + 20,000 +$
10. _____ $1,000 + 800 + 70 + 1$





NAME : RAKHI

ROLL NO.-00

CLASS : 05

SCHOOL : IDEAL INTERNATIONAL SCHOOL

SATURDAY 12 APRIL 2024

ASSIGNMENT NO. - 01

marks obtained						
full marks						
subject	english	hindi	maths	science	social science	total

विद्यां ददाति विनयं, विनयाद् याति पात्रताम्। पात्रत्वात् धनमाप्नोति, धनात् धर्मं ततः सुखम्॥

विद्या से विनम्रता आती है, विनम्रता से पात्रता मिलती है। पात्रता से धन की प्राप्ति होती है, धन से धर्म और धर्म से सुख प्राप्त होता है।

A Visit to the Zoo

Last Sunday, Riya and her family went to the zoo. It was a sunny day. Riya was very excited as it was her first visit to the zoo. They saw many animals like lions, tigers, elephants, monkeys, and deer. Riya liked the monkeys the most because they were jumping and making funny faces.

They also saw colourful birds like parrots, peacocks, and owls. Riya took many photos with her father's phone. They spent almost three hours at the zoo. Before coming back, they ate ice cream and had fun.

Riya was tired but very happy. She said she wanted to visit the zoo again.

Choose the correct answer:

1. Riya liked the monkeys because they were:

- a) Sleeping
- b) Jumping and making funny faces
- c) Fighting

2. How many hours did they spend at the zoo?

- a) Two
- b) Three
- c) Four

3. What did Riya use to take photos?

- a) Her own camera
- b) Her mother's phone
- c) Her father's phone



Questions:


1. Who went to the zoo?

2. Which animal did Riya like the most? Why?

3. Name any two birds Riya saw at the zoo.

Family Tree

Look at the family tree and complete the sentences



- 1 Alex is Vicky's _____
- 2 David is Alex's _____
- 3 Tom is Vicky's _____
- 4 Walter is Alex's _____
- 5 Anne is Alex's _____

Build a 5-digit number from the parts

Example: $71,836 = 70,000 + 1,000 + 800 + 30 + 6$



1. _____ $30,000 + 100 + 4$
2. _____ $80,000 + 4,000 + 70 + 3$
3. _____ $40,000 + 5,000 + 700 + 70 + 6$
4. _____ $90,000 + 8,000 + 600 + 60 + 5$
5. _____ $60,000 + 1,000 + 600 + 10 + 1$
6. _____ $60,000 + 7,000 + 200 + 70 + 4$
7. _____ $60,000 + 5,000 + 600 + 60 + 4$
8. _____ $90,000 + 6,000 + 300 + 80 + 5$
9. _____ $30,000 + 7,000 + 300 + 90 + 9$
10. _____ $10,000 + 5,000 + 200 + 70 + 7$