



SAMPLE CLASS 4

© kashiguru.com

Phone no. 8797247733 / 9570032899

WHATSAPP no. 8797247733

kashiguru333@gmail.com



NAME : SHIVANSH KUMAR SINGH

CLASS : 4

ASSIGNMENT NO. - 01

SCHOOL : IDEAL INTERNATIONAL SCHOOL

Submission Date: 23rd JULY 2025

marks obtained						
full marks						
subject	english	hindi	maths	science	social science	total

गुरुर ब्रह्मा, गुरुर विष्णुः गुरुर देवो महेश्वरः।

गुरुः साक्षात् परं ब्रह्म तस्मै श्रीगुरवे नमः॥

Endangered Species



The majestic tiger, a symbol of strength and beauty, is sadly an endangered species. Due to habitat loss and poaching, their population has drastically declined. Conservation efforts are crucial to protect these magnificent creatures and ensure their survival. Organizations around the world are working tirelessly to preserve their habitats and combat illegal wildlife trade.

1) What is the current status of tigers?

2) What are the main threats to their population?

3) What efforts are being made to protect them?

SUBJECTS AND PREDICATES

Underline the **subject**. Circle the **predicate**.

subject is what the sentence is about.
A **predicate** tells us what the subject is or does.

1. I enjoy pizza with sausage and pepperoni.
2. The old house on the corner has a big garden in the backyard.
3. Lynn, my mom's best friend, plays cards with her family.
4. The hammer on the shelf can be used to work on the project.
5. Our dog, Rocky, loves to chase sticks and balls.
6. The shop owner, Jay, gives us free candy whenever we stop to say hello.
7. A microwave and a blender cannot both fit on the counter in my kitchen.
8. Amy, Carol, and Rachel went to France together for vacation.
9. Tom and Ann are going to have dinner at the restaurant.
10. My brother and my sister are studying in college.



A. Multiple Choice Questions (MCQs)

Food gives us —

- a) toys
- b) energy
- c) clothes
- d) books

We should eat —

- a) only junk food
- b) fresh and healthy food
- c) old food
- d) oily and spicy food only

Food reaches our stomach through the —

- a) windpipe
- b) esophagus
- c) intestine
- d) mouth

Which part of the body helps to chew food?

- a) Tongue
- b) Nose
- c) Teeth
- d) Ears

B. Fill in the Blanks

The journey of food starts from the _____.

We chew food with our _____.

The _____ helps in digesting food.

Our body gets _____ from food.


The food we eat turns into _____ in our body.

C. Think and Answer

What happens if we don't chew our food properly?

Why should we eat clean and fresh food?

What is digestion? Explain in simple words.



A. Multiple Choice Questions (MCQs)

Which of the following is not one of our five sense organs?

- a) Eyes
- b) Nose
- c) Liver
- d) Ears

We use our nose to —

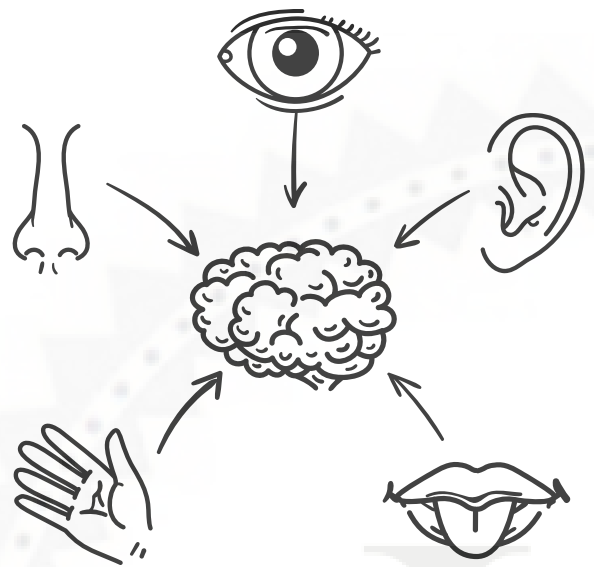
- a) see things
- b) taste food
- c) hear music
- d) smell flowers

Our skin helps us to —

- a) smell
- b) feel
- c) hear
- d) see

Which organ helps us maintain balance while walking or running?

- a) Eye
- b) Ear
- c) Nose
- d) Tongue



B. Fill in the Blanks

We have _____ sense organs.

The _____ helps us to see.

The _____ helps us to taste food.

We feel hot, cold, or pain through our _____.

The ear helps us to _____.

C. Answer in One Sentence

Name any three sense organs.

What does the tongue help us do?

Why are sense organs important?

Which sense organ helps us enjoy music?

ADDING 3-DIGIT NUMBERS IN COLUMNS (WITH REGROUPING)



Find the sum.

$$\begin{array}{r} 1. \quad 364 \\ + 941 \\ \hline \\ \hline \end{array}$$

$$\begin{array}{r} 2. \quad 470 \\ + 731 \\ \hline \\ \hline \end{array}$$

$$\begin{array}{r} 3. \quad 297 \\ + 972 \\ \hline \\ \hline \end{array}$$

$$\begin{array}{r} 4. \quad 321 \\ + 36 \\ \hline \\ \hline \end{array}$$

$$\begin{array}{r} 5. \quad 221 \\ + 943 \\ \hline \\ \hline \end{array}$$

$$\begin{array}{r} 6. \quad 100 \\ + 263 \\ \hline \\ \hline \end{array}$$

$$\begin{array}{r} 7. \quad 122 \\ + 684 \\ \hline \\ \hline \end{array}$$

$$\begin{array}{r} 8. \quad 818 \\ + 904 \\ \hline \\ \hline \end{array}$$

$$\begin{array}{r} 9. \quad 511 \\ + 790 \\ \hline \\ \hline \end{array}$$

$$\begin{array}{r} 10. \quad 5 \\ + 516 \\ \hline \\ \hline \end{array}$$

$$\begin{array}{r} 11. \quad 504 \\ + 783 \\ \hline \\ \hline \end{array}$$

$$\begin{array}{r} 12. \quad 323 \\ + 71 \\ \hline \\ \hline \end{array}$$

$$\begin{array}{r} 13. \quad 902 \\ + 624 \\ \hline \\ \hline \end{array}$$

$$\begin{array}{r} 14. \quad 187 \\ + 692 \\ \hline \\ \hline \end{array}$$

$$\begin{array}{r} 15. \quad 638 \\ + 491 \\ \hline \\ \hline \end{array}$$

$$\begin{array}{r} 16. \quad 700 \\ + 470 \\ \hline \\ \hline \end{array}$$

$$\begin{array}{r} 17. \quad 164 \\ + 2 \\ \hline \\ \hline \end{array}$$

$$\begin{array}{r} 18. \quad 958 \\ + 954 \\ \hline \\ \hline \end{array}$$

$$\begin{array}{r} 19. \quad 191 \\ + 176 \\ \hline \\ \hline \end{array}$$

$$\begin{array}{r} 20. \quad 283 \\ + 29 \\ \hline \\ \hline \end{array}$$



SUBTRACTING 3-DIGIT NUMBERS, WITH REGROUPING

Find the difference.

$$\begin{array}{r} 1. \quad 705 \\ - 136 \\ \hline \\ \hline \end{array}$$

$$\begin{array}{r} 2. \quad 253 \\ - 133 \\ \hline \\ \hline \end{array}$$

$$\begin{array}{r} 3. \quad 553 \\ - 298 \\ \hline \\ \hline \end{array}$$

$$\begin{array}{r} 4. \quad 795 \\ - 184 \\ \hline \\ \hline \end{array}$$

$$\begin{array}{r} 5. \quad 251 \\ - 153 \\ \hline \\ \hline \end{array}$$

$$\begin{array}{r} 6. \quad 658 \\ - 296 \\ \hline \\ \hline \end{array}$$

$$\begin{array}{r} 7. \quad 725 \\ - 371 \\ \hline \\ \hline \end{array}$$

$$\begin{array}{r} 8. \quad 556 \\ - 311 \\ \hline \\ \hline \end{array}$$

$$\begin{array}{r} 9. \quad 595 \\ - 488 \\ \hline \\ \hline \end{array}$$

$$\begin{array}{r} 10. \quad 249 \\ - 118 \\ \hline \\ \hline \end{array}$$

$$\begin{array}{r} 11. \quad 426 \\ - 281 \\ \hline \\ \hline \end{array}$$

$$\begin{array}{r} 12. \quad 277 \\ - 170 \\ \hline \\ \hline \end{array}$$



NAME : ABCD

ROLL NO.-00

THURSDAY 17 APRIL 2025

CLASS : 04

ASSIGNMENT NO. - 04

SCHOOL : IDEAL INTERNATIONAL SCHOOL

marks obtained						
full marks						
subject	english	hindi	maths	science	social science	total

Don't take rest after your first victory because if you fail in second, more lips are waiting to say that your first victory was just luck.

Abdul Kalam

Past perfect tenses

Rewrite the sentences in the past perfect tense.

1. I saw the movie.

2. Martha ate her dinner.

3. The computer worked well.

4. The driver went to the garage.

5. My parents said they were going to the new restaurant.

6. Lauren wanted to go to the Bahamas.

7. The team played very well.

8. The artist painted a beautiful painting.

Now try on your own:

1. Write a sentence using the **past** tense.

2. Write the same sentence using the **past perfect** tense.

Past tense
I played tennis.
Past perfect tense: ***I had played tennis.***



EVS

A. Fill in the Blanks

1. Animals with ears that can be seen give _____ to babies.
2. Animals like snakes do not have _____ ears.
3. Birds lay _____ and do not give birth to babies.
4. Animals with hair or fur on their body usually give birth to _____.
5. The shape and size of ears are _____ in different animals.

B. True or False

1. All animals have ears that we can see.
2. Birds give birth to babies.
3. Monkeys and dogs have visible ears.
4. Animals with fur on their bodies usually lay eggs.
5. Animals use their ears only to hear.

C. Match the Following

Column A	Column B
Elephant	Cannot see ears
Lizard	Gives birth to ba
Crow	Lays eggs
Dog	Has big ears



MATHS

Expanded form (numbers to 100,000)

Write the numbers in expanded form.

Example: $23,493 = 20,000 + 3,000 + 400 + 90 + 3$

- 1) 88,005 _____
- 2) 3,594 _____
- 3) 372 _____
- 4) 473 _____
- 5) 49,379 _____
- 6) 3,700 _____
- 7) 3,432 _____
- 8) 98,100 _____
- 9) 5,975 _____
- 10) 19,181 _____





NAME : RAKHI

ROLL NO.-00

WEDNESDAY 16 APRIL 2025

CLASS : 04

ASSIGNMENT NO. - 03

SCHOOL : IDEAL INTERNATIONAL SCHOOL

marks obtained						
full marks						
subject	english	hindi	maths	science	social science	total

Imagination is more important than knowledge. Imagination is the language of the soul.

Pay attention to your imagination and you will discover all you need to be fulfilled. Albert Einstein

Writing complete sentences

Give each fragment below a subject, and then rewrite the new sentence.

sentence forms a complete thought; it always has a subject and a verb.

- Leaves the house and goes to work in the city.
My mom leaves the house and goes to work in the city.
- Runs and plays in the yard all day.

- Wears the fanciest dresses in the whole world.

- Can do amazing tricks with a Frisbee and a tennis ball.

- Live in a small cage at the zoo and love to eat grasses.

- Reads to us at night from one of my favorite books.

- Cried when he fell and scraped his knee.

- Performed a song on the stage.


- Chases sticks whenever I throw them.

- Found a piece of candy on the floor and looked really excited.



A. Multiple Choice Questions (MCQs)

1. In Assam, children cross the river to go to school by using:
 - a) Bullock cart
 - b) Camel cart
 - c) Vallam (boat)
 - d) Bamboo bridge
2. Which vehicle is commonly used in deserts for going to school?
 - a) Trolley
 - b) Camel cart
 - c) Cycle
 - d) Bullock cart
3. What is a trolley used for in Ladakh?
 - a) To carry water
 - b) To play games
 - c) To cross rivers
 - d) To carry school bags




B. Fill in the Blanks

1. Children in hilly areas often use _____ to climb up and down.
2. In some villages of Kerala, children use a _____ to cross the water.
3. A _____ cart is used in deserts to travel.

MATHS

Missing place value (<10,000)

Find the missing numbers.



- 1) $2,182 = 2 + 100 + \underline{\hspace{1cm}} + 80$
- 2) $1,464 = 1,000 + 60 + \underline{\hspace{1cm}} + 4$
- 3) $1,054 = 0 + 50 + \underline{\hspace{1cm}} + 4$
- 4) $885 = 800 + \underline{\hspace{1cm}} + 80$
- 5) $1,975 = 5 + 70 + 900 + \underline{\hspace{1cm}}$
- 6) $8,466 = 8,000 + 400 + \underline{\hspace{1cm}} + 6$
- 7) $427 = \underline{\hspace{1cm}} + 7 + 400$
- 8) $4,911 = 1 + 4,000 + 900 + \underline{\hspace{1cm}}$
- 9) $5,215 = 5 + 10 + 200 + \underline{\hspace{1cm}}$
- 10) $8,460 = 60 + \underline{\hspace{1cm}} + 400 + 8,000$
- 11) $9,963 = 3 + 900 + \underline{\hspace{1cm}} + 60$
- 12) $971 = \underline{\hspace{1cm}} + 1 + 70$
- 13) $6,461 = 1 + 60 + 400 + \underline{\hspace{1cm}}$
- 14) $7,318 = 8 + \underline{\hspace{1cm}} + 7,000 + 10$
- 15) $8,826 = 6 + 800 + \underline{\hspace{1cm}} + 20$
- 16) $1,742 = \underline{\hspace{1cm}} + 700 + 1,000 + 40$
- 17) $981 = 80 + 1 + \underline{\hspace{1cm}}$
- 18) $3,197 = 100 + 3,000 + \underline{\hspace{1cm}} + 7$



NAME : RAKHI

ROLL NO.-00

CLASS : 04

SCHOOL : IDEAL INTERNATIONAL SCHOOL

MONDAY 14 APRIL 2025

ASSIGNMENT NO. - 02

marks obtained						
full marks						
subject	english	hindi	maths	science	social science	total

Do not lower your goals to the level of your abilities. Instead, raise your abilities to the height of your goals.

Swami Vivekananda

Sentences or fragments

Decide whether this is a **sentence** or a **fragment**. Write your choice on the line.

sentence forms a complete thought.
A fragment does not form a complete thought.

fragment

1. At the meeting.

2. That little girl.

3. We saw the dog.

4. The hamster and its wheel.

5. Today we are going to eat ham sandwiches.

6. Let's watch television!

7. Magazines on the shelf.

8. I am going to go to the library.

9. That money.


10. The book is great.

11. We enjoyed the film.

12. The scientist and the dinosaur that were in the car.

13. The boss decides.

14. They bought a new phone.



1. Who takes care of us and loves us in a family?

- a) Teacher
- b) Friends
- c) Family members
- d) Neighbours

2. What do we learn from our family?

- a) Fighting
- b) Good habits and values
- c) Playing games
- d) Nothing

True or False:

5. Families never change. — (True / False)

6. A family may become small or big over time. — (True / False)

3. A nuclear family has:

- a) Grandparents and cousins
- b) Parents and children
- c) All relatives
- d) None of these

4. A joint family includes:

- a) Only friends
- b) Parents and children only
- c) Grandparents, parents, and children
- d) Only cousins




MATHS

Build a 5-digit number from the parts

Example: $71,836 = 70,000 + 1,000 + 800 + 30 + 6$

Write the 5-digit numbers

1. _____ $40,000 + 2,000 + 400 + 60 + 8$
2. _____ $70,000 + 5,000 + 200 + 30 + 5$
3. _____ $40,000 + 5,000 + 500 + 80$
4. _____ $90,000 + 1,000 + 400 + 60 + 3$
5. _____ $10,000 + 2,000 + 800 + 30 + 7$
6. _____ $10,000 + 8,000 + 400 + 10 + 4$
7. _____ $10,000 + 9,000 + 400 + 40 + 3$
8. _____ $70,000 + 3,000 + 900 + 70 + 1$
9. _____ $20,000 + 2,000 + 400 + 20 + 3$
10. _____ $40,000 + 5,000 + 300 + 30 + 9$





NAME : RAKHI

ROLL NO.-00

CLASS : 04

SCHOOL : IDEAL INTERNATIONAL SCHOOL

SATURDAY 12 APRIL 2025

ASSIGNMENT NO. - 01

marks obtained						
full marks						
subject	english	hindi	maths	science	social science	total

विद्यां ददाति विनयं, विनयाद् याति पात्रताम्। पात्रत्वात् धनमाप्नोति, धनात् धर्मं ततः सुखम्॥

विद्या से विनम्रता आती है, विनम्रता से पात्रता मिलती है। पात्रता से धन की प्राप्ति होती है, धन से धर्म और धर्म से सुख प्राप्त होता है।

1. Fill in the blanks with correct articles (a, an, the):

a) It is _____ orange.

b) He saw _____ elephant in the zoo.

c) She has _____ pencil.

d) I want to eat _____ apple.

e) _____ sun rises in the east.



My Pet Cat

I have a pet cat. Her name is Mini. She is white in colour and has big green eyes. Mini is very playful and loves to run around the house. She also likes to sit near the window and watch the birds.

Every morning, I give her milk and biscuits. She meows when she is hungry. At night, she sleeps on a soft mat near my bed. I love Mini a lot. She is my best friend.



2. Questions:

What is the name of the cat?

What colour is Mini?

Family Member



Match the picture and word. Encircle the correct answer.



brother mother father



sister brother mother



brother sister father



son grandmother father



brother son sister



father family sister



Build a 4-digit number from the parts



Example: $1,836 = 1,000 + 800 + 30 + 6$

Write the 4-digit numbers

1. _____ $1,000 + 800 + 90 + 3$

2. _____ $7,000 + 700 + 40 + 7$

3. _____ $1,000 + 800 + 10 + 7$

4. _____ $5,000 + 200 + 40 + 2$

5. _____ $2,000 + 200 + 40 + 2$

6. _____ $3,000 + 800 + 40 + 1$

7. _____ $8,000 + 100 + 30 + 8$

8. _____ $4,000 + 600 + 70 + 2$

9. _____ $8,000 + 200 + 90 + 5$

10. _____ $6,000 + 100 + 40$



NAME : SAFAK FIROZ

ROLL NO.- 01

CLASS : 04

SCHOOL : IDEAL INTERNATIONAL SCHOOL RANCHI

THU 12 DECEMBER 2024

TIME : 1 hr

TEST -1

Elephants are the largest land animals in the world. They are known for their big ears, long trunk, and strong tusks. Elephants live in forests and grasslands and are mostly found in Africa and Asia. They eat grass, leaves, fruits, and bark.

Elephants are very intelligent animals. They can recognise their friends, help each other, and even play! They use their trunks to drink water, lift heavy things, and pick up food. An elephant's tusks are made of ivory and are very strong.

Sadly, some people hunt elephants for their tusks, which is illegal. To protect them, many countries have created wildlife reserves where elephants can live safely. Elephants are important to the environment because they help spread seeds and create paths in the forests.

1. Where are elephants mostly found?

- a) Europe and America
- b) Africa and Asia
- c) Australia and Antarctica
- d) Canada and Russia

2. What do elephants use their trunks for?

- a) Running fast
- b) Drinking water and lifting things
- c) Fighting with other animals
- d) Sleeping

3. What are elephant tusks made of?

- a) Bones
- b) Ivory
- c) Wood
- d) Stone

4. Why are wildlife reserves important for elephants?

- a) To keep them in cages
- b) To protect them from hunters
- c) To train them to perform tricks
- d) To teach them to find food

5. How do elephants help the environment?

- a) By building houses
- b) By spreading seeds and creating forest paths
- c) By eating grass
- d) By carrying water



पौधे हमारे जीवन के लिए बहुत उपयोगी होते हैं। वे हमें ऑक्सीजन प्रदान करते हैं, जो सांस लेने के लिए जरूरी है। पौधों से हमें फल, सब्जियां, लकड़ी और दवाइयां मिलती हैं। पेड़ों की छाया में लोग आराम करते हैं और गर्मी से बचते हैं। पौधों की जड़ें मिट्टी को पकड़ कर रखती हैं, जिससे भूमि का कटाव नहीं होता। वर्षा होने पर पेड़-पौधे पानी को जमीन में सोखने में मदद करते हैं। वे पर्यावरण को साफ और सुंदर बनाते हैं। हम सभी को पेड़ों की देखभाल करनी चाहिए और नए पौधे लगाने चाहिए। यदि हम पेड़ों को काटते रहेंगे, तो पर्यावरण गंदा हो जाएगा और हमारा जीवन कठिन हो जाएगा। इसीलिए, हमें पेड़-पौधों की सुरक्षा करनी चाहिए।

1. पौधे हमें क्या प्रदान करते हैं?

- a) ऑक्सीजन और दवाइयां
- b) केवल फल
- c) केवल लकड़ी
- d) केवल छाया

2. पौधों की जड़ें किसमें मदद करती हैं?

- a) पानी को उबालने में
- b) भूमि को कटने से बचाने में
- c) हवा को ठंडा करने में
- d) पक्षियों को खाना देने में

3. वर्षा के समय पौधे क्या करते हैं?

- a) पानी को मिट्टी में सोखने में मदद करते हैं
- b) पानी को उबालते हैं
- c) पानी को रोकते हैं
- d) पानी को सूखाते हैं

4. पेड़ों को काटने से क्या होगा?

- a) पर्यावरण साफ होगा
- b) पर्यावरण गंदा होगा
- c) बारिश बढ़ेगी
- d) फल अधिक मिलेंगे

5. हमें क्या करना चाहिए?

- a) पेड़-पौधों की कटाई करनी चाहिए
- b) पेड़-पौधों की सुरक्षा करनी चाहिए
- c) पेड़ जलाने चाहिए
- d) पौधों को हटा देना चाहिए



1. Which sense organ helps us to identify different smells?

- a) Eyes
- b) Nose
- c) Ears
- d) Tongue

2. Where does the process of digestion begin in our body?

- a) Stomach
- b) Small intestine
- c) Mouth
- d) Large intestine

3. What is the main purpose of a roof in a house?

- a) To keep the house warm
- b) To protect from rain and sunlight
- c) To make the house look beautiful
- d) To provide extra space

4. What is the shelter of a lion called?

- a) Kennel
- b) Den
- c) Stable
- d) Burrow

5. Which bird is known for its ability to mimic human speech?

- a) Crow
- b) Sparrow
- c) Parrot
- d) Eagle

MATHS

1. If a box has 125 pencils and another box has 248 pencils, how many pencils are there in total?

- a) 373
- b) 363
- c) 383
- d) 353

2. Subtract 457 from 682. What is the result?

- a) 235
- b) 225
- c) 215
- d) 245

3. A farmer has 12 baskets of apples. Each basket contains 15 apples. How many apples does the farmer have in total?

- a) 170
- b) 180
- c) 160
- d) 150

4. Divide 144 by 12. What is the quotient?

- a) 10
- b) 11
- c) 12
- d) 13

5. Which of the following is a factor of 36?

- a) 7
- b) 9
- c) 11
- d) 13

