



# SAMPLE CLASS 1

© kashiguru.com

Phone no. 8797247733 / 9570032899

WHATSAPP no. 8797247733

kashiguru333@gmail.com



NAME : SHIVANSH KUMAR SINGH

CLASS : 1

ASSIGNMENT NO. - 02

SCHOOL : IDEAL INTERNATIONAL SCHOOL

Submission Date: 29th JULY 2025

marks obtained						
full marks						
subject	english	hindi	maths	science	social science	total

Knowledge gives humility, humility brings worthiness,

Worthiness brings wealth, and wealth brings righteousness and happiness.

# I Can Read CVC Stories

Read the story and answer the following questions.

## Tom The Cop

This is Tom.


He is a cop.

Tom went to find a dog.

The dog hid in a box.

Tom found the dog.

The dog hops on Tom.




Tom is a \_\_\_\_\_.

cop



fox



Tom went to find  
a \_\_\_\_\_.

dog




log

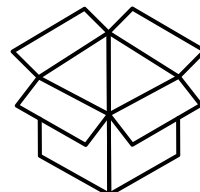


The dog hid in a  
\_\_\_\_\_.

pot




box



# My family tree

Look at the family tree below. Recognize each family member then cut and paste their names where they correspond.



Grandmother

Mother

Aunt

Uncle

Brother

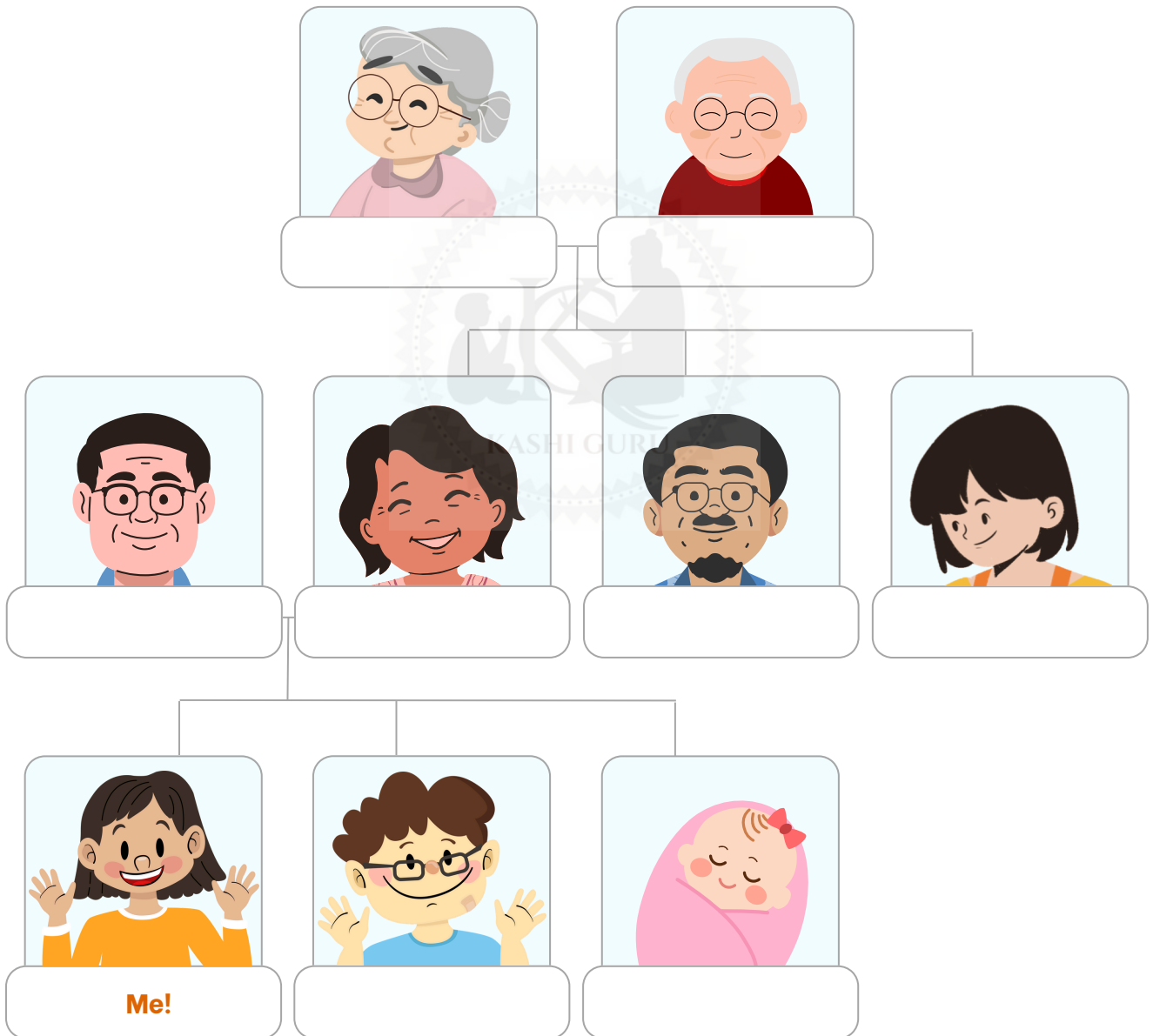
Sister

Father

Grandfather

# My family tree

Look at the family tree below. Recognize each family member then cut and paste their names where they correspond.



Grandmother

Mother

Aunt

Uncle

Brother

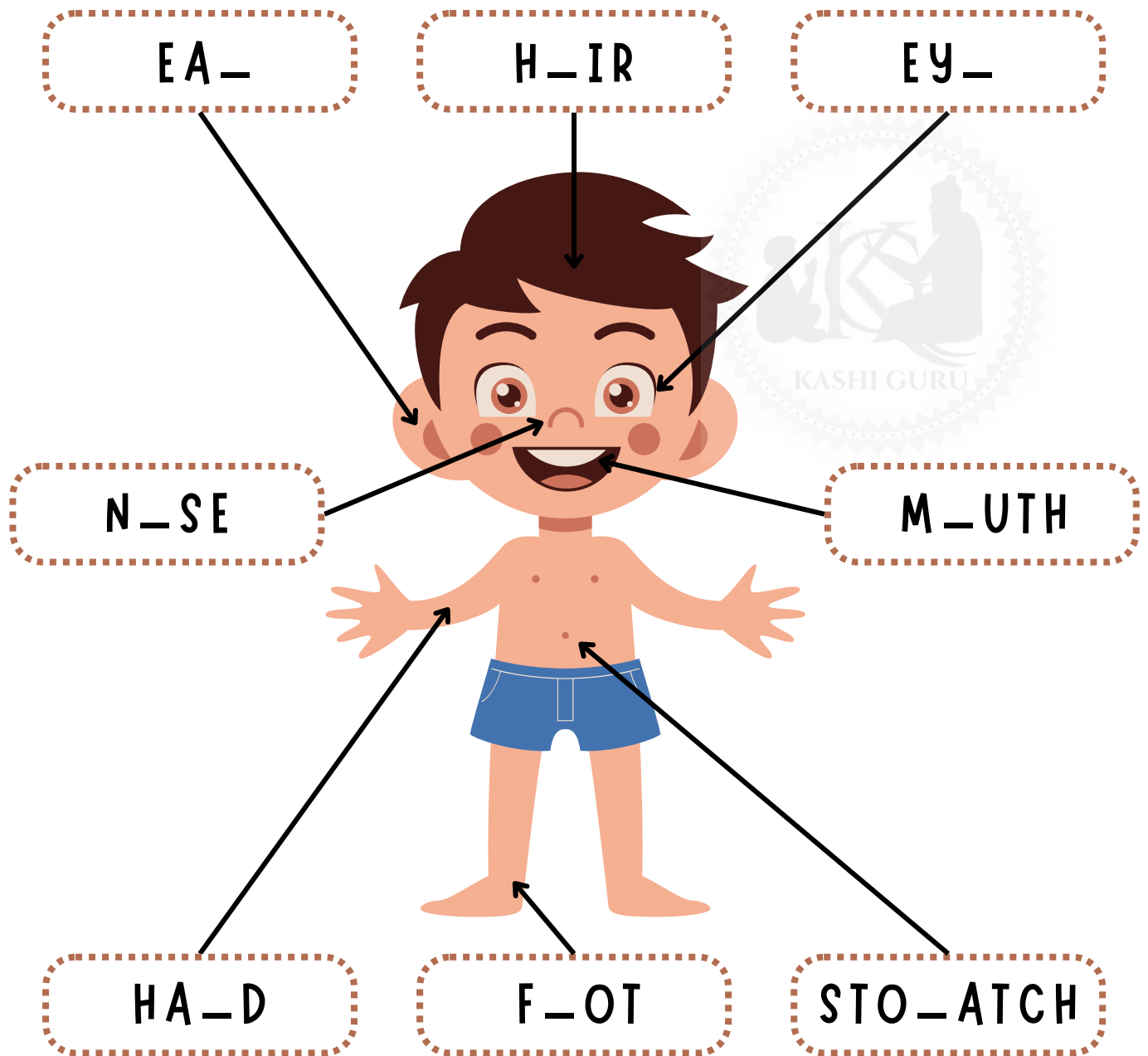
Sister

Father

Grandfather

# Body Parts Name

Fill the Missing Letter to Complete the body parts name



## ADDING WITH OBJECTS

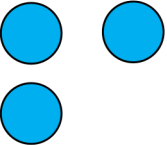
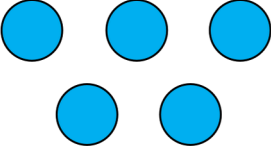
Count / draw circles, read / write numbers and find the sums.

 +        $\underline{\quad} + \underline{\quad} = \underline{\quad}$

 +        $\underline{\quad} + \underline{\quad} = \underline{\quad}$

 +        $4 + 2 = \underline{\quad}$


 +        $\underline{\quad} + \underline{\quad} = \underline{\quad}$

 +        $3 + 5 = \underline{\quad}$


 +        $1 + 6 = \underline{\quad}$

## SUBTRACTION USING PICTURES


Count the circles. Write the total. Then, cross out circles according to the equation, and write the difference.




$5 - 3 = \underline{2}$




$7 - 6 = \underline{\quad}$




$4 - 2 = \underline{\quad}$




$6 - 1 = \underline{\quad}$



$9 - 5 = \underline{\quad}$



$3 - 1 = \underline{\quad}$



$8 - 5 = \underline{\quad}$

HINDI

जोड़ी

इ .  
अं .  
ओ .  
आ .  
ऊ .  
ए .  
ई .  
अ .  
उ .  
ऋ .  
ऐ .  
औ .





# EVS

## Living things

Circle the living things.




Draw a living thing.

Draw a non-living thing.

## Living things

Circle the living things.



Draw a living thing.

Draw a non-living thing.

# MATHS

## Write number words (1-10)

Trace and write the number words.

1	One	One
2	Two	
3	Three	
4	Four	
5	Five	
6	Six	
7	Seven	
8	Eight	
9	Nine	
10	Ten	

## Write number words (11-20)

Trace and write the number words.

**11**

Eleven

Eleven

**12**

Twelve

**13**

Thirteen

**14**

Fourteen

**15**

Fifteen

**16**

Sixteen

**17**

Seventeen

**18**

Eighteen

**19**

Nineteen

**20**

Twenty



NAME : ARHAN ANSARI

ROLL NO.-00

THURSDAY 17 APRIL 2025

CLASS : 01

ASSIGNMENT NO. - 04

SCHOOL : IDEAL INTERNATIONAL SCHOOL

marks obtained						
full marks						
subject	english	hindi	maths	science	social science	total

Don't take rest after your first victory because if you fail in second, more lips are waiting to say that your first victory was just luck.

Abdul Kalam

## Identifying Nouns

Circle each noun.

A noun is a person,  
place or thing

the

big

Tom

bus

door

cat

stick

ate

win

this

on

child

apple

mom

pen

rug

go

is

one

how

dog

bike

sun

desk

room

find

are

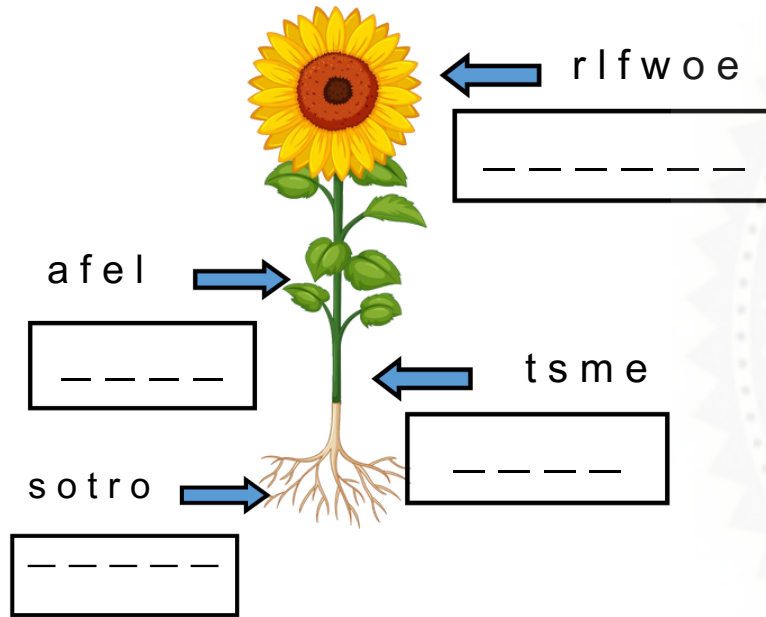
it

red

me

## Parts of a plant

Unscramble the letters to name the different parts of a plant.



## Write number words (11-20)

Trace and write the number words.

**11**

Eleven

Eleven

**12**

Twelve

**13**

Thirteen

**14**

Fourteen

**15**

Fifteen

**16**

Sixteen

**17**

Seventeen

**18**

Eighteen

**19**

Nineteen

**20**

Twenty





NAME : SAFAK FIROZ

ROLL NO.- 01

CLASS : 1

SCHOOL : IDEAL INTERNATIONAL SCHOOL RANCHI

THU 12 DECEMBER 2024

TIME :  :

LEVEL: 1

ASSIGNMENT NO. - 4

"माता-पिता का सम्मान करना हमारे जीवन का सबसे बड़ा कर्तव्य है,  
क्योंकि वे हमें बिना शर्त प्यार और देखभाल देते हैं।"

# RHYMING WORDS

Circle the word(s) that rhymes with each picture:



rain trail brain sky




rock box drop rope



lump cow rail mail



make rake bite snail



pop pug pot big



far guitar star bar



deer beep leap dam



look lion book horse


# Place Value | Tens & Ones

**Instructions:** Partition these numbers into their tens and ones place value:

**1**

Tens	Ones


45 =



**7**

Tens	Ones


8 =



**2**

Tens	Ones


16 =



**8**

Tens	Ones


10 =



**3**

Tens	Ones


5 =



**9**

Tens	Ones


30 =



**4**

Tens	Ones


93 =



**10**

Tens	Ones


17



**5**

Tens	Ones


55 =



**11**

Tens	Ones


84 =



**6**

Tens	Ones

55 =



**12**

Tens	Ones

71

