



Tell the Time - Quarter To/Past

Lower Primary Advance Maths

Look at the clocks and write the time in the box provided.



Quarter to five

Quarter to three

Quarter to nine

Quarter to ten

Quarter past four

Quarter past seven

Quarter past twelve


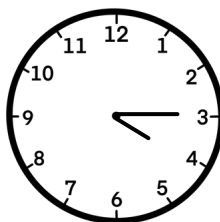

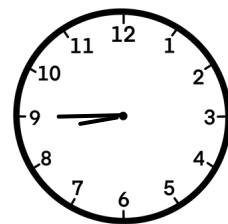


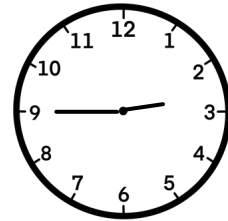
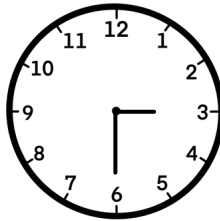




Quarter past eight

Half past nine

Half past one

Half past three

Half past eleven





Tell the Time - Quarter To/Past - Solutions

Lower Primary Advance Maths

Look at the clocks and write the time in the box provided.



Quarter to five

Quarter to three

Quarter to nine

Quarter to ten

Quarter past four

Quarter past seven

Quarter past twelve


Quarter past eight

Half past nine


Half past one

Half past three


Half past eleven




Quarter to five



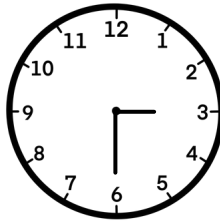
Quarter past eight



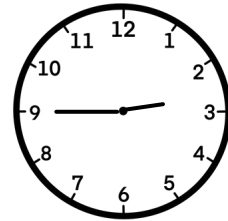
Half past nine




Half past one




Half past three



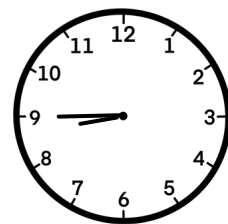
Quarter to three




Quarter past seven



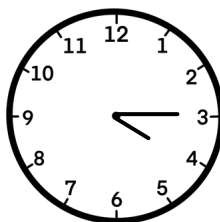
Quarter past twelve




Quarter to nine



Quarter to ten



Quarter past four



Half past eleven