


Subtraction Word Problems within 20 - Activity 2

Lower Primary Advance Maths


Show your workings clearly and write your answers in the spaces provided.

1. Jake had 9 waffles.
He ate 5 of it.
How many waffles did Jake have left?



$$\square \bigcirc \square = \square$$

2. Sara has 17 pencils.
She lost 2 of them at school.
How many pencils did Sara have left?



$$\square \bigcirc \square = \square$$

3. Sam has 10 marbles.
He dropped 4 marbles on his way home.
How many marbles did Sam have in the end?



$$\square \bigcirc \square = \square$$

Subtraction Word Problems within 20 - Activity 2 - Solutions



Lower Primary Advance Maths


Show your workings clearly and write your answers in the spaces provided.

1. Jake had 9 waffles.
He ate 5 of it.
How many waffles did Jake have left?



$$\boxed{9} - \boxed{5} = \boxed{4}$$

2. Sara has 17 pencils.
She lost 2 of them at school.
How many pencils did Sara have left?



$$\boxed{17} - \boxed{2} = \boxed{15}$$

3. Sam has 10 marbles.
He dropped 4 marbles on his way home.
How many marbles did Sam have in the end?



$$\boxed{10} - \boxed{4} = \boxed{6}$$