

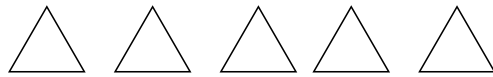
## Subtraction Sentences

Lower Primary Beginner Maths

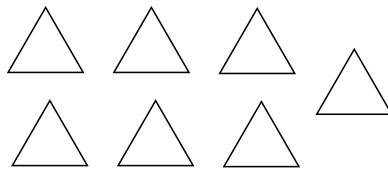
Fill in the missing numbers. Colour the triangles to help.



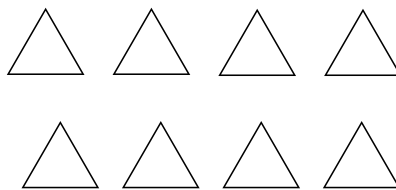
$$5 - \square = 3$$




$$7 - \square = 6$$



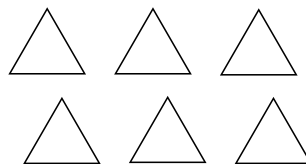
$$8 - \square = 3$$



$$9 - \square = 2$$



$$6 - \square = 5$$



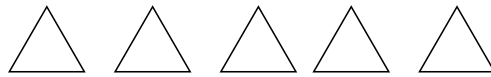
## Subtraction Sentences - Solutions

Lower Primary Beginner Maths

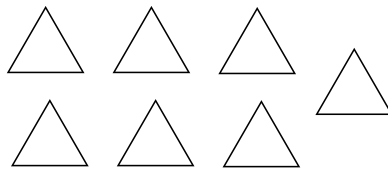
Fill in the missing numbers. Colour the triangles to help.



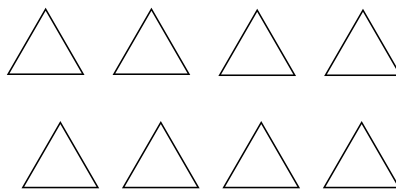
$$5 - \boxed{2} = 3$$




$$7 - \boxed{1} = 6$$



$$8 - \boxed{5} = 3$$



$$9 - \boxed{7} = 2$$



$$6 - \boxed{1} = 5$$

