


Simple Ratios

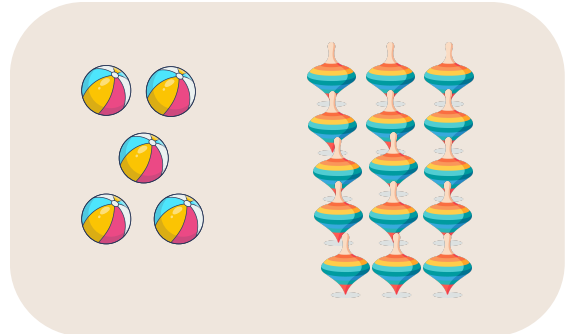
Upper Primary Advance Maths

Find the ratios of each section and then simplify it .



Ratio of  to  = _____

Simplified = _____



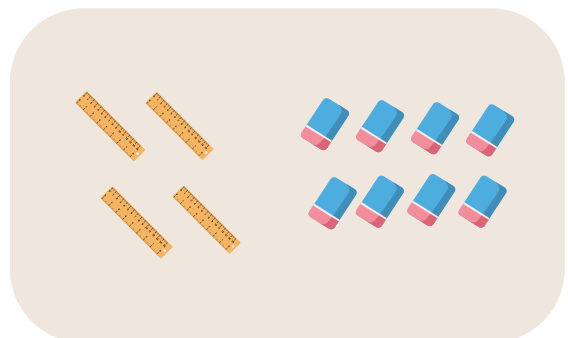
Ratio of  to  = _____

Simplified = _____




Ratio of  to  = _____

Simplified = _____




Ratio of  to  = _____

Simplified = _____



Ratio of  to  = _____

Simplified = _____




Ratio of  to  = _____

Simplified = _____

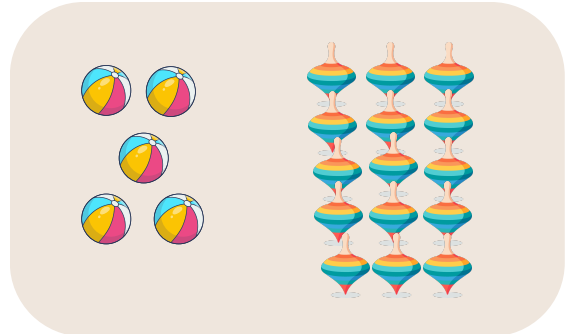
Simple Ratios - Solutions

Upper Primary Advance Maths

Find the ratios of each section and then simplify it .



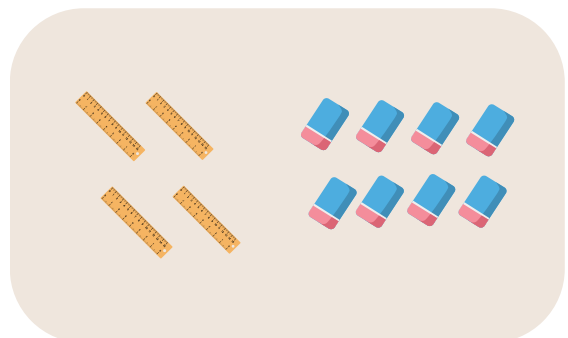
Ratio of  to  = $3 : 9$
Simplified = $1 : 3$




Ratio of  to  = $5 : 15$
Simplified = $1 : 3$




Ratio of  to  = $2 : 6$
Simplified = $1 : 3$



Ratio of  to  = $4 : 8$
Simplified = $1 : 2$



Ratio of  to  = $4 : 16$
Simplified = $1 : 4$



Ratio of  to  = $6 : 9$
Simplified = $2 : 3$