































Picture graph - Cookies


Middle Primary Beginner Maths

Understand the picture graph. Answer the questions below.

Five friends recorded the number of Christmas cookies they had baked.



Name	Number of Christmas Cookies
Ned	     
Liam	  
James	      
Zoe	     
Oli	       

 = 8 cookies

- How many cookies did James bake?
- Who baked 24 cookies?
- Who baked the same number of cookies?
- How many cookies did Liam and Zoe baked together?
- Two friends baked a total of 80 cookies Who were they?
- How many more cookies did Oli baked than Zoe?
- Who baked more cookies than Ned but less than Oli?
- If Zoe baked 12 more cookies, how many cookies would she have?































Picture graph - Cookies - Solutions


Middle Primary Beginner Maths

Understand the picture graph. Answer the questions below.

Five friends recorded the number of Christmas cookies they had baked.



Name	Number of Christmas Cookies
Ned	     
Liam	  
James	      
Zoe	     
Oli	       

 = 8 cookies

- How many cookies did James bake?
- Who baked 24 cookies?
- Who baked the same number of cookies?
- How many cookies did Liam and Zoe baked together?
- Two friends baked a total of 80 cookies Who were they?
- How many more cookies did Oli baked than Zoe?
- Who baked more cookies than Ned but less than Oli?
- If Zoe baked 12 more cookies, how many cookies would she have?

56

Liam

Ned and Zoe

72

James and Liam

16

James

144