


Life Cycles

Middle Primary Beginner Science

Read each question and circle the correct answer.

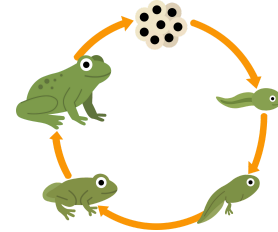
1. Series of changes a living thing goes through from birth to grown-up and then starting a new one with babies is called a _____.

- A) Cycle
- B) Phase
- C) Pattern




2. What is the correct order for the frog before it develops lungs?

- A) Grows legs, Loses tails, Tadpole
- B) Eggs, Tadpole, Gills
- C) Loses tail, Eggs, Tadpole




3. What is the first stage in a butterfly's life cycle?

- A) Chrysalis
- B) Caterpillar
- C) Egg



4. What comes after a seed starts growing?

- A) Seedling
- B) Flower
- C) Mature Plant



5. What does a plant need to grow?

- A) Only sunlight
- B) Water, sunlight, air, and soil
- C) Just wind




Life Cycles - Solutions

Middle Primary Beginner Science

Read each question and circle the correct answer.

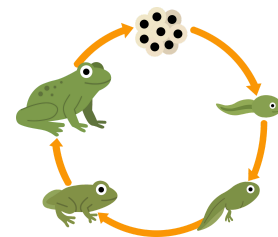
1. Series of changes a living thing goes through from birth to grown-up and then starting a new one with babies is called a _____.

- A) **Cycle**
- B) Phase
- C) Pattern




2. What is the correct order for the frog before it develops lungs?

- A) Grows legs, Loses tails, Tadpole
- B) **Eggs, Tadpole, Gills**
- C) Loses tail, Eggs, Tadpole




3. What is the first stage in a butterfly's life cycle?

- A) Chrysalis
- B) Caterpillar
- C) **Egg**



4. What comes after a seed starts growing?

- A) **Seedling**
- B) Flower
- C) Mature Plant



5. What does a plant need to grow?

- A) Only sunlight
- B) **Water, sunlight, air, and soil**
- C) Just wind

