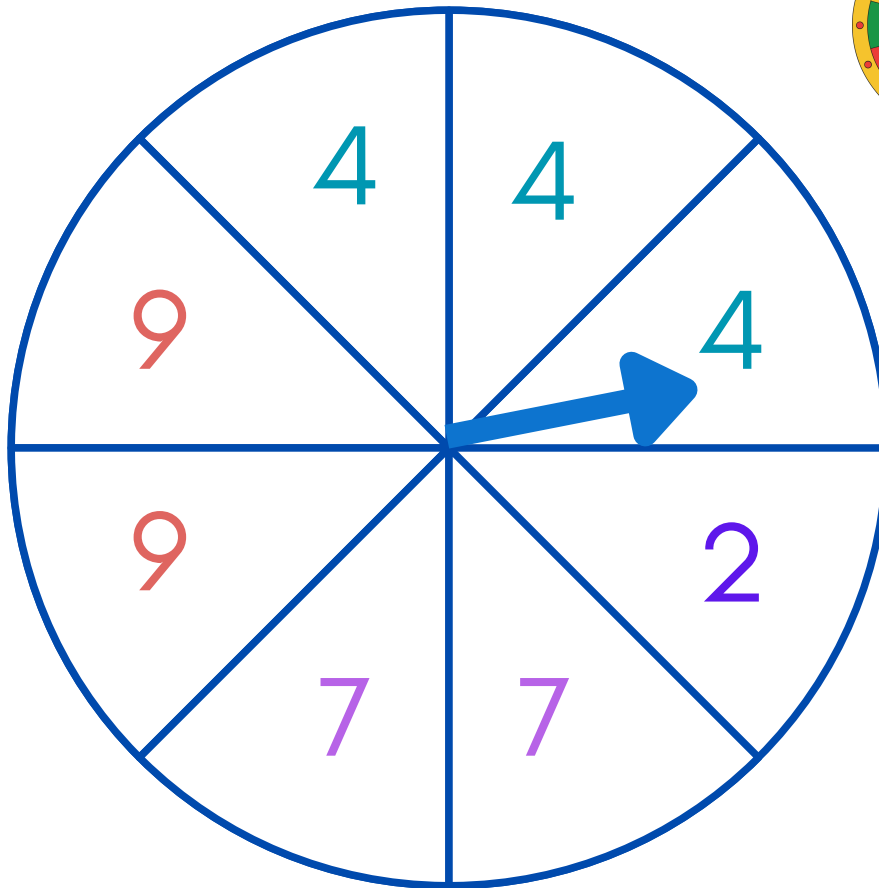



Fractional Probability

Middle Primary Advance Maths

Answer the questions about the spinner.

PROBABILITY



1. What is the probability of landing on a 2 ?

2. What is the probability of landing on a 7 ?

3. What is the probability of landing on an odd number ?

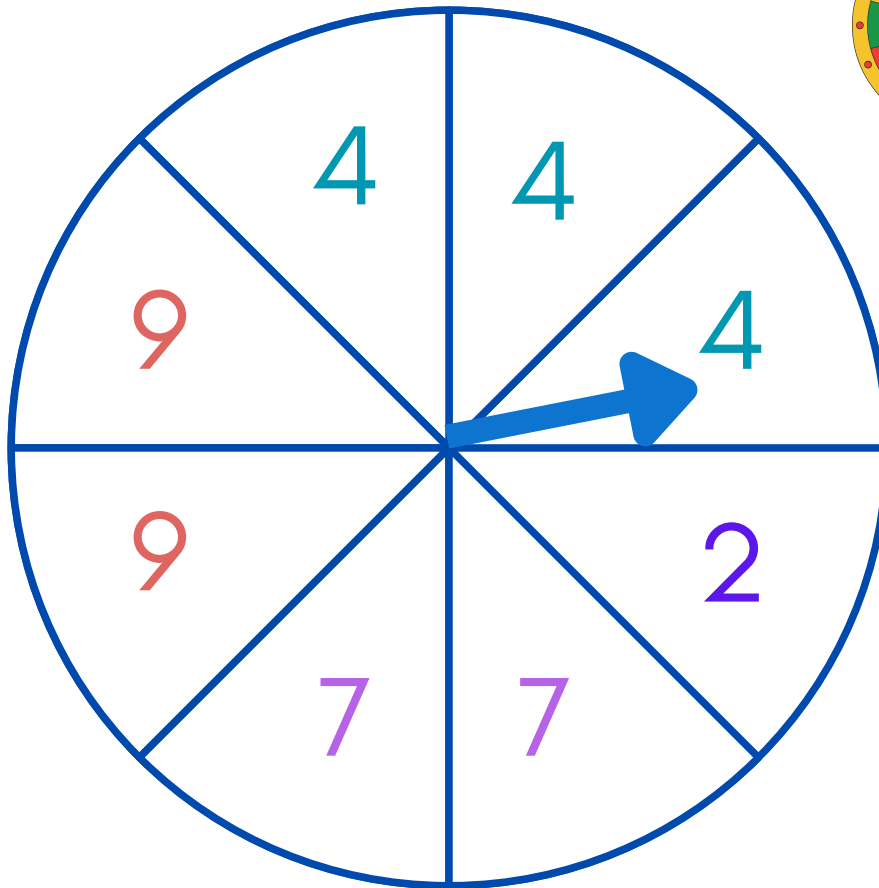
4. What is the probability of landing on less than 9 ?

Fractional Probability - Solutions

Middle Primary Advance Maths

Answer the questions about the spinner.

PROBABILITY



1. What is the probability of landing on a 2 ?

$$\frac{1}{8}$$

2. What is the probability of landing on a 7 ?

$$\frac{1}{4} \text{ or } \frac{2}{8}$$

$$\frac{2}{8}$$

3. What is the probability of landing on an odd number ? $\frac{1}{2}$ or $\frac{4}{8}$

$$\frac{4}{8}$$

4. What is the probability of landing on less than 9 ?

$$\frac{3}{4} \text{ or } \frac{6}{8}$$

$$\frac{6}{8}$$