


# Counting

Pre- Primary Advance Maths

Circle a set of 10. Then count on to find the number of objects.


1.



10 and 2 make \_\_\_\_\_

$10 + 2 = \underline{\hspace{2cm}}$


2.



10 and \_\_\_\_ make \_\_\_\_\_

$10 + \underline{\hspace{1cm}} = \underline{\hspace{2cm}}$

3.



10 and \_\_\_\_ make \_\_\_\_\_


$10 + \underline{\hspace{1cm}} = \underline{\hspace{2cm}}$

## Counting - Solutions

Pre- Primary Advance Maths

Circle a set of 10. Then count on to find the number of objects.


1.



10 and 2 make 12

$$10 + 2 = \underline{12}$$


2.



10 and 7 make 17

$$10 + \underline{7} = \underline{17}$$

3.



10 and 5 make 15

$$10 + \underline{5} = \underline{15}$$