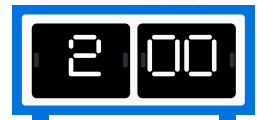
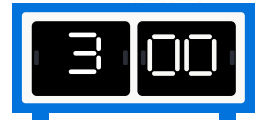






Analog and Digital Time- Activity 2

Middle Primary Beginner Maths

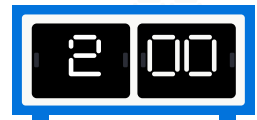
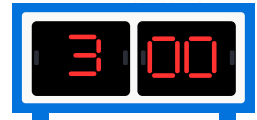

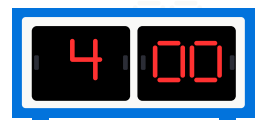

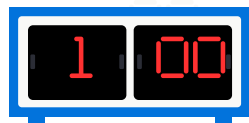
Circle the digital clock that matches the analog time.



Analog and Digital Time- Activity 2 - Solutions

Middle Primary Beginner Maths

Circle the digital clock that matches the analog time.



Analog and Digital Time - Activity 1- Solutions

Middle Primary Beginner Maths

Circle the digital clock that matches the analog time.

