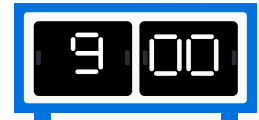




# Analog and Digital Time- Activity 1

Middle Primary Beginner Maths

Circle the digital clock that matches the analog time.



# Analog and Digital Time - Activity 1- Solutions

Middle Primary Beginner Maths

Circle the digital clock that matches the analog time.

