

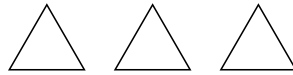
## Addition Sentences

Lower Primary Beginner Maths


Fill in the missing numbers. Colour the triangles to help.



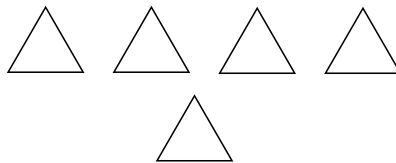
$$1 + \square = 3$$




$$3 + \square = 6$$




$$3 + \square = 5$$



$$1 + \square = 7$$



$$4 + \square = 9$$



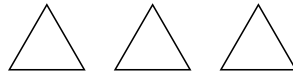
## Addition Sentences - Solutions

Lower Primary Beginner Maths


Fill in the missing numbers. Colour the triangles to help.



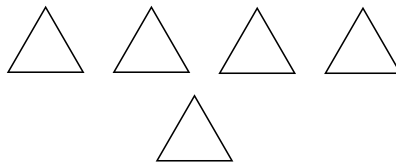
$$1 + \boxed{2} = 3$$




$$3 + \boxed{3} = 6$$



$$3 + \boxed{2} = 5$$



$$1 + \boxed{6} = 7$$



$$4 + \boxed{5} = 9$$

