

# LOWER PRIMARY

## Beginner Maths

### E-Booklet Part 3



# Place Values - Tens and Ones

Lower Primary Beginner Maths


Partition the numbers into their tens and ones place value.

1

Tens

Ones

25 =




7

Tens

Ones

6 =




2

Tens

Ones

17 =




8

Tens

Ones

13 =




3

Tens

Ones

19 =




9

Tens

Ones

32 =




4

Tens

Ones

93 =




10

Tens

Ones

82 =




5

Tens

Ones

53 =




11

Tens

Ones

76 =




6

Tens

Ones

28 =




12

Tens

Ones

49 =



# Place Values - Tens and Ones - Solutions


Lower Primary Beginner Maths

Partition the numbers into their tens and ones place value.

**1**

Tens	Ones
2	5


25 =



**7**

Tens	Ones
0	6

6 =



**2**

Tens	Ones
1	7

17 =



**8**

Tens	Ones
1	3


13 =



**3**

Tens	Ones
1	9


19 =



**9**

Tens	Ones
3	2


32 =



**4**

Tens	Ones
9	3


93 =



**10**

Tens	Ones
8	2


82 =



**5**

Tens	Ones
5	3


53 =



**11**

Tens	Ones
7	6


76 =



**6**

Tens	Ones
2	8


28 =



**12**

Tens	Ones
4	9

49 =





# Counting Backwards - Activity 1

Lower Primary Beginner Maths

Count backwards from the first number and write these numbers in the boxes. One example is done for you.

12	11	10
----	----	----

4		
---	--	--

15		
----	--	--

21		
----	--	--

8		
---	--	--

17		
----	--	--

9		
---	--	--

25		
----	--	--

16		
----	--	--

11		
----	--	--

3		
---	--	--

22		
----	--	--

13		
----	--	--

28		
----	--	--



# Counting Backwards Activity 1 - Solutions

Lower Primary Beginner Maths

Count backwards from the first number and write these numbers in the boxes. One example is done for you.

12	11	10
----	----	----

4	3	2
---	---	---

15	14	13
----	----	----

21	20	19
----	----	----

8	7	6
---	---	---

17	16	15
----	----	----

9	8	7
---	---	---

25	24	23
----	----	----

16	15	14
----	----	----

11	10	9
----	----	---

3	2	1
---	---	---

22	21	20
----	----	----

13	12	11
----	----	----

28	27	26
----	----	----



# Counting Backwards - Activity 2

Lower Primary Beginner Maths

Count backwards from the first number and write these numbers in the boxes. One example is done for you.

45	43	42
----	----	----

32		
----	--	--

23		
----	--	--

62		
----	--	--

55		
----	--	--

37		
----	--	--

78		
----	--	--

90		
----	--	--

88		
----	--	--

71		
----	--	--

46		
----	--	--

94		
----	--	--

29		
----	--	--

38		
----	--	--



# Counting Backwards Activity 2 Solutions

Lower Primary Beginner Maths

Count backwards from the first number and write these numbers in the boxes. One example is done for you.

45	43	42
----	----	----

32	31	30
----	----	----

23	22	21
----	----	----

62	61	60
----	----	----

55	54	53
----	----	----

37	36	35
----	----	----

78	77	76
----	----	----

90	89	88
----	----	----

67	66	65
----	----	----

71	70	69
----	----	----

46	45	44
----	----	----

94	93	92
----	----	----

29	28	27
----	----	----

38	37	36
----	----	----

## Identify Even Numbers

Lower Primary Beginner Maths

Colour the even numbers.

8

12

13

21

2

7

17

23

16

4

9

22

18

10

3

6





# Identify Even Number - Solutions

Lower Primary Beginner Maths

Colour the even numbers.

