

LOWER PRIMARY

Beginner Maths

E-Booklet Part 2



AM or PM

Does this happen in the A.M or P.M? Circle the correct answer.

Sunset




A.M P.M

Breakfast



A.M P.M

Dinner



A.M P.M

Morning Walk



A.M P.M

Going to School



A.M P.M

Bedtime



A.M P.M

AM or PM - Solutions

Does this happen in the A.M or P.M? Circle the correct answer.

Sunset



A.M P.M




Breakfast



A.M P.M



Dinner



A.M P.M



Morning Walk



A.M P.M



Going to School



A.M P.M



Bedtime



A.M P.M



Identify Odd Numbers

Lower Primary Beginner Maths

Colour the odd numbers.

7

14

13

21

4

9

17

22

21

11

6

19

5

8

3

27

Identify Odd Numbers - Solutions

Lower Primary Beginner Maths

Colour the odd numbers.

7

14

13

21

4

9

17

22

21

11

6

19

5

8

3

27



Identify the Numbers

Lower Primary Beginner Maths

Circle the numbers that match the words.

Fourteen

13

14

15

16

Twenty-one

21

14

19

17

thirty - five

14

35

56

4

seventeen

25

11

16

17

twelve

12

34

9

22

fourteen

16

14

20

4





Identify the Numbers - Solutions

Lower Primary Beginner Maths

Circle the numbers that match the words.

Fourteen	13	14	15	16
----------	----	----	----	----


Twenty-one	21	14	19	17
------------	----	----	----	----

thirty - five	14	35	56	4
---------------	----	----	----	---

seventeen	25	11	16	17
-----------	----	----	----	----

twelve	12	34	9	22
--------	----	----	---	----

fourteen	16	14	20	4
----------	----	----	----	---



Numbers in Words

Lower Primary Beginner Maths

Write the numbers in words.

45

16

28

32

Numbers in Words - Solutions

Lower Primary Beginner Maths

Write the numbers in words.

45

forty - five

16

sixteen

28

twenty - eight

32

thirty - two

Well done!

