

LOWER PRIMARY

Advance Maths

E-Booklet Part 1





Comparing numbers up to 100

Compare the numbers. Add: > or < or =

36 81

89 65

55 43

83 45

98 46

75 82

44 44

36 45

21 12

46 46

61 82

70 100

65 74

90 62

59 33

35 75

72 90

16 56



Comparing numbers up to 100 - Solutions

Compare the numbers. Add: > or < or =

$36 < 81$

$89 > 65$

$55 > 43$

$83 > 45$

$98 > 46$

$75 < 82$

$44 = 44$

$36 < 45$

$21 > 12$

$46 = 46$

$61 < 82$

$70 < 100$

$65 < 74$

$90 > 62$

$59 > 33$

$35 < 75$

$72 < 90$

$16 < 56$



Writing Numbers up to 1000

Write the numbers in words - Up to 1000

NUMBER	WRITTEN IN WORDS
872	
335	
296	
945	
492	
167	
502	
759	
613	
837	
189	
989	
478	
625	
712	
877	
360	
1000	



Writing Numbers up to 1000 - Solutions

Write the numbers in words - Up to 1000

NUMBER	WRITTEN IN WORDS
872	eight hundred and seventy-two
335	three hundred and thirty-five
296	two hundred and ninety -six
945	nine hundred and forty-five
492	four hundred and ninety-two
167	one hundred sixty-seven
502	five hundred and two
759	seven hundred and fifty-nine
613	six hundred and thirteen
837	eight hundred and thirty-seven
189	one hundred and eighty-nine
989	nine hundred and eighty-nine
478	four hundred and seventy-eight
625	six hundred and twenty-five
712	seven hundred and twelve
877	eight hundred and seventy-seven
360	three hundred and sixty
1000	one thousand



Writing Numbers up to 10,000

Write the numbers in words - Up to 10,000

9,075

4,896

3,067

2,745

8,278

10,000



Writing Numbers up to 10,000 - Solutions

Write the numbers in words - Up to 10,000

9,075

nine thousand seventy-five

4,896

four thousand eight hundred ninety-six

3,067

three thousand sixty-seven

2,745

two thousand seven hundred forty-five

8,278

eight thousand two hundred seventy-eight

10,000


ten thousand




Number Sentences which are True or False

Which addition or subtraction sentence is true? Put a tick if correct and cross if wrong.


$13 - 2 = 11$




$7 - 9 = 2$




$10 + 6 = 16$




$40 - 2 = 44$




$34 - 6 = 28$




$52 + 8 = 60$




$20 - 2 = 22$




$53 - 7 = 28$




$30 + 8 = 38$



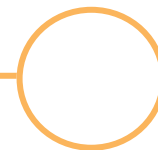
$45 + 2 = 47$




$100 - 6 = 94$




$38 + 9 = 47$




$72 + 3 = 75$



$88 - 7 = 82$




$45 + 8 = 50$




$17 + 3 = 21$




$63 + 3 = 66$




$38 - 4 = 34$




$23 + 9 = 32$



$100 - 30 = 40$



$67 + 5 = 72$





Number Sentences which are True or False - Solutions

Which addition or subtraction sentence is true? Put a tick if correct and cross if wrong.

$13 - 2 = 11$



$7 - 9 = 2$



$10 + 6 = 16$



$40 - 2 = 44$



$34 - 6 = 28$



$52 + 8 = 60$



$20 - 2 = 22$



$53 - 7 = 28$



$30 + 8 = 38$



$45 + 2 = 47$



$100 - 6 = 94$



$38 + 9 = 47$



$72 + 3 = 75$



$88 - 7 = 82$



$45 + 8 = 50$



$17 + 3 = 21$



$63 + 3 = 66$



$38 - 4 = 34$



$23 + 9 = 32$



$100 - 30 = 40$



$67 + 5 = 72$

