










Name: _____

Date: _____

HOW MANY FISH?

Count and write the number of fish you see,










 <input data-bbox="235 808 316 903" type="text"/>	 <input data-bbox="625 808 706 903" type="text"/>	 <input data-bbox="1023 808 1104 903" type="text"/>
 <input data-bbox="235 1323 316 1417" type="text"/>	 <input data-bbox="625 1323 706 1417" type="text"/>	 <input data-bbox="1023 1323 1104 1417" type="text"/>
 <input data-bbox="235 1837 316 1932" type="text"/>	 <input data-bbox="625 1837 706 1932" type="text"/>	 <input data-bbox="1023 1837 1104 1932" type="text"/>

Name: _____

Date: _____

HOW MANY FISH?

Count and write the number of fish you see,

 <input data-bbox="235 808 316 903" type="text"/>	 <input data-bbox="625 808 706 903" type="text"/>	 <input data-bbox="1023 808 1104 903" type="text"/>
 <input data-bbox="235 1323 316 1417" type="text"/>	 <input data-bbox="625 1323 706 1417" type="text"/>	 <input data-bbox="1023 1323 1104 1417" type="text"/>
 <input data-bbox="235 1837 316 1932" type="text"/>	 <input data-bbox="625 1837 706 1932" type="text"/>	 <input data-bbox="1023 1837 1104 1932" type="text"/>