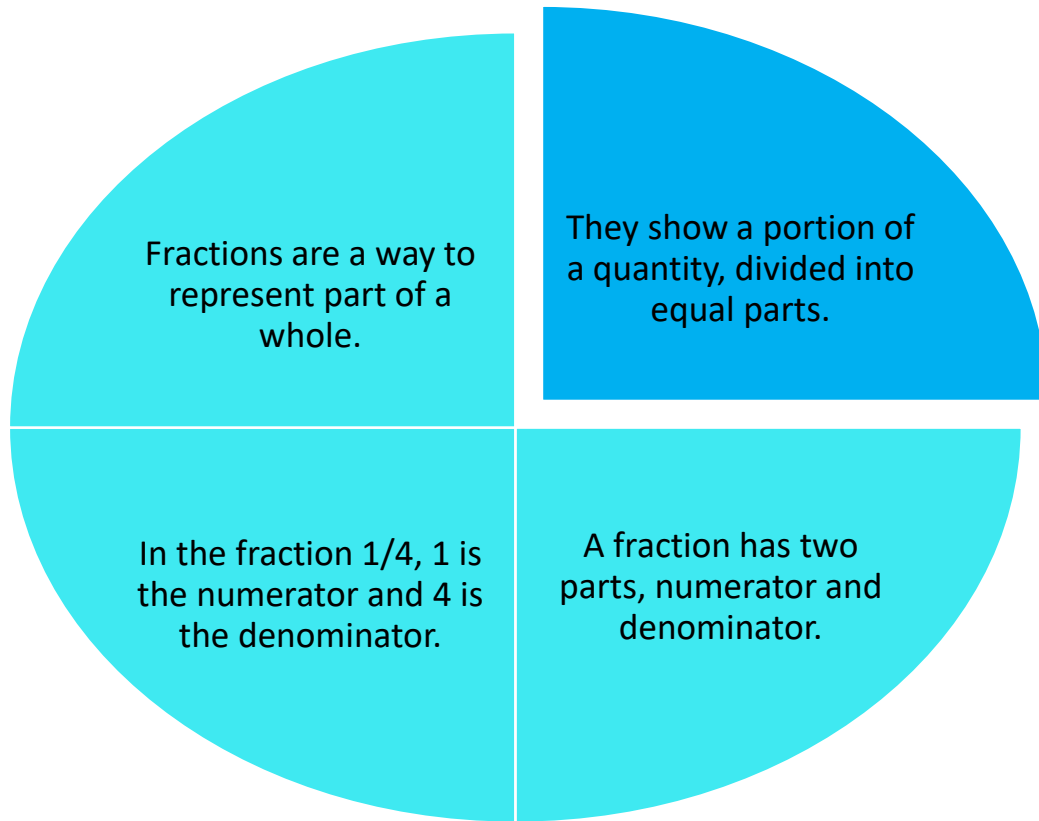


## What are Fractions?



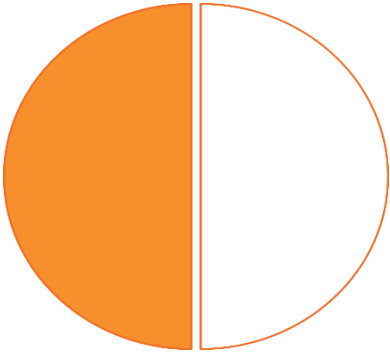
## How can we use Fractions in the real world?

Fractions are all around us! Here are some cool ways we use fractions in the real world:


**Cooking:** When you're baking cookies, a recipe might say  $\frac{1}{2}$  cup of sugar. That means you need half of a cup!

**Pizza:** Imagine you're sharing a pizza with friends. If you eat  $\frac{1}{4}$  of the pizza, that means you've eaten one quarter of the whole pizza!

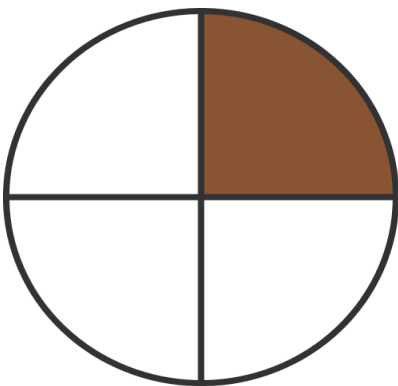
Draw lines to match the fractions.



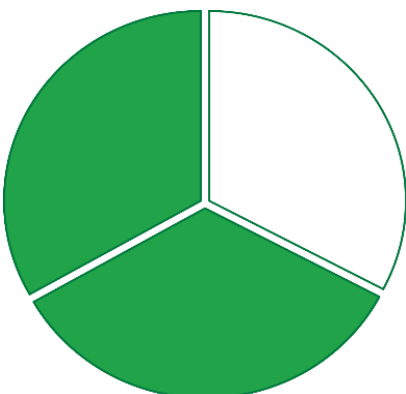
$$\frac{1}{4}$$



$$\frac{1}{2}$$

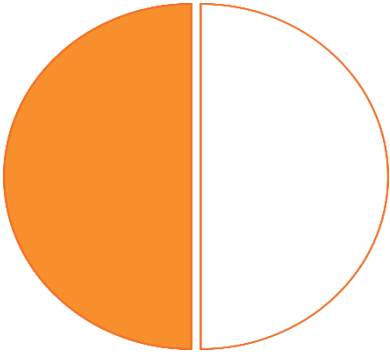


$$\frac{1}{4}$$




$$\frac{1}{3}$$

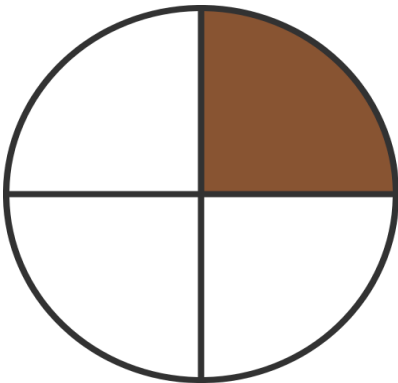
Draw lines to match the fractions.



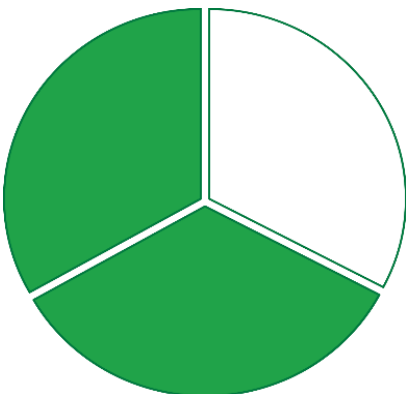
One  
half



One  
third

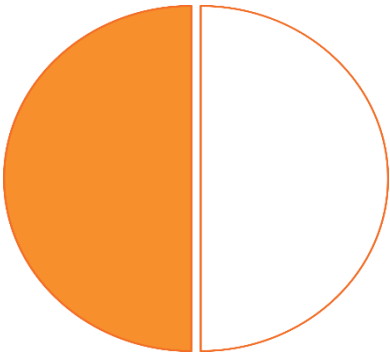


One  
fourth




One  
fourth

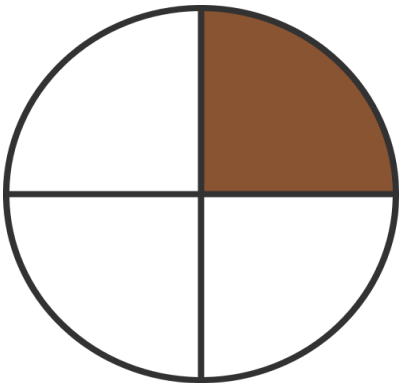
Draw lines to match the fractions.



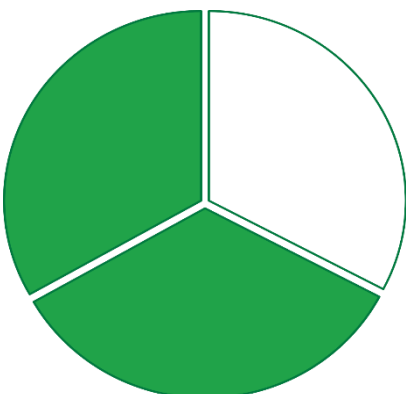
$$\frac{1}{4}$$



$$\frac{1}{2}$$



$$\frac{1}{4}$$



$$\frac{1}{3}$$

1. What is the fraction for 3 out of 4 parts? \_\_\_\_\_
2. Write the fraction for 2 out of 5 parts? \_\_\_\_\_
3. Identify the fraction:  $\frac{1}{2}$  \_\_\_\_\_ (write the words)
4. What is the fraction for 2 out of 3 parts? \_\_\_\_\_
5. Write the fraction for 4 out of 6 parts? \_\_\_\_\_
6. Identify the fraction:  $\frac{3}{4}$  \_\_\_\_\_ (write the words)
7. What is the fraction for 1 out of 2 parts? \_\_\_\_\_
8. Write the fraction for 5 out of 8 parts? \_\_\_\_\_
9. Identify the fraction:  $\frac{2}{3}$  \_\_\_\_\_ (write the words)
10. What is the fraction for 3 out of 5 parts? \_\_\_\_\_

1. Draw a picture to represent the fractions given -

$$\frac{3}{4}$$

$$\frac{2}{6}$$

$$\frac{5}{8}$$

$$\frac{1}{8}$$

$$\frac{2}{10}$$

$$\frac{5}{9}$$

1. Which fraction is larger? Circle around the right option.

$$\frac{1}{4}$$

OR

$$\frac{1}{6}$$

$$\frac{1}{10}$$

OR

$$\frac{2}{8}$$

$$\frac{5}{9}$$

OR

$$\frac{3}{4}$$



2. Which fraction is smaller? Circle around the right option.

$$\frac{1}{2}$$

OR

$$\frac{1}{6}$$

$$\frac{2}{10}$$

OR

$$\frac{6}{9}$$

$$\frac{5}{9}$$

OR

$$\frac{5}{10}$$

3. Which fraction is equal? Put a tick on the correct box.

$$\frac{1}{4}$$

and

$$\frac{1}{6}$$

$$\frac{2}{10}$$

and

$$\frac{2}{10}$$

$$\frac{5}{9}$$

and

$$\frac{5}{10}$$

*Happy  
Learning! ☺*

[www.learn-x.org](http://www.learn-x.org)