


FRACTION WORKSHEET



Fractions Questions for Classes 3 and 4

Fill in the blank:


Half of 10 is _____.

Multiple Choice:

Which of the following is a fraction?

- a) 3
- b) $\frac{1}{2}$
- c) 7
- d) 12

FRACTION WORKSHEET



True or False:

$\frac{2}{4}$ is the same as $\frac{1}{2}$.

What is the numerator in this fraction?

$\frac{3}{5}$

Answer: _____


Shade the correct number of parts:

A circle is divided into 4 equal parts.

Shade 3 out of 4 parts.

(Provide a diagram if used in a worksheet)

FRACTION WORKSHEET



Choose the correct answer:

Which is greater?

- a) $\frac{1}{2}$
- b) $\frac{1}{4}$
- c) $\frac{1}{8}$
- d) $\frac{1}{10}$

Write in words:

What is $\frac{2}{3}$ in words?

Answer: _____

Solve:

- If you eat 2 out of 8 slices of pizza, what fraction of the pizza is left?
- Answer: _____