



Nan Hua Primary School
Primary 5 Mathematics
Term 3 Weighted Assessment 2024
Paper 1

Marks	
Section A:	/6
Section B:	/12
Total:	18

Name: _____ ()

Class: Primary 5M_____

Date: _____

Duration: 25 min

Parent's Signature

INSTRUCTIONS TO CANDIDATES

1. Write your name and index number in the space provided.
2. Do not turn over the page until you are told to do so.
3. Follow all instructions carefully.
4. Answer all questions.
5. Use dark blue or black ball point pen to write your answers in the space provided for each question.
6. Do not use correction tape/ fluid/ highlighter.
7. The use of calculators is NOT allowed.

This booklet consists of 6 printed pages.

1. The following table shows the number of students who appeared for the examination in different subjects.

Subject	Number of Students
Mathematics	120
Science	150
English	180
Hindi	100
Social Studies	140

2. The following table shows the marks obtained by the students in different subjects.

3. The following table shows the marks obtained by the students in different subjects.

4.

5. The following table shows the marks obtained by the students in different subjects.

6. The following table shows the marks obtained by the students in different subjects.

7. The following table shows the marks obtained by the students in different subjects.

Section A

Questions 1 to 4 carry 1 mark each. Question 5 carries 2 marks.
For each question, four options are given. One of them is the correct answer.
Make your choice (1, 2, 3 or 4) and write your answer in the brackets.

(6 marks)

1 What is the product of 0.007 and 800?

(1) 0.56

(2) 5.6

(3) 56

(4) 560

()

2 Which of the following is the same as 5002 cm?

(1) 5.2 m

(2) 5.02 m

(3) 50.2 m

(4) 50.02 m

()

3 The usual price for a watch was \$140. David bought it at a discount of 20%. How much was the discount?

(1) \$20

(2) \$28

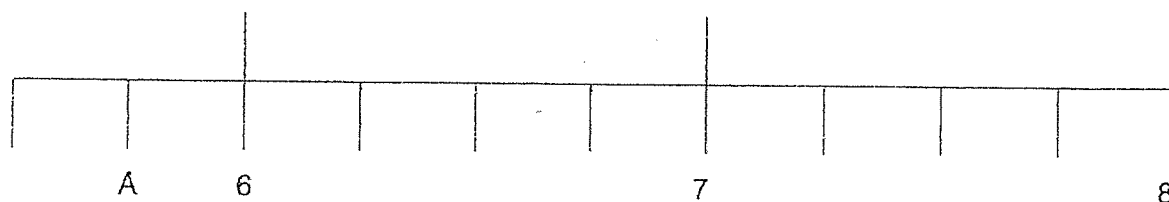
(3) \$112

(4) \$120

()

3

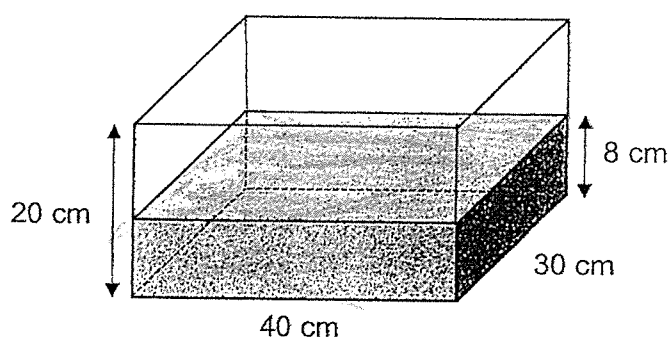
- 4 In the number line below, what is the value of A?



- (1) 5
 (2) 5.25
 (3) 5.75
 (4) 5.9

()

- 5 A rectangular tank measures 40 cm by 30 cm by 20 cm. It is filled with water to a height of 8 cm. How much water is needed to fill the tank completely?



- (1) 9600 cm³
 (2) 14 400 cm³
 (3) 24 000 cm³
 (4) 192 000 cm³

()

Section B

Questions 6 to 7 carry 1 mark each. Questions 8 to 12 carry 2 marks each.
Write your answers in the spaces provided. For questions which require units, give your answers in the units stated. (12 marks)

- 6 What is the value of 3 tens, 12 tenths and 8 hundredths?

Ans : _____

- 7 In a class, $\frac{2}{5}$ of the students are boys. What percentage of the students are girls?

Ans: _____ %

- 8 The price for 30 mangoes is \$48. What is the price of 2 such mangoes?

Ans: \$ _____

Please do not write in the margin

- 9 The price of a camera is \$1200 excluding 9% GST. How much is the price of the camera including GST?

Ans : \$ _____

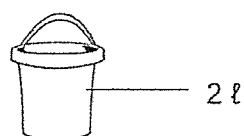
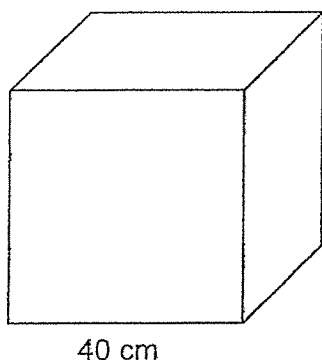
- 10 Mrs Raju has \$8000 in her savings account. She earns 2% interest each year. How much money will Mrs Raju have in her account at the end of 1 year?

Ans: \$ _____

Please do not write in the margin



- 11 Pails of water are poured into a cubical container of edge 40 cm. Each pail has a capacity of 2 l. How many full pails of water are needed to fill the container completely?



Ans: _____

- 12 A dress was sold at a discount at a store. How much was the discounted price of the dress?



Ans: \$ _____

Please do not write in the margin



Nan Hua Primary School
Primary 5 Mathematics
Term 3 Weighted Assessment 2024
Paper 2

Marks	
Total:	12

Name: _____ ()

Class: Primary 5M____

Date: _____

Duration: 20 min

INSTRUCTIONS TO CANDIDATES

1. Write your name and index number in the space provided.
2. Do not turn over the page until you are told to do so.
3. Follow all instructions carefully.
4. Answer all questions.
5. Use dark blue or black ball point pen to write your answers in the space provided for each question.
6. Do not use correction tape/ fluid/ highlighter.
7. The use of calculators is allowed.

This booklet consists of 5 printed pages and 1 blank page.

For questions 1 to 4, show your working clearly and write your answers in the spaces provided. The number of marks available is shown in brackets [] at the end of each question or part-question. (12 marks)

- 1 Mrs Tay bought 80 apples and 120 oranges. 10% of the apples and 5% of the oranges were rotten. What percentage of the fruits were not rotten?

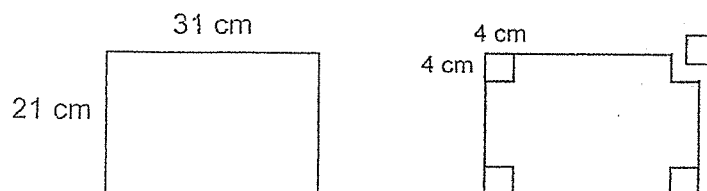
Please do not write in the margin.

Ans: _____ [3]




3

- 2 Caili had a rectangular piece of paper measuring 31 cm by 21 cm. She cut out a square of 4 cm at each corner.



She then folded up the sides and taped the corners to form an open box as shown.



What was the volume of the open box?

Ans: _____ [3]

Please do not write in the margin



- 3 A piggy bank contains 45 coins with a total value of \$17.10. There are only 20-cent coins and 50-cent coins in the piggy bank. How many 50-cent coins are there?

Please do not write in the margin

Ans: _____ [3]



- 4 Tom was given \$4 pocket money every day of the week. He spent \$3.20 per day from Monday to Friday and saved the rest. He saved all his pocket money on Saturday and Sunday. Starting on a Monday, how many days did it take for him to save \$52?

Please do not write in the margin

Ans: _____ [3]



YEAR : 2024
 LEVEL : PRIMARY 5
 SCHOOL : NAN HUA PRIMARY SCHOOL
 SUBJECT : MATHEMATICS
 TERM : TERM 3 WEIGHTED ASSESSMENT



PAPER 1

Q1	2	Q2	4	Q3	2	Q4	3	Q5	2
----	---	----	---	----	---	----	---	----	---

Q6	$30 + 1.2 = 31.2$ $31.2 + 0.08 = 31.28$	Q7	$\frac{10}{10} - \frac{4}{10} = \frac{6}{10}$ 60%
Q8	$30 \div 2 = 15$ $48 \div 15 = \$3.20$	Q9	$\frac{109}{100} \times \frac{1200}{1} = 1308$ $1308 - 1200 = 108$ $108 \div 9 = 12$ $1200 \div 12 = 100$ \$1308
Q10	$\frac{102}{100} \times 8000 = \8160	Q11	$40 \times 40 \times 40 = 1600 \times 40$ $= 64000 \div 2000 = 32$
Q12	$100 - 40 = 60$ $\frac{60}{100} \times \frac{190}{1} = \114		

PAPER 2

Q1	A: $100 - 10 = 90$ $\frac{90}{100} \times \frac{80}{1} = 72$ Q: $100 - 5 = 95$ $\frac{95}{100} \times \frac{120}{1} = 114$ $114 + 72 = 186$ $80 + 120 = 200$ $\frac{186}{200} = \frac{93}{100}$ = 93%	Q2	$4 + 4 = 8$ $21 - 8 = 13$ $31 - 8 = 23$ $23 \times 13 \times 4 = 1196\text{cm}^3$
Q3	$20 \times 45 = 900$ $1710 - 900 = 810$ $50 - 20 = 30$ $810 \div 30 = 27$	Q4	$3.2 \times 5 = 16$ $4 \times 7 = 28$ $28 - 16 = 12$ WD: $4 - 3.2 = 0.8$ WE: 4 $0.8 \times 5 = 4$ $52 - 12 = 40$ $40 - 12 = 28$ $28 - 12 = 16$ $16 - 12 = 4$ $7 \times 4 = 28$ $28 + 5 = 33$

1
END

