



**RAFFLES GIRLS' PRIMARY SCHOOL
WEIGHTED ASSESSMENT 1
MATHEMATICS
PRIMARY 4**

Name: _____ () Form Class: P4 _____

Date: 17 April 2024

Duration: 50 min

Your Total Score (Out of 30 marks)	
Parent's Signature	

INSTRUCTIONS TO CANDIDATES

1. Do not turn over this page until you are told to do so.
2. Follow all instructions carefully.
3. Answer **ALL** questions and show all working clearly.

SECTION A (4 marks)

Questions 1 to 4 carry 1 mark each. For each question, four options are given. One of them is the correct answer. Make your choice (1, 2, 3 or 4) and write your answer in the brackets.

1. $50\,000 + 900 + 8 = \underline{\hspace{2cm}}$

(1) 50 098

(2) 50 908

(3) 59 008

(4) 59 080

()

2. Arrange the following numbers from the greatest to the smallest.

9605 9065 9506

(greatest)

(smallest)

(1) 9065 9605 9506

(2) 9065 9506 9605

(3) 9605 9065 9506

(4) 9605 9506 9065

()

3. Complete the number pattern.

5934, 5634, 5624, 5324, _____, 5014, 5004

(1) 5024

(2) 5314

(3) 5334

(4) 5624

()

4. 3 and 4 are factors of _____.

(1) 15

(2) 18

(3) 20

(4) 24

()

SECTION B (12 marks)

Questions 5 to 10 carry 2 marks each. Write your answers in the spaces provided.

5. a) Write seventy-eight thousand and twenty in numerals.

b) Round 39 500 to the nearest thousand.

Answer: a) _____ [1]

b) _____ [1]




6. Find the product of 8540 and 7.

Answer: _____ [2]

7. Ben packed 853 books in boxes of 9. How many books were left unpacked?

Answer: _____ [2]

8. The table shows the number of students in two classes. Part of the table is covered by ink blots.

	4A	4B	Total
Number of boys	22		
Number of girls	19	21	
Total	41	34	75

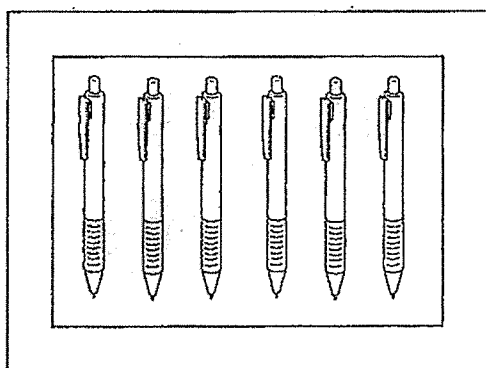
How many more girls than boys are there altogether?

Answer: _____ [2]

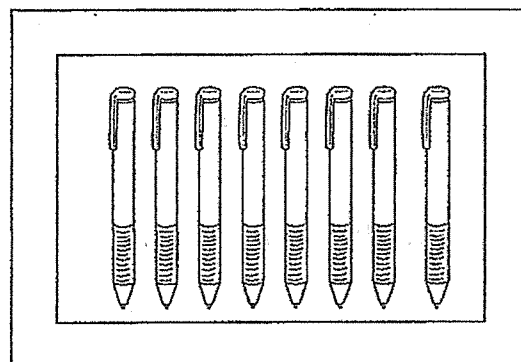
9. Andy had \$450 more than Betty. Betty gave \$35 to Andy. How much more did Andy have than Betty in the end?

Answer: \$ _____ [2]

10. At a bookshop, pens are sold in boxes of 6 and pencils are sold in boxes of 8.



Box of 6 pens



Box of 8 pencils

Miss Nurul bought an equal number of pens and pencils for her class.
Find the least total number of pens and pencils Miss Nurul bought.

Answer: _____ [2]

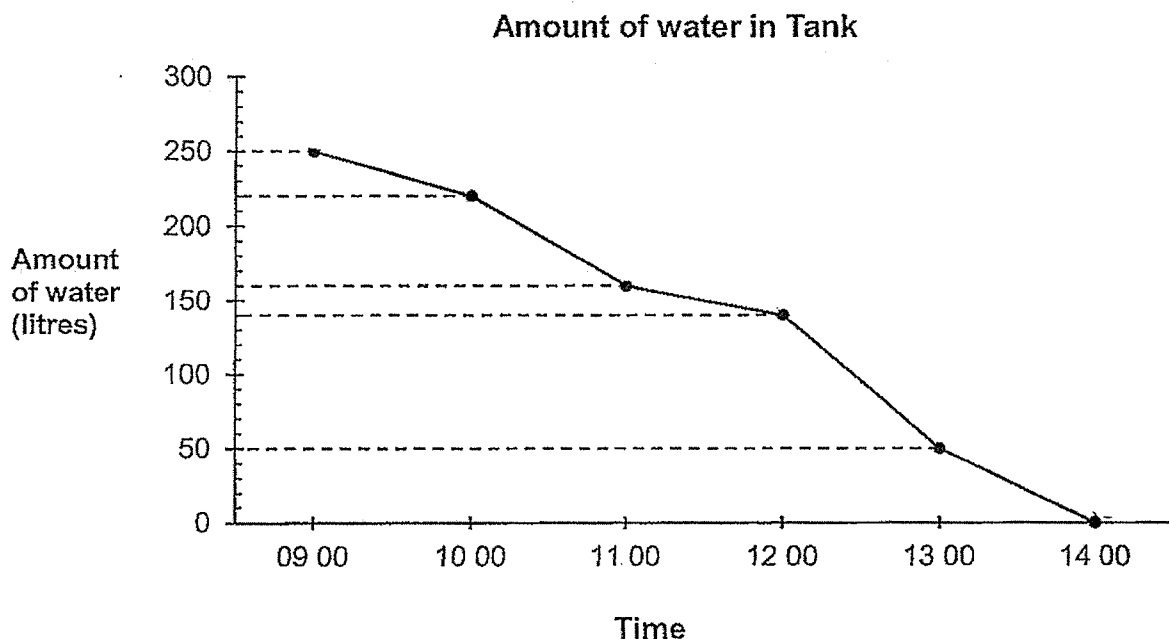
SECTION C (14 marks)

For questions 11 to 14, show your working clearly and write your answers with suitable units in the spaces provided. The number of marks available is shown in brackets [] at the end of each question or part-question.

11. A fruit seller had 4 times as many durians as watermelons. After he sold 114 durians, he had as many watermelons as durians left. How many fruits did the fruit seller have left in the end?

Answer: _____ [3]

12. A tank was filled with water. Water flowed out of the tank from 09 00 to 14 00.



- a) How many litres of water was in the tank at first?

Answer: _____ [1]

- b) How many litres of water was in the tank at 10 00?

Answer: _____ [1]

- c) How many litres of water flowed out between 12 00 and 13 00?

Answer: _____ [1]

- d) The least amount of water flowed out during which 1-hour period?

Answer: From _____ to _____ [1]

13. A school bag costs \$60 more than a water bottle.
3 similar school bags and 2 similar water bottles cost \$280
How much does each water bottle cost?

Answer: _____ [4]

14. Tammy has 35 \$2 and \$5 notes. The total value of the notes is \$118.
How many \$5 notes does she have?

Answer: _____ [3]

-End of Paper-
Please check your work carefully.

YEAR : 2024
 LEVEL : PRIMARY 4
 SCHOOL : RAFFLES GIRLS' PRIMARY SCHOOL
 SUBJECT : MATHEMATICS
 TERM : WA1

SECTION A

Q1	2	Q2.	4	Q3	2	Q4	4
----	---	-----	---	----	---	----	---

SECTION B

Q5	a) 78020 b) 40000	Q6	59780	Q7	7
Q8	34-21=13 19+21=40 22+13=35 40-35=5	Q9	35x2=70 450+70=520	Q10	24+24=48

SECTION C

Q11	114 ÷ 3 = 38 38x2=76	Q12	a) 250 litre b) 220 litre c) 90 litre d) 1100 to 1200
Q13	60x3=180 280-180=100 100 ÷ 5 = \$20	Q14	16

END