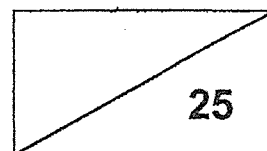


**Catholic High School (Primary)**  
**Primary 3 Mathematics**  
**Weighted Assessment 2**

NAME : \_\_\_\_\_ (     )     DATE : \_\_\_\_\_

CLASS : \_\_\_\_\_

PARENT'S SIGNATURE : \_\_\_\_\_



**Section A**

Questions 1 to 4 carry 2 mark each. For each question, four options are given. One of them is the correct answer. Make your choice (1, 2, 3 or 4) and write your choice in the bracket provided. All diagrams are not drawn to scale. (8 marks)

1. Find the product of 4 and 7.

(1) 28

(2) 21

(3) 3

(4) 11

(     )

2. Which of the following has the same value as 5 groups of 9?

(1)  $9 + 9 + 9 + 9 + 9 + 9 + 9 + 9 + 9$

(2)  $5 + 5 + 5 + 5 + 5 + 5 + 5 + 5 + 5$

(3)  $9 + 9 + 9 + 9 + 9$

(4)  $5 + 5 + 5 + 5 + 5$

(     )

3. Find the quotient when 726 is divided by 7.

- (1) 5
- (2) 13
- (3) 108
- (4) 103

( )

---

4. 150 masks were packed equally into 6 boxes. How many masks were there in each box?

- (1) 24
- (2) 25
- (3) 156
- (4) 900

( )

**Section B**Do not write  
in this space

Question 5 carries 1 mark. Questions 6 to 10 carry 2 marks each. Show your working clearly and write your answers in the spaces provided. For questions which require units, give your answers in the units stated. All diagrams are not drawn to scale. (11 marks)

5.  $27 \div \boxed{?} = 3$

Ans: \_\_\_\_\_

6.  $2 \times \boxed{?} = 56 \div 7$

Ans: \_\_\_\_\_

7. Multiply 187 by 5.

Do not write  
in this space

Ans: \_\_\_\_\_

8. Find the remainder when 831 is divided by 8.

Ans: \_\_\_\_\_

9. Max wants to build 4 figurines for a competition. Each figurine requires 102 pieces of blocks. What is the total number of pieces of blocks he needs altogether?

Do not write  
in this space

Ans: \_\_\_\_\_

10. John and Mark collected 372 stamps. Mark collected twice as many stamps as John. How many stamps did John collect?

Ans: \_\_\_\_\_

**SECTION C**

Do not write  
in this space

For Questions 11 to 12, show your working clearly and write your answers in the spaces provided. The number of marks available is shown in brackets [ ] at the end of each question or part-question. All diagrams are not drawn to scale. (6 marks)

11. Grace bought 6 cakes for a birthday party.  
Each cake cost \$54 and she paid \$360.  
How much change did she receive?

Ans: \_\_\_\_\_ [3]



12. 8 identical magazines cost \$104.  
A book costs 3 times as much as a magazine.  
How much does a book cost?

Do not write  
in this space

Ans: \_\_\_\_\_ [3]



**END OF PAPER**



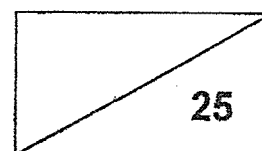


**Catholic High School (Primary)**  
**Primary 3 Mathematics**  
**Weighted Assessment 3**

NAME : \_\_\_\_\_ (     )     DATE : \_\_\_\_\_

CLASS : \_\_\_\_\_

PARENT'S SIGNATURE : \_\_\_\_\_



**Section A**

Questions 1 to 4 carry 2 mark each. For each question, four options are given. One of them is the correct answer. Make your choice (1, 2, 3 or 4) and write your choice in the bracket provided. All diagrams are not drawn to scale. (8 marks)

1. Which of the following figures shows that  $\frac{1}{3}$  of the figure is shaded?

(1)



(2)



(3)



(4)



(     )

2. What is 8 m 7 cm in centimetres?

- (1) 87 cm
- (2) 807 cm
- (3) 870 cm
- (4) 8007 cm

( )

---

3. Arrange the following fractions from the smallest to the greatest.

$$\frac{2}{3}, \frac{5}{9}, \frac{1}{8}$$

- (1)  $\frac{5}{9}, \frac{2}{3}, \frac{1}{8}$
- (2)  $\frac{5}{9}, \frac{1}{8}, \frac{2}{3}$
- (3)  $\frac{1}{8}, \frac{2}{3}, \frac{5}{9}$
- (4)  $\frac{1}{8}, \frac{5}{9}, \frac{2}{3}$

( )

---

4. A dress and a T-shirt cost \$41 altogether.  
The dress costs \$27.30. How much does the T-shirt cost?

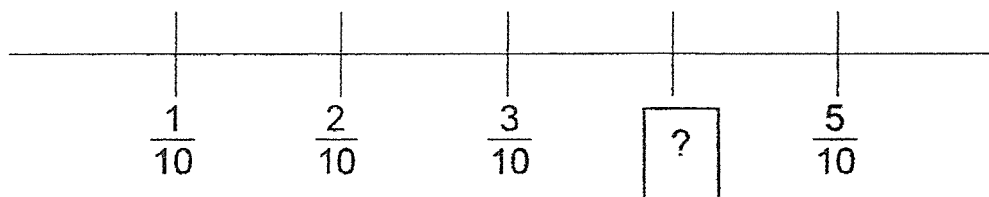
- (1) \$13.70
- (2) \$14.70
- (3) \$26.30
- (4) \$68.30

( )

**Section B**Do not write  
in this space

Question 5 carries 1 mark. Questions 6 to 10 carry 2 marks each. Show your working clearly and write your answers in the spaces provided. For questions which require units, give your answers in the units stated. All diagrams are not drawn to scale. (11 marks)

5. The number line below is marked at equal interval. Find the missing fraction in the box.



Ans: \_\_\_\_\_

6. 800 m + 1300 m = \_\_\_\_\_ km \_\_\_\_\_ m

Ans: \_\_\_\_\_ km \_\_\_\_\_ m

7.  $\frac{5}{12} - \frac{1}{4} = \boxed{?}$

Do not write  
in this space

Give your answer in its simplest form.

Ans: \_\_\_\_\_

8.  $\frac{1}{2} + \frac{1}{7} = \boxed{?}$

Give your answer in its simplest form.

Ans: \_\_\_\_\_

9. The following table shows a menu at a cafe.

Do not write  
in this space

Menu	
Burger	\$6.90
Cupcake	\$2.50
Pizza	\$7.80
Waffle	\$5.50

Andy bought a waffle and another item from the menu.  
He spent \$12.40 in all. What was the cost of the other item  
that he bought?

Ans: \$ \_\_\_\_\_

10.  $\frac{2}{3} = \frac{\boxed{?}}{18}$

Find the missing number in the box.

Ans: \_\_\_\_\_


**SECTION C**

Do not write  
in this space

For Questions 11 to 12, show your working clearly and write your answers in the spaces provided. The number of marks available is shown in brackets [ ] at the end of each question or part-question. All diagrams are not drawn to scale. (6 marks)

11. Cindy spent her money on a bag and a pair of shoes. The bag costs \$21.90. The pair of shoes costs \$18 more than the bag. How much did she spend altogether?


Ans: \_\_\_\_\_ [3]



12. Tom saved \$49.85. Sam saved \$12.50 more than Tom.  
Paul saved \$9.85 less than Sam. How much did Paul save?

Do not write  
in this space

Ans: \_\_\_\_\_ [3]



END OF PAPER





**EXAM PAPER**

**LEVEL : PRIMARY 3**  
**SCHOOL : CATHOLIC HIGH SCHOOL**  
**SUBJECT : MATHEMATICS**  
**TERM : WEIGHTED ASSESSMENT 2**

**SECTION A**

Q1	Q2	Q3	Q4
1	3	4	2

**SECTION B**

Q5. 9

Q6. 4

Q7. 935

Q8. 7

Q9. 408

Q10. 124

**SECTION C**

Q11.  $54 \times 6 = 324$

$360 - 324 = \underline{\$36}$

Q12.  $104 \div 8 = 13$

$13 \times 3 = \underline{\$39}$



EXAM PAPER

LEVEL : PRIMARY 3  
SCHOOL : CATHOLIC HIGH SCHOOL  
SUBJECT : MATHEMATICS  
TERM : WEIGHTED ASSESSMENT 3

SECTION A

Q1	Q2	Q3	Q4
3	2	4	1

SECTION B

Q5.  $\frac{4}{10}$

Q6. 2 km 100 m

Q7.  $\frac{1}{6}$

Q8.  $\frac{9}{14}$

Q9. \$6.90

Q10. 12.

SECTION C

Q11.  $\$21.90 + \$21.90 + \$18 = \underline{\$61.80}$

Q12.  $\$49.85 + \$12.50 = \$62.35$

$\$62.35 - \$9.85 = \underline{\$52.50}$

2  
END