


Name: _____ ()

Class : Primary 6 _____

CHIJ ST NICHOLAS GIRLS' SCHOOL



Primary 6

2023

Term 2 Weighted Assessment

SCIENCE

BOOKLET A

Total Time for Booklets A and B: 50 minutes

**15 questions
30 marks**

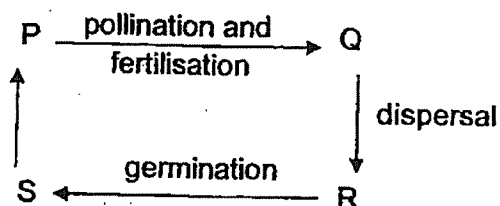
**Do not open this booklet until you are told to do so.
Follow all instructions carefully.**

This paper consists of 10 printed pages.

Section A (15 x 2 marks = 30 marks)

For each question from 1 to 15, four options are given. One of them is the correct answer. Make your choice (1, 2, 3 or 4). Shade the correct oval (1, 2, 3 or 4) on the Optical Answer Sheet provided.

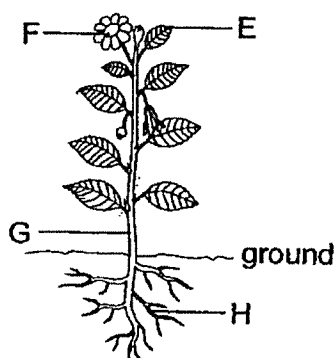
1. The diagram below shows the stages in the life cycle of a flowering plant.



Which of the following correctly represents the stages P, Q, R and S?

	P	Q	R	S
(1)	seed	young plant	adult plant with fruits	adult plant with flowers
(2)	seed	young plant	adult plant with flowers	adult plant with fruits
(3)	adult plant with fruits	adult plant with flowers	seed	young plant
(4)	adult plant with flowers	adult plant with fruits	seed	young plant

2. The diagram below shows a plant.




Which of the following statements about plant parts are true?

- A Part G holds the plant upright.
- B Part F makes food for the plant.
- C Part E allows for gaseous exchange.
- D Part H anchors the plant firmly to the ground.

- (1) A and D only
- (2) B and C only
- (3) A, C and D only
- (4) B, C and D only

3. Two persons were trapped in a cave with very poor ventilation. The diagram below shows the composition of air of four different gases in the cave when they had first entered it.



Which of the following shows the correct composition of the gases in the cave after a few hours?

(1)



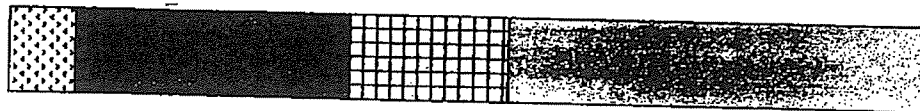
(2)



(3)



(4)

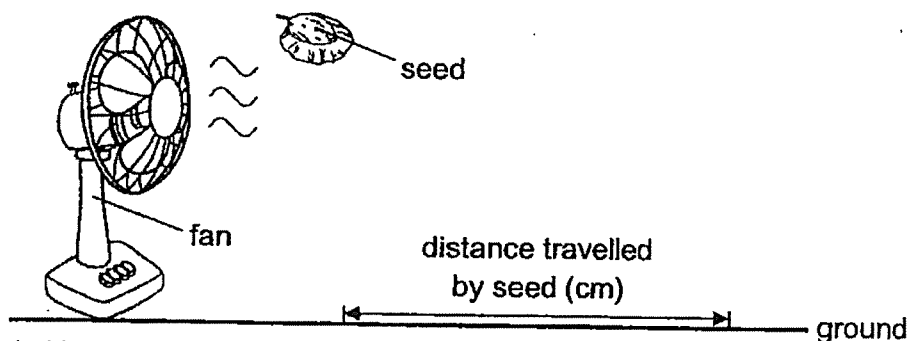


4. The table below shows some characteristics of insect-pollinated and wind-pollinated flowers.

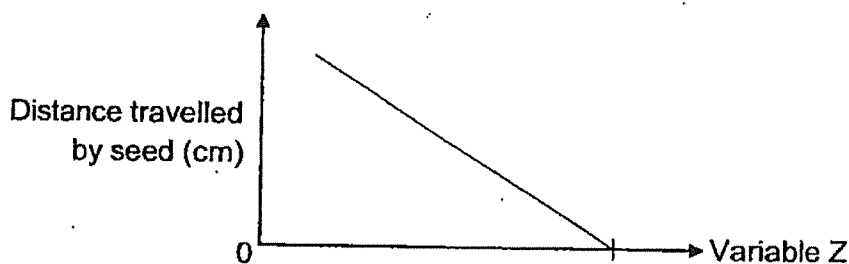
	Insect-pollinated flowers	Wind-pollinated flowers
A	produce nectar	do not produce nectar
B	produce lighter pollen grains	produce heavier pollen grains
C	have stigmas hanging out of the flowers	do not have stigmas hanging out of the flowers
D	have brightly-coloured petals	have dull-coloured petals

Based on the above table, which of the following are true about insect-pollinated and wind-pollinated flowers.

- (1) A and C only
 - (2) A and D only
 - (3) B and C only
 - (4) B and D only
5. Ali picked up some seeds from the Science garden. He conducted an experiment to find out the distance travelled by each seed when dropped from a fixed height from the ground.



He recorded his results in the graph below.



What is variable Z?

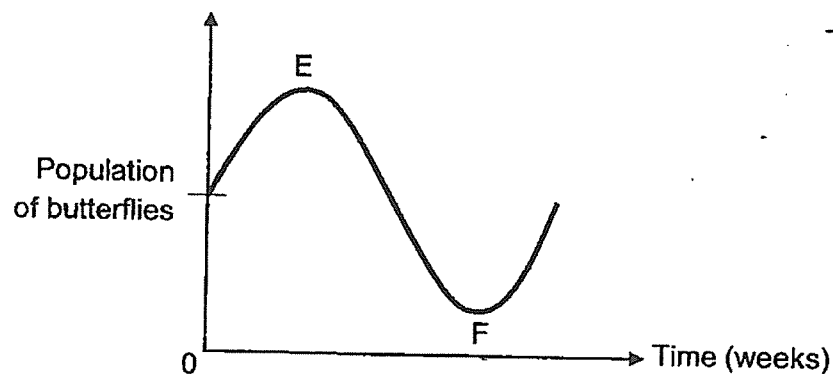
- (1) mass of the seed
- (2) speed of wind from the fan
- (3) size of the wing of the seed
- (4) height from which the seed was released

6. Hassan counted the number of organisms found in a park. He recorded his findings in the table below.

Plants	Animals
4 Rose Plants 3 Durian Trees 2 Bird's Nest Ferns	3 Caterpillars 4 Butterflies 2 Dragonfly Nymphs 3 Dragonflies 1 Frog

How many populations of organisms did he find at the park?

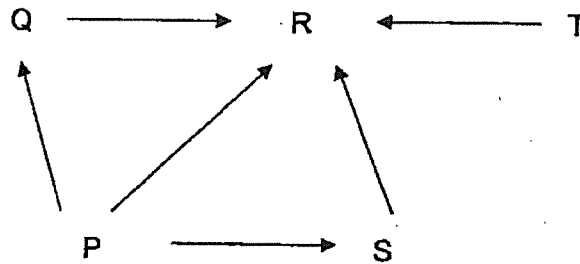
- (1) 2
(2) 3
(3) 5
(4) 6
7. The graph below shows the population of butterflies in a garden community over some weeks.



Which of the following statements explain the change in the population of butterflies shown along part EF of the graph?

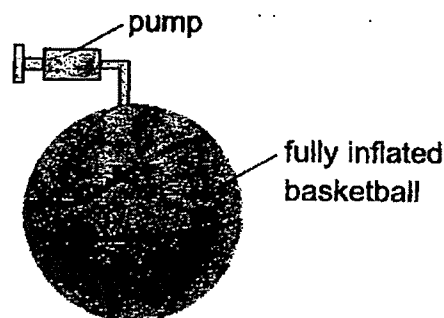
- A There was a bush fire.
B More ferns were planted in the community.
C More birds were introduced into the community.
D More land was used for planting more flowering plants.
- (1) A and B only
(2) A and C only
(3) B and C only
(4) B and D only

8. Study the food web below.



Which of the following statements describes organism R?

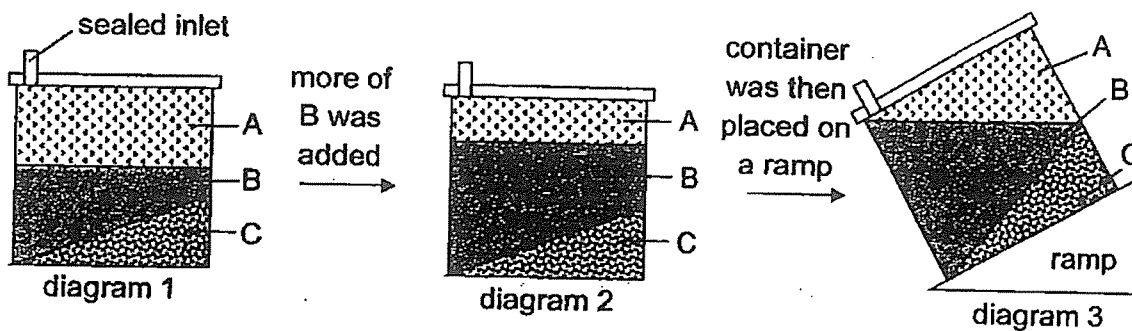
- (1) It is a food producer.
 - (2) It is a plant-and-animal eater.
 - (3) It is a decomposer that feeds on dead organisms.
 - (4) It competes with other organisms in the food web for food.
9. The diagram below shows a fully inflated basketball. A pump is then attached to the basketball.



Which of the following is correct about the mass and volume of the air in the basketball after it was pumped with more air?

	Mass of air in the basketball	Volume of air in the basketball
(1)	increases	remains the same
(2)	increases	increases
(3)	remains the same	increases
(4)	remains the same	remains the same

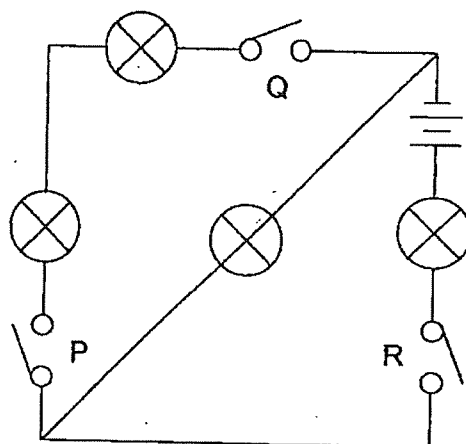
10. The diagram below shows a container filled with 3 different substances A, B and C. More of substance B was then added into the container. The container was then placed on a ramp as shown in diagram 3.



Based on the above observations, what are the likely states of matter for substances A, B and C?

	Substance A	Substance B	Substance C
(1)	solid	gas	liquid
(2)	liquid	gas	solid
(3)	gas	liquid	solid
(4)	gas	solid	liquid

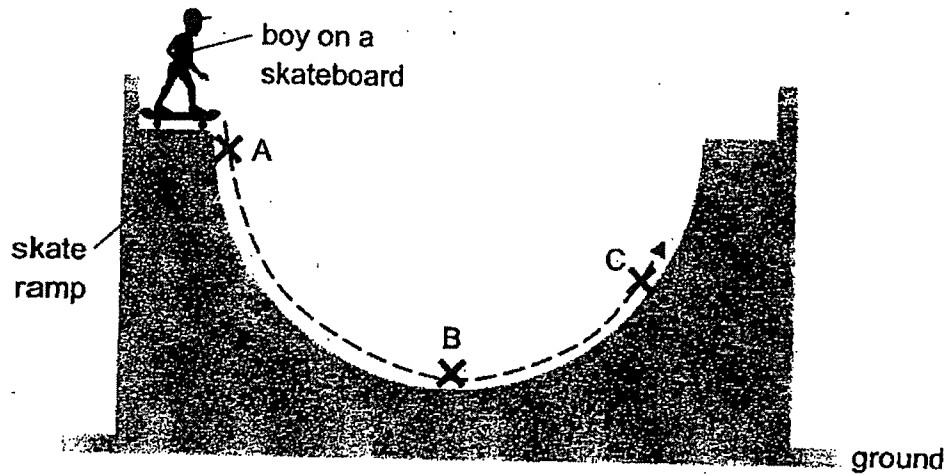
11. Study the circuit below.



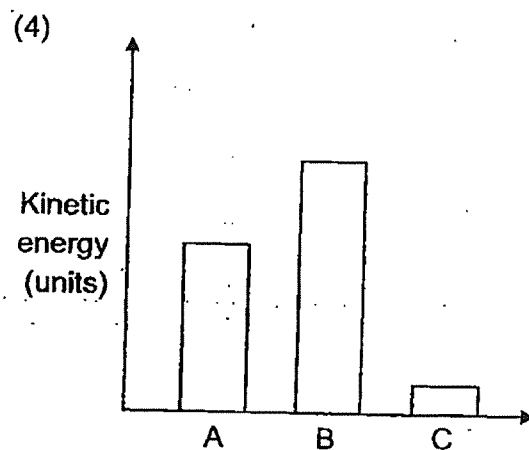
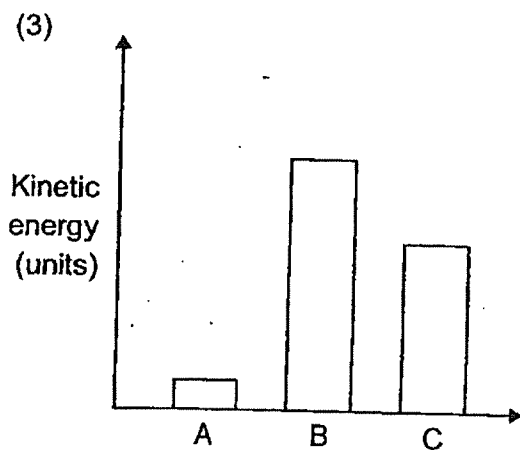
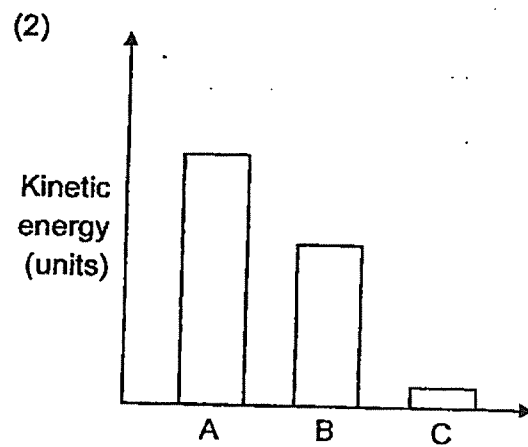
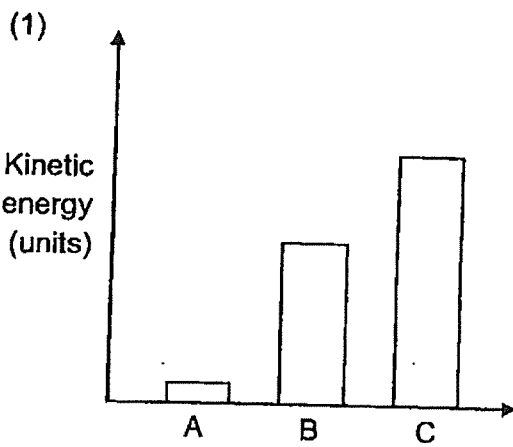
How many bulbs light up when only switches P and Q are closed?

- (1) 0
(2) 1
(3) 2
(4) 3

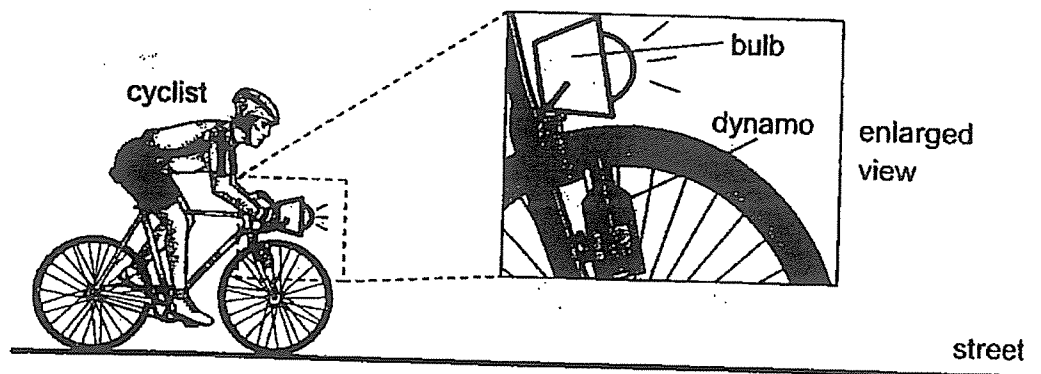
12. The diagram below shows a boy on a skateboard as he skates down a U-shaped ramp.



Which graph shows the change in the kinetic energy of the boy as he moves from A to B to C?



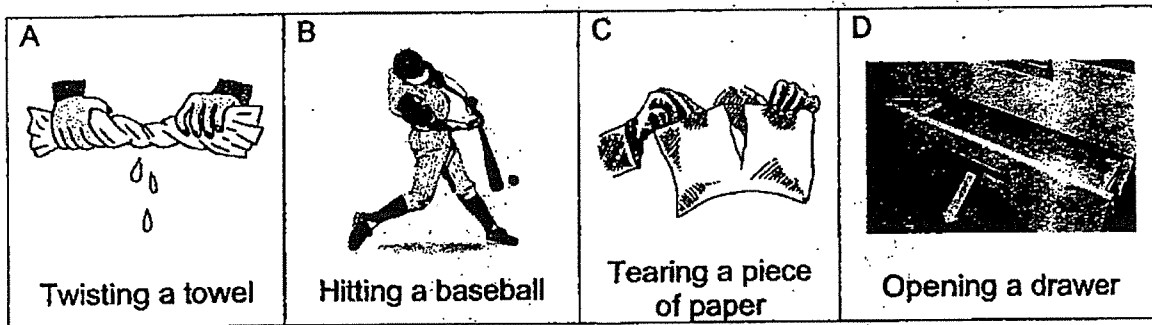
13. The diagram below shows a man cycling on a dark street. The front wheel of the bicycle was fitted with a dynamo. A dynamo converts the movement of the wheels into electrical energy to enable the bulb to light up.



Based on the observation, which of the following shows the correct energy conversion?

- (1) Chemical Potential Energy (Man) \rightarrow Kinetic Energy (Legs)
- (2) Chemical Potential Energy (Man) \rightarrow Electrical Energy (Bulb)
- (3) Chemical Potential Energy (Man) \rightarrow Kinetic Energy (Legs) \rightarrow Kinetic Energy (Dynamo) \rightarrow Electrical Energy (Bulb)
- (4) Chemical Potential Energy (Man) \rightarrow Kinetic Energy (Legs) \rightarrow Kinetic Energy (Dynamo) \rightarrow Sound Energy (Bulb)

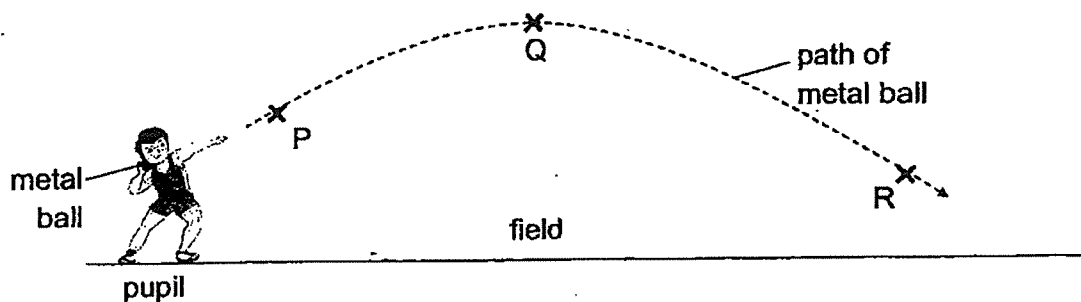
14. The diagram below shows different actions that require the use of forces.



Which of the following correctly groups the above actions?

	Push	Pull	Both push and pull
(1)	B and D	C	A
(2)	A and C	B	D
(3)	B	D	A and C
(4)	C	A	B and D

15. The diagram below shows a pupil throwing a metal ball in a shot put competition. The metal ball travelled through the air along the path shown below.



At which point(s) is/are gravitational force exerted on the metal ball?


- (1) Q only
- (2) P and Q only
- (3) Q and R only
- (4) P, Q and R

END OF BOOKLET A

Name : _____ ()

Class : Primary 6 _____

CHIJ ST NICHOLAS GIRLS' SCHOOL



Primary 6

2023

Term 2 Weighted Assessment

SCIENCE

BOOKLET B

Total Time for Booklets A and B: 50 minutes

5 questions
14 marks

Do not open this booklet until you are told to do so.
Follow all instructions carefully.
Answer all questions.

This booklet consists of 6 printed pages.

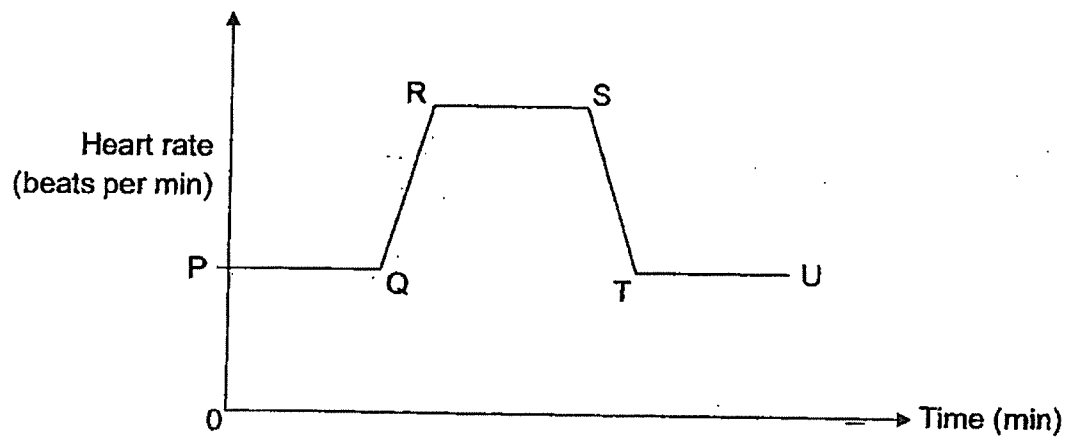
Booklet A	30
Booklet B	14
Total	44

Parent's Signature/Date

Section B (14 marks)

For questions 16 to 20, write your answers in this booklet. The number of marks available is shown in the brackets at the end of each question or part question.

16. Maya took part in a 100 m race during Sports Day. At the end of the race, she took a rest for 10 minutes. She recorded her heart rate before and after the race. The graph below shows the results.



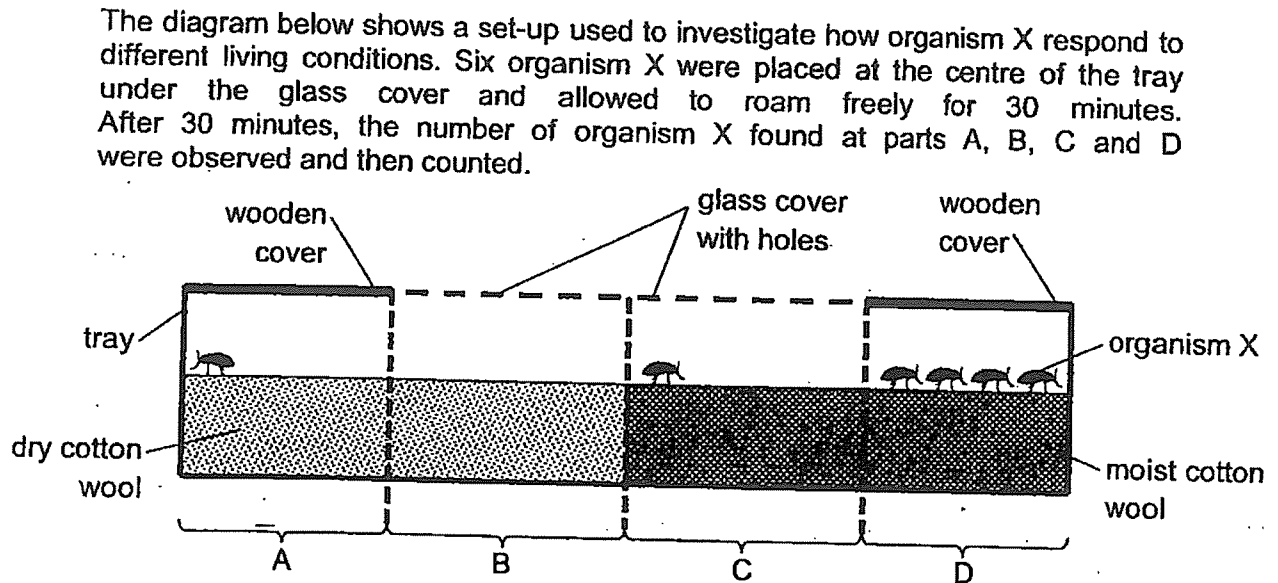
At which point did she start to rest? Explain your answer.

[2]



17. (a) What is a habitat?

[1]



The experiment was then repeated two more times and the results were recorded in the table below.

Part	Number of organism X			
	Trial 1	Trial 2	Trial 3	Average
A	1	2	0	1
B	0	0	0	0
C	1	0	2	1
D	4	4	4	4

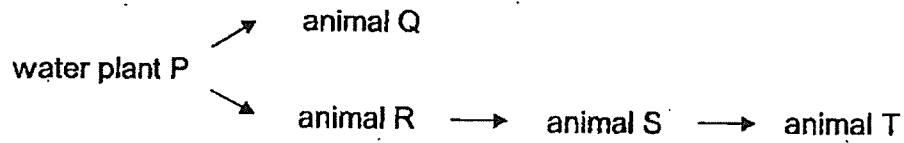
(b) State a possible reason why the organisms X were left for 30 minutes before the count was recorded.

[1]

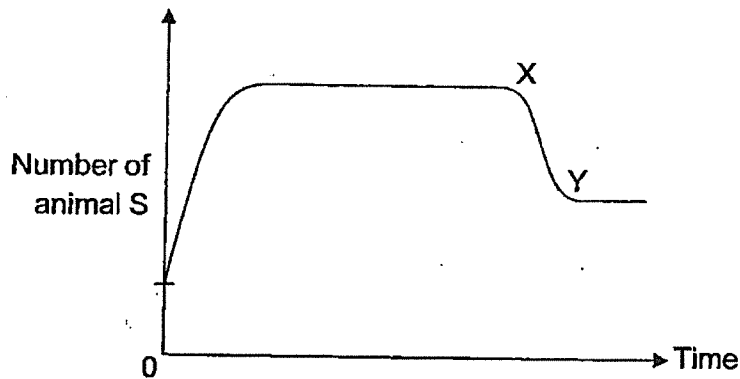
(c) Based on the results, suggest an example of a natural habitat for organism X.

[1]

18. Study the food web below.



The graph below shows the number of animal S over a period of time.



Selvi wrote down two reasons to explain the change in the number of animal S shown by part XY in the graph.

Reason 1: There is more animal Q added to the pond.

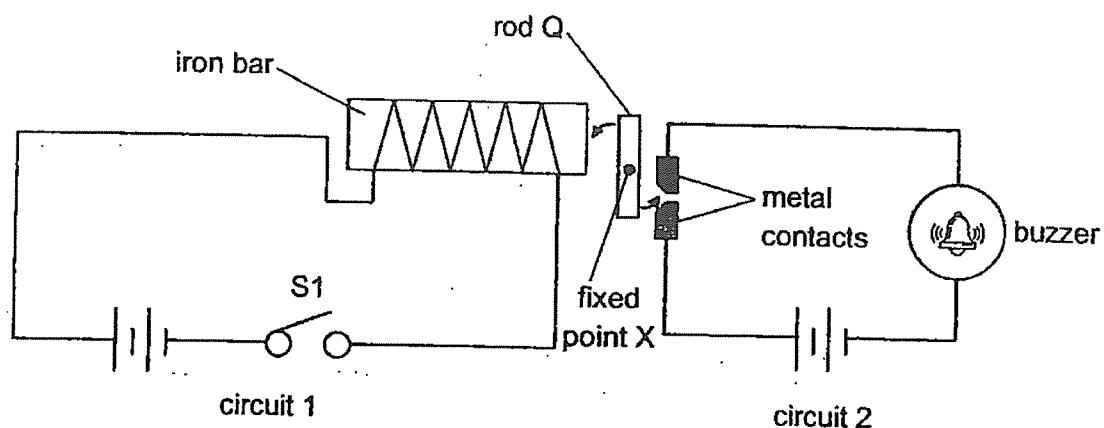
Reason 2: There is more water plant P added to the pond.

Which of the reasons given is correct? Explain your answer.

[2]



19. The diagram below shows two electrical circuits. Rod Q is placed between them and is able to rotate freely about fixed point X.




When S1 is closed, the buzzer makes a sound.

- (a) Explain how the buzzer is able to work when S1 is closed.


[2]

- (b) Apart from being an electrical conductor, suggest another property of the material of rod Q that enables the system to work.

[1]



20. Raj conducted an experiment to find out if the type of material affects the distance travelled by a toy car. He wound up the toy car before releasing it from point A on a flat surface covered with material X. He then measured the distance travelled by the toy car.



He repeated the experiment using different types of materials Y and Z and recorded the results in the table below.

Material	Distance travelled by the toy car (cm)			
	Trial 1	Trial 2	Trial 3	Average
X	7	6	8	7
Y	12	14	13	13
Z	9	10	11	10

- (a) Name two variables that should be kept constant to ensure a fair test. [1]

(i) _____

(ii) _____

- (b) State two forces that were present as the toy car was moving across the materials. [1]

(i) _____

(ii) _____

- (c) Based on the results, which material X, Y or Z has the roughest texture? Explain your answer. [1]

- (d) Other than increasing the number of times the toy car is wound up, what can be done to make the toy car go a further distance? Explain your answer. [1]



YEAR : 2023
 LEVEL : PRIMARY 6
 SCHOOL : CHIJ ST NICHOLAS GIRLS' SCHOOL (PRIMARY)
 SUBJECT : SCIENCE
 TERM : TERM 2 WEIGHTED ASSESSMENT

Q1	4	Q2	3	Q3	1	Q4	2	Q5	1
Q6	3	Q7	2	Q8	2	Q9	1	Q10	3
Q11	1	Q12	3	Q13	3	Q14	3	Q15	4

Q16	Point S. When she rested, her body needs less energy. So her heart beats slower to pump lesser blood containing lesser oxygen and lesser digested food to all body parts for a lower rate respiration.	
Q17	a)	A place where organisms live and reproduce.
	b)	To give organisms X time to roam around and choose its most suitable habitat.
	c)	Leaf litter.
Q18	Reason 1. A and R are competitors for the same food which is P. With more Q added there will be fewer P for R to eat, resulting in a decrease in R's population. Thus, there will be fewer R for S to eat resulting in a decrease in the population for S.	
Q19	a)	When S1 was closed, it formed a closed circuit so electricity could flow through the circuit to make the iron bar an electromagnet. The electromagnet will then attract rod Q and the other side of rod Q would touch the metal contacts, forming another closed circuit for electricity to flow through to sound the buzzer.
	b)	It must be made of a magnetic material.
Q20	a)	(i) Number of times the toy car was wound up (ii) Mass of the toy car
	b)	(i) Gravitational Force (ii) Frictional force
	c)	X as the toy car travelled the least distance which shows that there was the most friction force between the wheels of the car and material X.
	d)	Apply a lubricant to reduce the frictional force between the wheels of the car and surface it was travelling on.

