



AI TONG SCHOOL
2023
PRELIMINARY EXAMINATION
PRIMARY 6

MATHEMATICS
PAPER 1
(Booklet A)

DURATION (Booklets A and B) : 1 h

DATE : 21 AUGUST 2023

INSTRUCTIONS

1. Do not turn over this page until you are told to do so.
2. Follow all instructions carefully.
3. Answer all questions.
4. Use a 2B pencil to shade your answers in the Optical Answer Sheet (OAS).
5. The use of calculators is **NOT** allowed.

Name: _____ ()

Class: Primary 6 _____

Marks:

Parent's Signature : _____
Date : _____

Paper 1 (Booklet A)	20
--------------------------------------	-----------

Paper 1
Booklet A

Questions 1 to 10 carry 1 mark each. Questions 11 to 15 carry 2 marks each.
For each question, four options are given. One of them is the correct answer.
Make your choice (1, 2, 3 or 4). Shade the oval (1, 2, 3 or 4) on the Optical
Answer Sheet.

(20 marks)

1 $5\,809\,621 = 5\,000\,000 + \underline{\hspace{2cm}} + 9000 + 600 + 20 + 1$

What is the missing number in the blank?

- (1) 800
- (2) 8000
- (3) 80 000
- (4) 800 000

2 Which of the following numbers are common factors of 16 and 24?

- (1) 8 and 12
- (2) 2 and 3
- (3) 4 and 6
- (4) 4 and 8

3 Express 0.6 as a percentage.

- (1) 0.006%
- (2) 0.06%
- (3) 6%
- (4) 60%

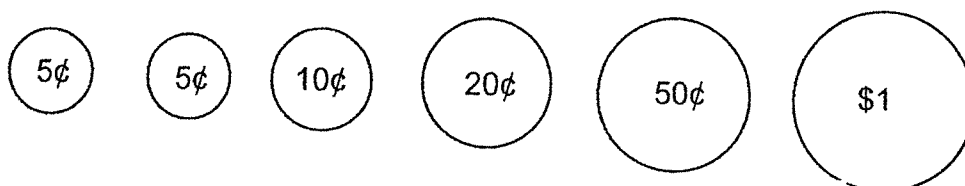
4 Carol is 15 years old. She is z years older than Abbie. How old is Abbie?

- (1) $(15 + z)$ years old
- (2) $(15 - z)$ years old
- (3) $(z - 15)$ years old
- (4) $(15z)$ years old

5 Which of the following fractions has the largest value?

- (1) $\frac{7}{9}$
- (2) $\frac{5}{11}$
- (3) $\frac{4}{7}$
- (4) $\frac{1}{2}$

6 Ravi had 6 coins in his wallet as shown. He took out only 4 coins to pay the exact amount for a bun.
Which of the following amounts is **not** a possible cost of the bun?



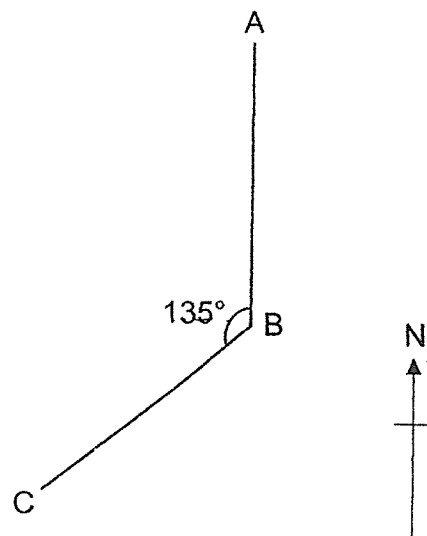
- (1) \$1.65
- (2) \$1.40
- (3) \$1.35
- (4) \$1.30

- 7 The average of 6 numbers is 14. When a 7th number is added, the average becomes 16. What is the 7th number?

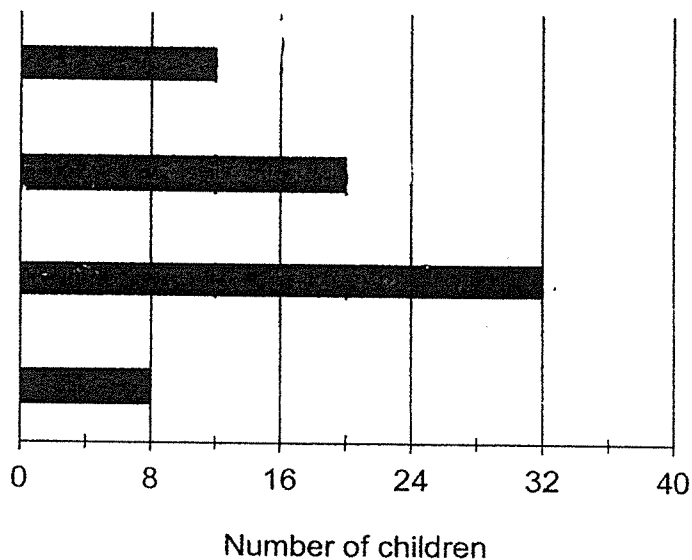
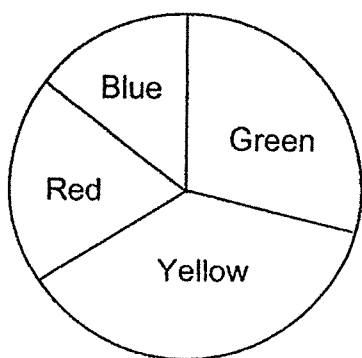
- (1) 30
- (2) 28
- (3) 14
- (4) 12

- 8 In the diagram, point A is north of point B and $\angle ABC = 135^\circ$. In what direction is point C from point B?

- (1) North-East
- (2) North-West
- (3) South-East
- (4) South-West



- 9 The pie chart shows what a group of children has chosen as their favourite colour. The same information is shown in a bar graph, but the names of the colours are not shown on the bar graph.

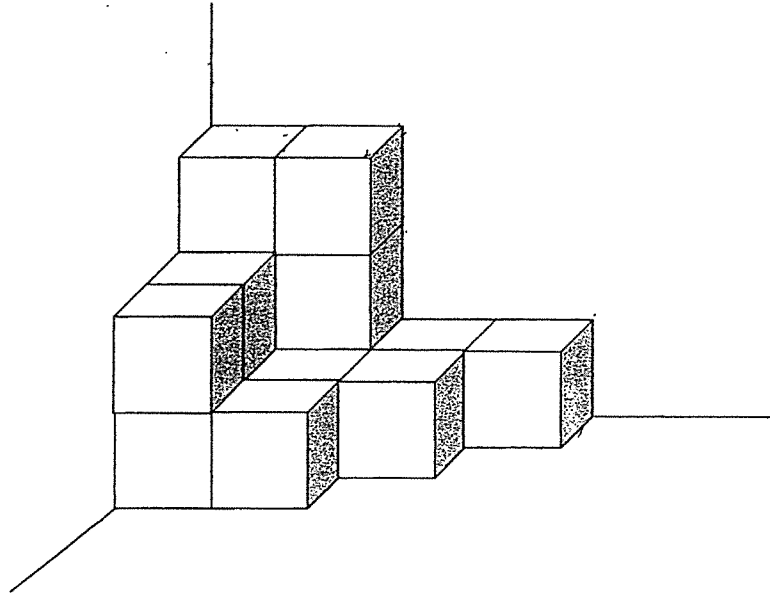


How many children chose yellow and red as their favourite colour?

- (1) 20
 - (2) 40
 - (3) 44
 - (4) 46
- 10 There were 84 adults. 51 of them were men.
What was the ratio of the number of women to the number of men?

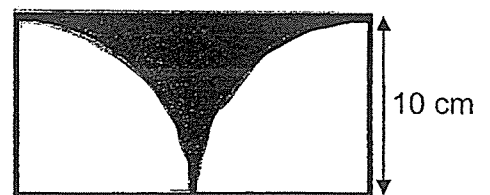
- (1) 11 : 17
- (2) 17 : 28
- (3) 17 : 11
- (4) 28 : 17

- 11 The solid below is made up of 1-cm cubes.
How many more 1-cm cubes are needed to build a cube of edge 4 cm?



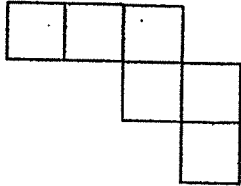
- (1) 28
(2) 36
(3) 49
(4) 53
- 12 The figure is made up of 2 identical quarter circles in a rectangle.
Find the perimeter of the shaded part. (Take $\pi = 3.14$)

- (1) 31.4 cm
(2) 35.7 cm
(3) 51.4 cm
(4) 78.5 cm

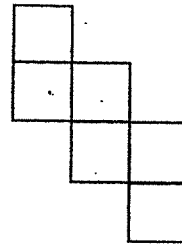


13 Which of the following is **not** a net of a cube?

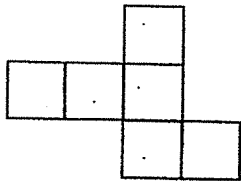
(1)



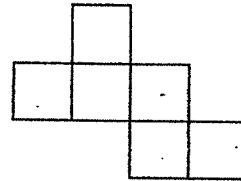
(2)



(3)



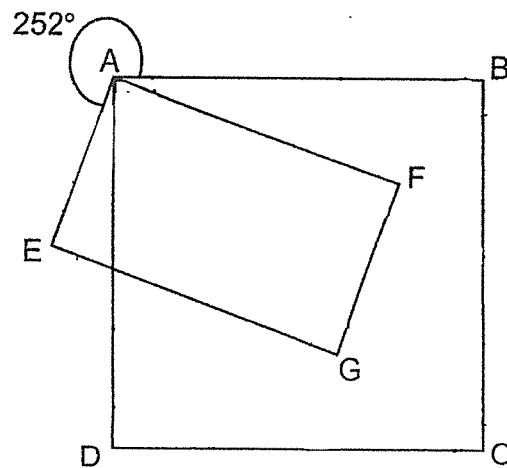
(4)



14 Meifang spent 20% of her money on a shirt. She used the rest of the money to buy a bag and a necklace. The bag cost \$24 more than the shirt. The necklace cost \$72. Find the cost of the bag.

- (1) \$56
- (2) \$48
- (3) \$40
- (4) \$32

- 15 In the figure, ABCD is a square, EAFG is a rectangle and $\angle EAB = 252^\circ$. Find $\angle DAF$.



- (1) 108°
- (2) 72°
- (3) 45°
- (4) 18°



AI TONG SCHOOL
2023
PRELIMINARY EXAMINATION
PRIMARY 6

MATHEMATICS
PAPER 1
(Booklet B)

DURATION (Booklets A and B) : 1 h

DATE : 21 AUGUST 2023

INSTRUCTIONS

1. Do not turn over this page until you are told to do so.
2. Follow all instructions carefully.
3. Answer all questions.
4. Use a dark blue or black ballpoint pen to write your answer in the space provided for each question.
5. Do not use correction fluid/tape or highlighters.
6. The use of calculators is **NOT** allowed.

Parent's signature:

Marks:

Paper 1 (Booklet B)	25
--------------------------------	-----------

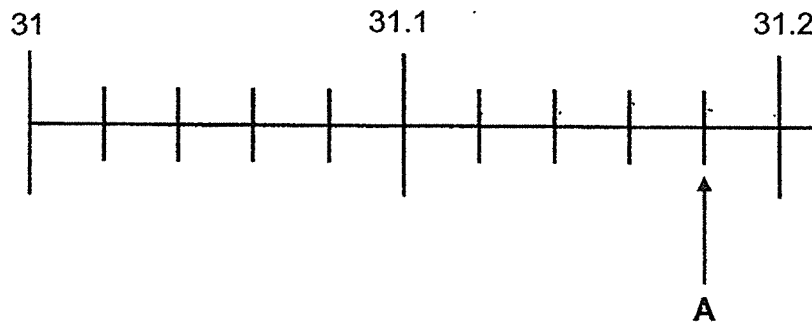
Paper 1
Booklet B

Questions 16 to 20 carry 1 mark each. Write your answers in the spaces provided.
For questions which require units, give your answers in the units stated.

Do not write
in this space

(5 marks)

- 16 In the number line, what is the value represented by A?

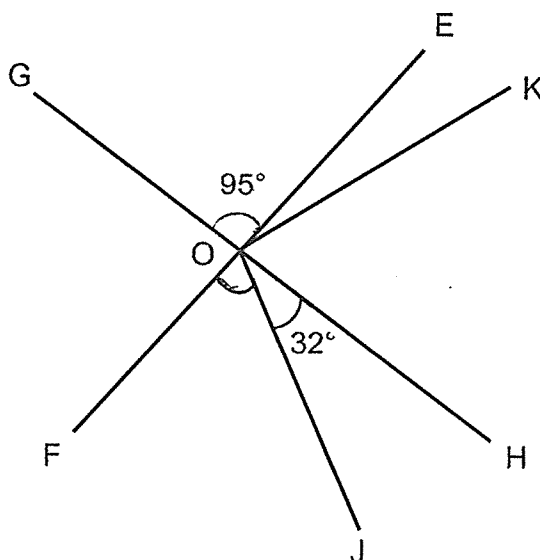


Ans: _____

- 17 7 men donated a total of \$1435.
What is the average amount donated by each man?

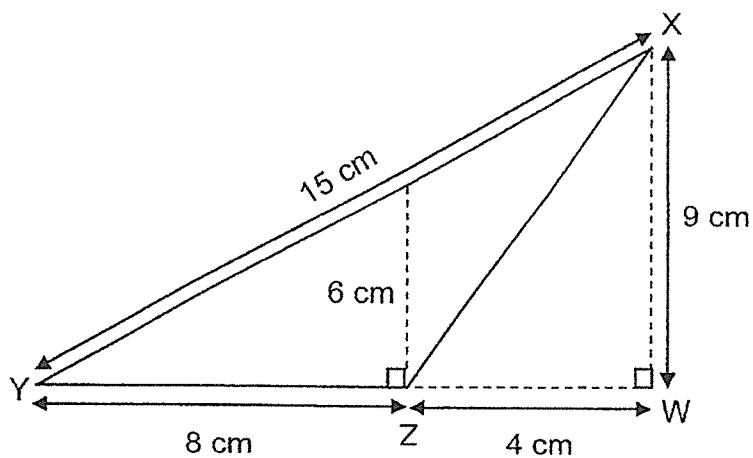
Ans: \$ _____

- 18 GH and EF are straight lines. $\angle GOE = 95^\circ$ and $\angle JOH = 32^\circ$. Find $\angle FOJ$.



Ans: _____^o



- 19 In the figure below, find the area of Triangle XYZ.



Ans: _____ cm^2

- 20 The figure below is made up of identical squares. Shade three more squares to form a symmetric figure with XY as the line of symmetry.

Do not write
in this space




Questions 21 to 30 carry 2 marks each. Show your working clearly and write your answers in the spaces provided. For questions which require units, give your answers in the units stated. (20 marks)

Do not write
in this space

- 21 Candies were sold by mass as shown.

Candies for Sale!

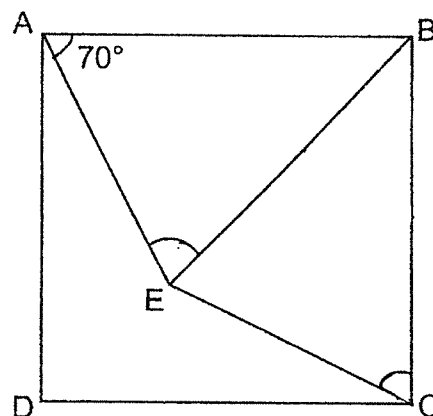
First 100 g	: \$5
Every additional 50 g	: \$2



Rashid bought a packet of candies which weighed 250 g.
How much did he pay?

Ans: \$ _____

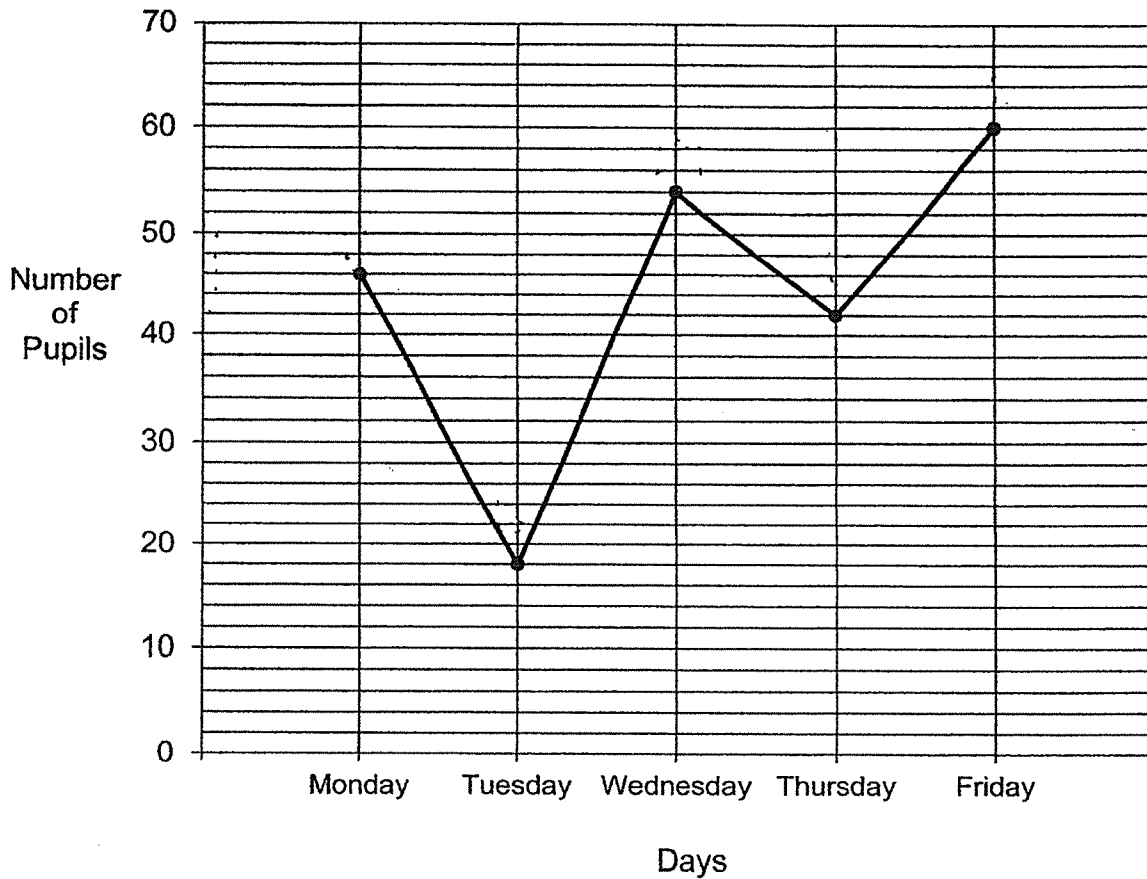
- 22 In the figure, ABCD is a square. $AB = EB$ and $\angle BAE = 70^\circ$. Find $\angle BCE$.



Ans: _____ °

Do not write
in this space

- 23 A group of pupils volunteered at an old folks' home for 5 days. The line graph shows their attendance at the old folks' home from Monday to Friday. All pupils turned up on Friday.



On which day were 30% of the pupils absent from the old folks' home?


Ans: _____



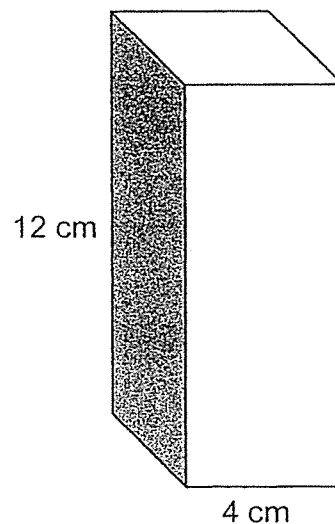
- 24 Find the value of $5 + 4a + 18 - 2a$ when $a = 8$.

Do not write
in this space


Ans: _____



- 25 A cuboid of height 12 cm has a square base of side 4 cm.
What is its volume?




Ans: _____ cm^3



Do not write
in this space

- 26 Lydia bought $3n$ packets of stickers. Each packet contained 8 stickers. She gave 25 stickers to her friends and divided the rest of the stickers equally into 7 boxes. How many stickers were there in each box? Give your answer in terms of n in the simplest form.

Ans: _____



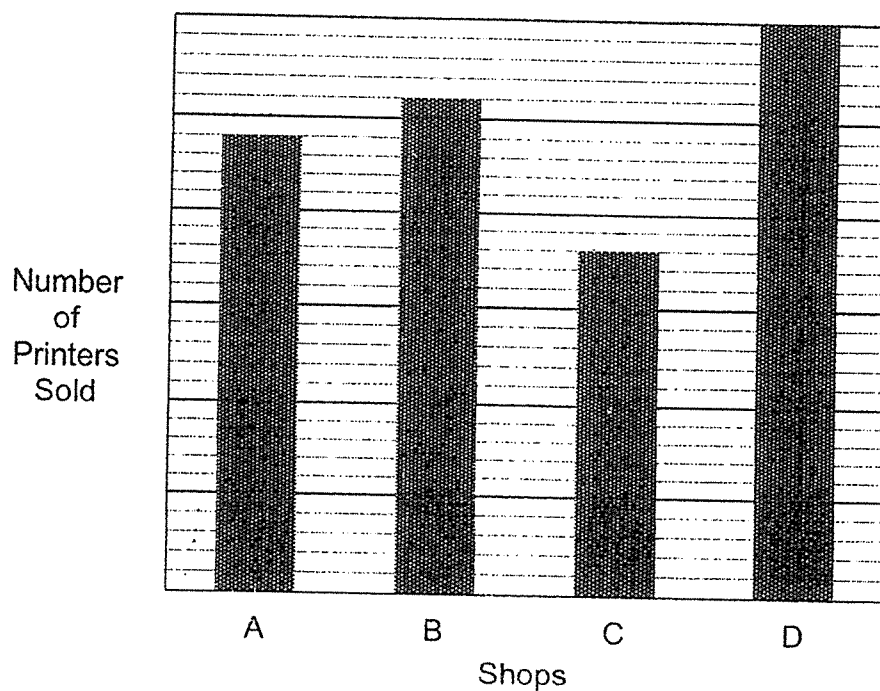
- 27 At first, the ratio of Weijie's savings to Lihua's savings was 5 : 4. After each of them spent \$40, the ratio of Weijie's savings to Lihua's savings became 13 : 10. What was Lihua's savings at first?

Ans: \$ _____



- 28 The bar graph below shows the number of printers sold by 4 shops in a month.

Do not write
in this space



What fraction of the total number of printers was sold by Shop B?
Give your answer in its simplest form.

Ans: _____



Do not write
in this space

- 29** A total of 115 people stand in a queue for concert tickets. There are at least 3 men between any 2 women. What is the largest possible number of women in the queue?

Ans: _____

- 30** Hasnah had 5 boxes of identical erasers. At first, each of the boxes contained the same number of erasers. She took 21 erasers from each box. After that, the total number of erasers left in the 5 boxes was equal to the total number of erasers in 2 of the boxes at first. What was the number of erasers in each box at first?

Ans: _____

End of Paper 1



AI TONG SCHOOL

**2023
PRELIMINARY EXAMINATION
PRIMARY 6
MATHEMATICS
PAPER 2**

DURATION : 1 h 30 min

DATE : 21 AUGUST 2023

INSTRUCTIONS

1. Do not turn over this page until you are told to do so.
2. Follow all instructions carefully.
3. Answer all questions.
4. Use a dark blue or black ballpoint pen to write your answer in the space provided for each question.
5. Do not use correction fluid/tape or highlighters.
6. The use of an approved calculator is allowed.

Parent's signature:

Marks :

Paper 1	45
Paper 2	55
Total	100

Questions 1 to 5 carry 2 marks each. Show your working clearly and write your answers in the spaces provided. For questions which require units, give your answers in the units stated. (10 marks)

Do not write in this space

- 1 Use all the digits 9, 2, 0, 3 to form
- (a) the greatest possible odd number
 - (b) the number closest to 3000

Ans: (a) _____ [1]

(b) _____ [1]

- 2 A roll of ribbon is cut into three pieces in the ratio of 7 : 2 : 3. The shortest piece is 42 cm. What is the length of the longest piece of ribbon?

Ans: _____ cm

- 3 Figure 1 shows a right-angled triangle. Figure 2 is made up of 4 such identical triangles shown in Figure 1 and a square in the middle. Find the sum of $\angle a$, $\angle b$ and $\angle c$.

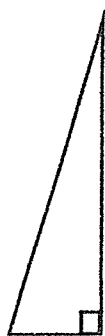


Figure 1

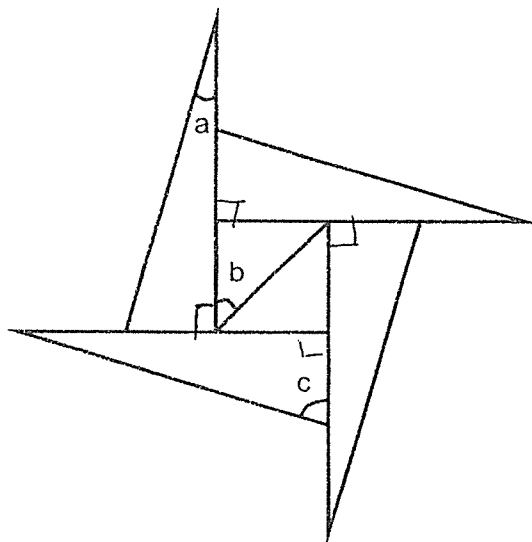


Figure 2

Do not write in
this space

Ans: _____°

- 4 The table below shows the grades of 120 students who joined a Mathematics competition. Grade A is the best grade and Grade E is the worst grade.

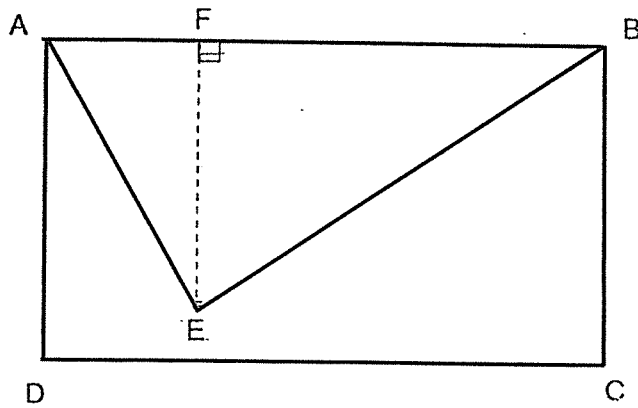
Grade	A	B	C	D	E
Number of students	15	27	54	18	6

Only $\frac{7}{20}$ of the students made it through to the second round.

What was the minimum grade required to go through to the second round?


Ans: _____

- 5 The area of rectangle ABCD is 1728 cm^2 . The length of FE is $\frac{5}{6}$ of the length of AD. What is the area of the triangle ABE?



Do not write
in this space

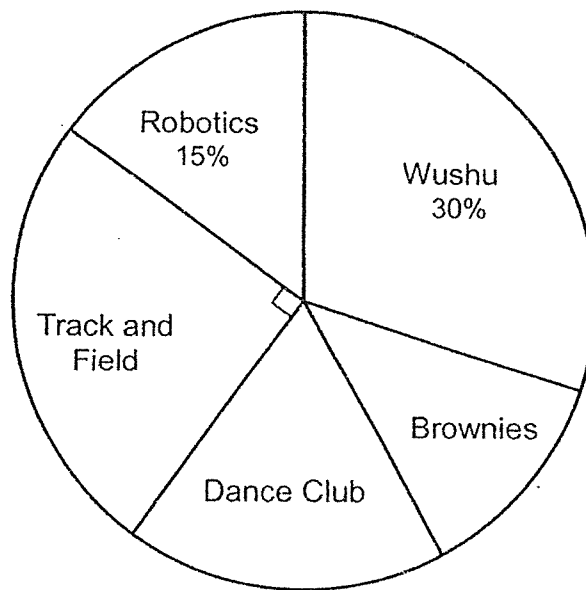
Ans: _____ cm^2



For questions 6 to 17, show your working clearly and write your answers in the spaces provided. The number of marks available is shown in bracket [] at the end of each question or part-question. For questions which require units, give your answers in the units stated. (45 marks)

Do not write
in this space

- 6 The pie chart shows the CCAs of 300 students in school.




- (a) What percentage of the students are in Dance Club and Brownies?

Ans: (a) _____ [1]

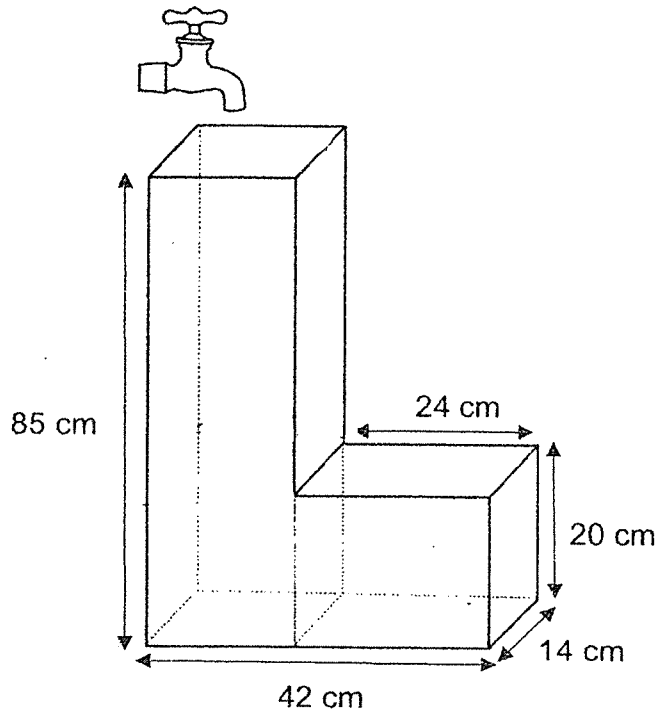
- (b) The ratio of the number of students in Dance Club to the number of students in Brownies is 3 : 2. How many students are in Brownies?

Ans: (b) _____ [2]



- 7 The figure below shows an empty container. All edges meet at right angles. When the tap is turned on, water flows into the container at a rate of 2.01 litres per minute. How much time is needed to fill the container completely?

Do not write
in this space

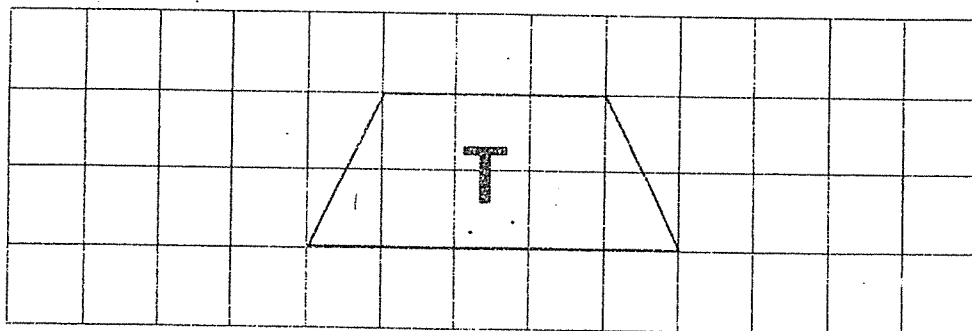


Ans: _____ [3]




- 8 Trapezium T is drawn on the square grid below.

Do not write
in this pace




- (a) In the square grid below, draw a square with twice the area of Trapezium T.

[1]



- (b) In the square grid below, draw a parallelogram with twice the perimeter of Trapezium T.


[2]



- 9 There were 45 soccer balls, 30 basketballs and 68 ping pong balls in the PE room. After 80 balls were added, the number of soccer balls increased by 40% and the number of ping pong balls increased by 25%. What was the percentage increase in the number of basketballs?

Do not write
in this space


Ans: _____ [3]



- 10 Both Farah and Jamil left their houses at the same time to go to the park. Farah travelled 20 km from her house to the park at an average speed of 30 km/h. Jamil travelled from his house at an average speed of 42 km/h and reached the park 15 minutes later than Farah. What was the distance between Jamil's home and the park?

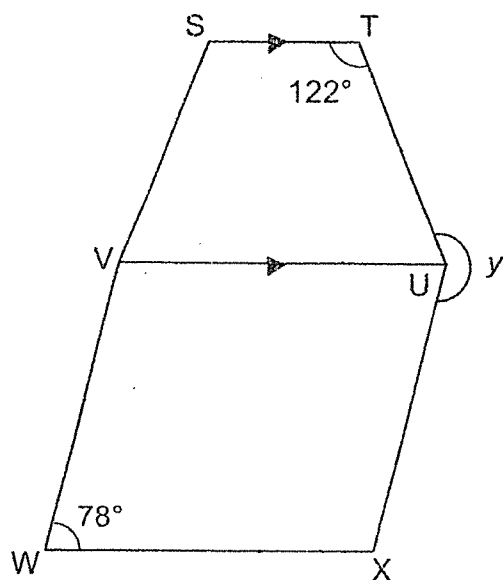
Do not write
in this space

Ans: _____ [3]



11 STUV is a trapezium. UVWX is a rhombus. Find $\angle y$.

Do not write
in this space




Ans: _____ [3]



- 12 There were a total of 2120 students at the school parade square at first.
After 536 boys and $\frac{1}{4}$ of the girls left, the ratio of the number of boys to the number of girls became 4 : 9. How many more girls than boys were there at the parade square in the end?

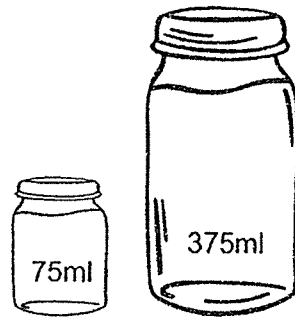
Do not write
in this space

Ans: _____ [4]



- 13 Charlie poured pancake mixture into two types of containers with different capacities as shown below.

Do not write
in this space



He poured half the mixture into big containers and the other half of it into small containers. He filled the containers to the brim. Charlie used 24 more small containers than big containers.

- (a) How many big containers did Charlie use?

Ans: (a) _____ [2]

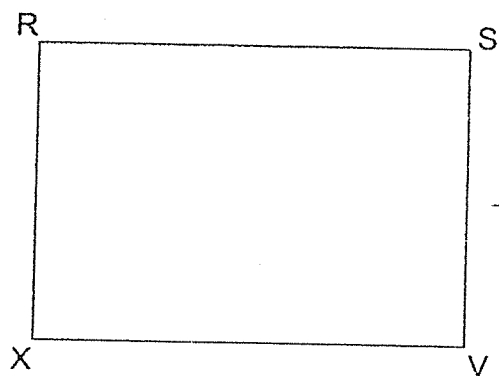
- (b) How much pancake mixture was there?

Ans: (b) _____ [2]

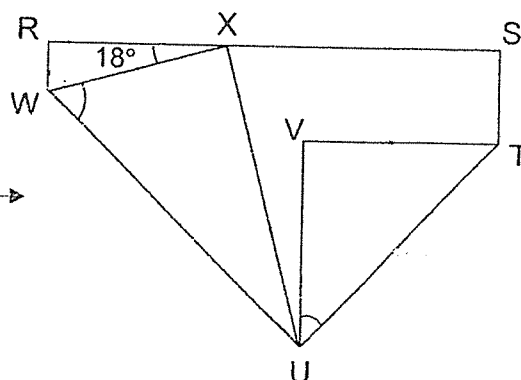


- 14 A rectangular piece of paper RSVX is folded at two of its corners as shown.
 $VT = VU$ and $\angle RXW = 18^\circ$.

Do not write
in this space



Before folding




After folding

- (a) Find $\angle VUT$.

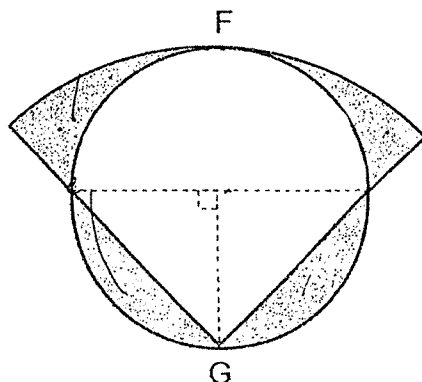
Ans: (a) _____ [1]

- (b) Find $\angle XWU$.

Ans: (b) _____ [3]



- 15 The figure below is made up of a quadrant and a circle overlapping each other. The quadrant touches the circle at points F and G. The circle, with centre O, has a diameter of 24 cm. Find the area of the shaded parts.
(Take $\pi = 3.14$)



Do not write
in this space

Ans: _____ [5]



Do not write
in this space


- 16 Ms Wong received \$6120 from selling some bags and some dresses. She received \$3240 more for the bags than the dresses. 4 times as many bags as dresses were sold. Each dress cost \$15 more than each bag.

(a) How much did Ms Wong receive for the bags?

Ans: (a) _____

(b) How many dresses did Ms Wong sell?

Ans: (b) _____ [3]



Do not write
in this space

- 17 Ali, Brandon, Carrie and Devi shared a sum of money equally at first.

Ali gave $\frac{2}{3}$ of his money to Brandon.

- (a) What fraction of the sum of money did Ali have in the end?


Ans: (a) _____ [1]

- (b) Brandon then gave $\frac{1}{5}$ of his money to Carrie.

Carrie then gave $\frac{3}{8}$ of her money and an additional \$55 to Devi.

Devi had \$595 in the end. How much was the sum of money they shared?

Ans: (b) _____ [4]



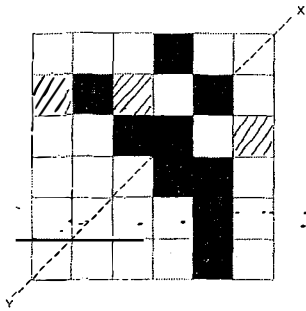
END OF PAPER
CHECK YOUR WORK CAREFULLY !

SCHOOL : AI TONG PRIMARY SCHOOL
LEVEL : PRIMARY 6
SUBJECT : MATHEMATICS
TERM : 2023 PRELIM

PAPER 1 (BOOKLET A)

Q1	4	Q2	4	Q3	4	Q4	2	Q5	1
Q6	2	Q7	2	Q8	4	Q9	3	Q10	1
Q11	3	Q12	3	Q13	1	Q14	1	Q15	2



PAPER 1 (BOOKLET B)

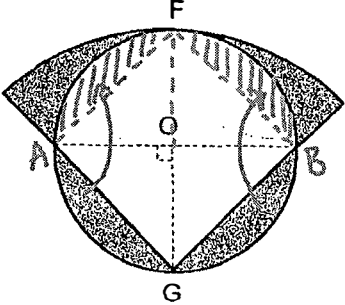
Q16	31.18
Q17	205
Q18	63°
Q19	36cm ²
Q20	
Q21	$250\text{g} - 100\text{g} = 150\text{g}$ $150\text{g} \div 50\text{g} = 3$ Amount paid = \$5 + 3(\$2) = \$11
Q22	$\angle AEB = 70^\circ$ $\angle ABE = 180^\circ - 70^\circ - 70^\circ = 40^\circ$ $\angle CBE = 90^\circ - 40^\circ = 50^\circ$ $\angle BCE = (180^\circ - 50^\circ) \div 2 = \mathbf{65^\circ}$
Q23	Percentage present = $100\% - 30\% = 70\%$ Total pupils in group = 60 $0.7 \times 60 = 42 \therefore \mathbf{\text{Thursday}}$

Q24	$5 + 4(8) + 18 - 2(8)$ $= 5 + 32 + 18 - 16$ $= 39$
Q25	Volume = $12 \times 4 \times 4 = 192 \text{ cm}^2$
Q26	Total stickers bought = $3n \times 8 = 24n$ Stickers left after giving friends = $24n - 25$ Stickers in each box = $\frac{24n - 25}{7}$
Q27	$12u - 10u = 2u$ $\$40 / 2 = \20 $\$20 \times 12 = \240
Q28	Printers sold by B = $26u$ Total sold = $24u + 26u + 18u + 30u = 98u$ Fraction of the total sold by B = $\frac{26}{98} = \frac{13}{49}$
Q29	Largest possible no. of women = least no. of men 1 group = 4 people No. of groups = $115 / 4 = 28\text{R}3 \rightarrow$ last group has 1 less M Largest possible no. of women = $28 + 1 = 29$
Q30	Total at first = $5u$ Total left = $2u$ $5u = 2u + 21(5)$ $3u = 105$ $1u = 35$

PAPER 2

Q1a	9203
Q1b	3029
Q2	$2u = 42$, $1u = 21$ $7u = 147$
Q3	$\angle a = \angle c = 90^\circ$ $\angle b = 90^\circ \div 2 = 45^\circ$ $\angle a + \angle b + \angle c = 90^\circ + 45^\circ = 135^\circ$
Q4	$120 \times \frac{7}{20} = 42$ $15 + 27 = 42$ Min grade = B
Q5	$1728 \times \frac{5}{6} = 1440\text{cm}^2$ $1440\text{cm}^2 \div 2 = 720\text{cm}^2$
Q6a	$100\% - 15\% - 30\% - 25\% = 30\%$

Q6b	<p>Percentage of students in Brownies = $\frac{2}{5} \times 30\% = 12\%$</p> <p>No. of students in Brownies = $\frac{12}{100} \times 300 = \mathbf{36}$</p>
Q7	<p>Total volume = $24 \times 20 \times 14 + 85 \times 14 \times (42 - 24) = 28140 \text{ cm}^3 = 28.14 \text{ l}$</p> <p>Time needed = $28.14 \div 2.01 = \mathbf{14 \text{ min}}$</p>
Q8a	
Q8b	
Q9	<p>No. of soccer balls added = $40\% \times 45 = 18$</p> <p>No. of ping pong balls added = $25\% \times 68 = 17$</p> <p>No. of basketballs added = $80 - 18 - 17 = 45$</p> <p>Percentage increase = $\frac{45}{30} \times 100\% = \mathbf{150\%}$</p>
Q10	<p>Time taken for Farah = $20 \div 30 = 40 \text{ min}$</p> <p>Time taken for Jamil = $40 + 15 = 55 \text{ min} = \frac{11}{12} \text{ h}$</p> <p>Distance = $42 \times \frac{11}{12} = \mathbf{38.5 \text{ km}}$</p>
Q11	<p>$\angle TUV = 180^\circ - 122^\circ = 58^\circ$</p> <p>$\angle VUX = 78^\circ$</p> <p>$\angle y = 360^\circ - 78^\circ - 58^\circ = \mathbf{224^\circ}$</p>
Q12	<p>$2120 - 536 = 1584$</p> <p>$\frac{3}{4}$ of girls = $9u$</p> <p>Total girls = $12u$</p> <p>$12u + 4u = 1584$</p> <p>$1u = 1584 \div 16 = 99$</p> <p>$5u = 99 \times 5 = \mathbf{495}$</p>

Q13a	$375 - 75 = 300$ $24 \times 75 = 1800$ $1800 \div 300 = 6$
Q13b	$6 \times 375 \times 2 = 4500 \text{ ml}$
Q14a	$(180^\circ - 90^\circ) \div 2 = 45^\circ$
Q14b	$\angle RWX = 180^\circ - 90^\circ - 18^\circ = 72^\circ$ $\angle XWU = (180^\circ - 72^\circ) \div 2 = 54^\circ$
Q15	<p>Shaded area = big quadrant - unshaded AFBG</p> <p>Area of big quadrant</p> $= \frac{1}{4} \pi r^2 = \frac{1}{4} \times 3.14 \times (24)^2$ $= 452.16 \text{ cm}^2$ <p>Area of AFBG = 24×12</p> $= 288 \text{ cm}^2$ <p>Area of shaded part = $452.16 \text{ cm}^2 - 288 \text{ cm}^2$</p> $= 164.16 \text{ cm}^2$ 
Q16a	$\$6120 - \$3240 = \$2880$ $\$2880 \div 2 = \1440 $\$1440 + \$3240 = \$4680$
Q16b	$\$4680 \div 4 = \1170 $\$1440 - \$1170 = \$270$ $\$270 \div 15 = 18$
Q17a	<p>Total units = $4 \times 3 = 12u$</p> <p>Fraction Ali had in the end = $\frac{1}{12}$</p>
Q17b	<p><u>Before</u></p> <p>A : B : C : D</p> $= 1u : 5u : 3u : 3u$ <p><u>After Brandon gave Carrie</u></p> <p>A : B : C : D</p> $= 1u : 4u : 4u : 3u$ $= 2u : 8u : 8u : 6u$ <p><u>After Carrie gave Devi</u></p> <p>A : B : C : D</p> $= 2u : 8u : 5u - \$55 : 9u + \55 <p>$9u + \\$55 = \\595</p> <p>$9u = \\$540$</p> <p>$1u = \\60</p> <p>$24u = \\$60 \times 24 = \\1440</p>