

Marks	
Section A:	/10
Section B:	/8
Section C:	/7
<b>Total:</b>	<b>/25</b>

Date: \_\_\_\_\_

Score	
	2



- 3 In the following number pattern, what is the missing number?

21 978, \_\_\_\_\_, 21 778, 21 678, 21 578

- (1) 22 178
- (2) 22 078
- (3) 21 968
- (4) 21 878

(     )

- 4 Which of the following numbers when rounded to the nearest hundred becomes 49 000?

- (1) 48 875
- (2) 48 965
- (3) 49 099
- (4) 49 144

(     )

- 5 Which of the following is a factor of both 12 and 28?

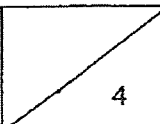
- (1) 7
- (2) 6
- (3) 5
- (4) 4

(     )

- 6 Which of the following is a multiple of both 4 and 6?

- (1) 10
- (2) 12
- (3) 16
- (4) 18

(     )

Score	
-------	---

- 7 Peter stored 3425 boxes of masks in the warehouse.  
He sold 625 boxes masks on Monday and 2150 boxes of masks on Tuesday.  
How many boxes of masks is he left with?

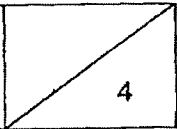
- (1) 2800  
(2) 2775  
(3) 1275  
(4) 650

( )

- 8 The sum of two numbers is 75. One of the numbers is a multiple of 8. The other number is a factor of 21. What is the difference between the 2 numbers?

- (1) 72  
(2) 69  
(3) 54  
(4) 46

( )

Score	
-------	---

**Section B (8 marks)**

Questions 9 to 12 carry 2 marks each. Write your answers in the spaces provided.  
For questions which require units, give your answers in the units stated.

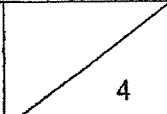
- 9 A number is 5800 when rounded to the nearest hundred.  
What are the smallest and greatest possible numbers?

Ans: (a) Smallest: \_\_\_\_\_ [ 1 ]

(b) Greatest: \_\_\_\_\_ [ 1 ]

- 10 There are 2400 red and blue stickers in a shop.  
The number of red stickers is three times as many as the number of blue stickers.  
How many blue stickers are there?

Ans: \_\_\_\_\_

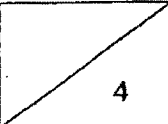
Score	
-------	---

- 11 Mr Tan bought 125 boxes of chocolates.  
Each box contained 28 chocolates.  
How many chocolates did Mr Tan buy in total?

Ans: \_\_\_\_\_

- 12 Mr Lim bought a bag of candies for his students.  
If he gives each student 6 candies, he will not have any candies left.  
If he gives each student 8 candies, he will be short of 6 candies.  
How many students did he have?

Ans: \_\_\_\_\_

Score	
-------	---

**Section C (6 marks)**

For questions 13 and 14, show your working clearly and write your answers in the spaces provided. The number of marks available is shown in brackets [ ] at the end of each question or part question.

13 Three ovens and two printers cost \$2300.

A printer cost \$80 more than an oven.

What is the cost of an oven?

Ans: \_\_\_\_\_ [3]

Score	<div></div>
	3

14 John had twice as much money as Ken.

After John spent \$1064, Ken had four times as much money as John.

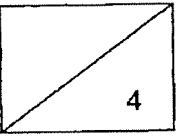
a) How much money did John have in the end?

Ans: (a) \_\_\_\_\_ [2]

b) How much money did the both of them have at first?

Ans: (b) \_\_\_\_\_ [2]

End of Paper

Score	
-------	---





Nan Hua Primary School  
Primary 4 Mathematics  
Term 2 Weighted Assessment 2023

Marks	
Section A:	/10
Section B:	/8
Section C:	/7
Total:	/25

Name: \_\_\_\_\_ (      )

Class: Primary 4M \_\_\_\_\_

Date: \_\_\_\_\_

Duration: 40 minutes

\_\_\_\_\_  
Parent's Signature

Answer all questions.

**Section A**

Questions 1 to 6 carry 1 mark each.

Questions 7 to 8 carry 2 marks each.

For each question, four options are given. One of them is the correct answer. Make your choice (1, 2, 3 or 4) and write your answer in the bracket provided. (10 marks)

1.  $3\frac{2}{5} = \frac{\square}{5}$

What is the missing number in the box?

(1) 10

(2) 15

(3) 17

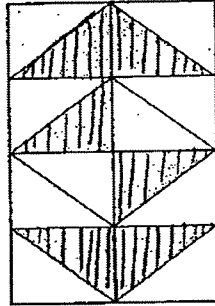
(4) 32

(      )

(Go on to the next page)

2

- 2 The figure below is made up of identical triangles. What fraction of the figure is shaded?



(1)  $\frac{3}{4}$

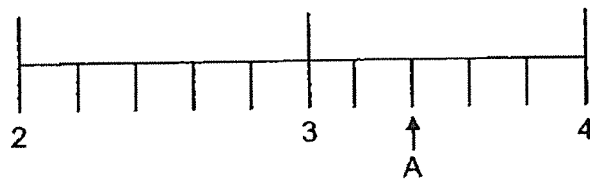
(2)  $\frac{3}{5}$

(3)  $\frac{3}{8}$

(4)  $\frac{5}{8}$

( )

- 3 In the number line, what is the mixed number represented by A?



(1)  $2\frac{7}{10}$

(2)  $2\frac{7}{12}$

(3)  $3\frac{2}{5}$

(4)  $3\frac{2}{6}$

( )

(Go on to the next page)

4 Find the value of  $\frac{7}{8} - \frac{1}{4}$

(1)  $\frac{5}{8}$

(2)  $\frac{6}{8}$

(3)  $1\frac{1}{8}$

(4)  $1\frac{1}{2}$

( )

5 Find the value of  $\frac{1}{3} + \frac{2}{9} + \frac{7}{9}$

(1)  $1\frac{1}{9}$

(2)  $1\frac{2}{9}$

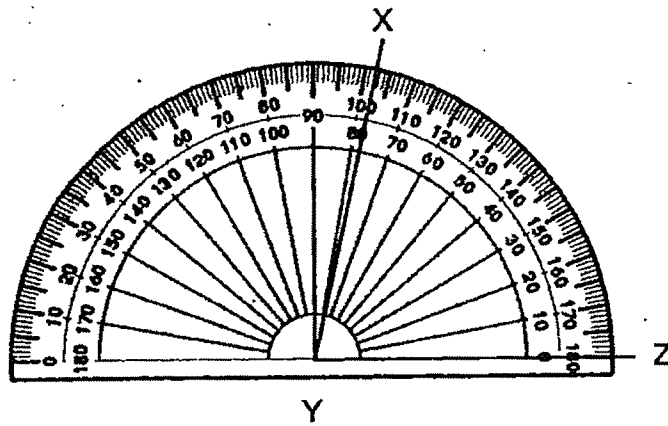
(3)  $1\frac{1}{3}$

(4)  $1\frac{2}{3}$

( )

(Go on to the next page)

6 What is the size of  $\angle XYZ$ ?



- (1)  $78^\circ$
- (2)  $82^\circ$
- (3)  $102^\circ$
- (4)  $118^\circ$

( )

(Go on to the next page)

- 7 Arrange the following fractions from the smallest to the greatest.

$$1\frac{1}{4}, \frac{12}{11}, 1\frac{1}{8}$$

(smallest)

(greatest)

(1)  $1\frac{1}{4}, 1\frac{1}{8}, \frac{12}{11}$

(2)  $1\frac{1}{8}, \frac{12}{11}, 1\frac{1}{4}$

(3)  $\frac{12}{11}, 1\frac{1}{4}, 1\frac{1}{8}$

(4)  $\frac{12}{11}, 1\frac{1}{8}, 1\frac{1}{4}$

( )

- 8 Jane had 6 cakes. She gave  $\frac{1}{2}$  of a cake to her sister and  $\frac{1}{3}$  of a cake to her brother. How many cakes had she left?

(1)  $\frac{2}{5}$

(2)  $\frac{5}{6}$

(3)  $5\frac{1}{6}$

(4)  $5\frac{3}{5}$

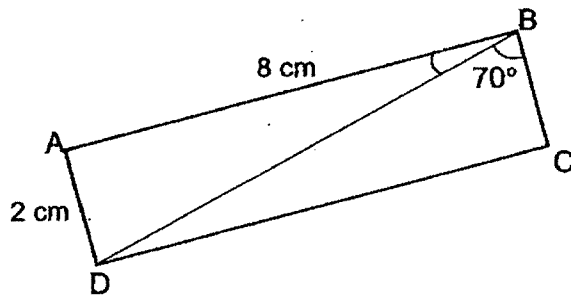
( )

(Go on to the next page)

**Section B**Do not write  
in this space

Questions 9 to 12 carry 2 marks each. Write your answers in the spaces provided.  
For questions which require units, give your answers in the units stated. (8 marks)

- 9 ABCD is a rectangle.  $\angle DBC = 70^\circ$ .



- (a) Find the length of DC.

Ans : (a) \_\_\_\_\_ cm

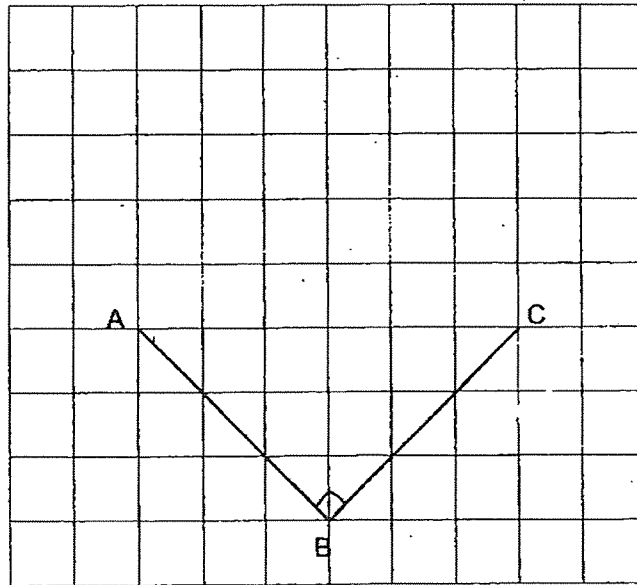
- (b) Find  $\angle ABD$ .

Ans : (b) \_\_\_\_\_ °



(Go on to the next page)

- 10 In the grid below, draw and label the square ABCD. Lines AB and BC have been drawn for you.



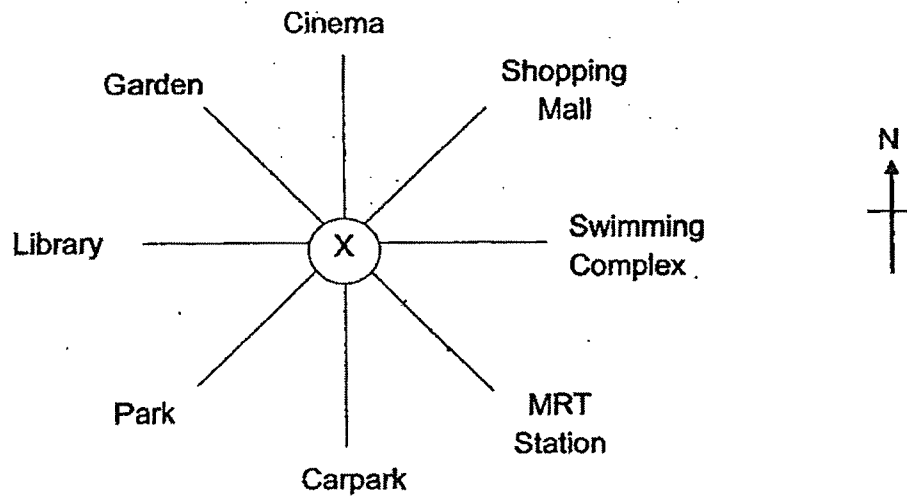
- 11 Emma has 24 apples and oranges.  $\frac{3}{8}$  of the fruits are apples. How many more oranges than apples does Emma have?

Ans : \_\_\_\_\_




(Go on to the next page)

- 12 Simon was standing at Point X.



After making a  $135^\circ$  anticlockwise turn, he ended up facing the MRT Station.  
Where was he facing at first?

Ans : \_\_\_\_\_



(Go on to the next page)



**Section C**

For questions 13 to 14, show your working clearly and write your answers in the spaces provided. The number of marks is shown in brackets [ ] at the end of each question or part-question. (7 marks)

Do not write  
in this space

13 Amy has  $\frac{3}{5}$  kg of sugar. Bala has  $\frac{1}{3}$  kg of sugar more than Amy.

- (a) How much sugar does Bala have? Express your answer in its simplest form.

Ans: (a) \_\_\_\_\_ [2]

- (b) How much sugar do they have altogether? Express your answer in its simplest form.

Ans: (b) \_\_\_\_\_



(Go on to the next page)

- 14  $\frac{1}{3}$  of a bottle was filled with orange juice. After John poured in another 600 ml of orange juice, it became  $\frac{5}{9}$  full. How much orange juice can the bottle hold when it is completely full? Give your answer in millilitres.

Do not write  
in this space

Ans: \_\_\_\_\_ [3]

End of Paper



**Nan Hua Primary School**  
**Primary 4 Mathematics**  
**Term 3 Weighted Assessment 2023**

Name: \_\_\_\_\_ ( )

Class: Primary 4M \_\_\_\_\_

Date: \_\_\_\_\_

Duration: 40 minutes

Marks	
Section A:	/10
Section B:	/8
Section C:	/7
<b>Total:</b>	<b>/25</b>

\_\_\_\_\_  
 Parent's Signature

Answer all questions.

**Section A (10 marks)**

Questions 1 to 6 carry 1 mark each. Questions 7 and 8 carry 2 marks each. For each question, four options are given. One of them is the correct answer. Make your choice (1, 2, 3 or 4) and write your answer in the bracket provided.

1 Arrange the following decimals in decreasing order.

7.051	7.101	7.011	7.105
-------	-------	-------	-------

- |     | <u>Greatest</u> |        |        | <u>Smallest</u> |     |
|-----|-----------------|--------|--------|-----------------|-----|
| (1) | 7.011,          | 7.051, | 7.101, | 7.105           |     |
| (2) | 7.011,          | 7.105, | 7.051, | 7.101           |     |
| (3) | 7.105,          | 7.011, | 7.101, | 7.051           |     |
| (4) | 7.105,          | 7.101, | 7.051, | 7.011           | ( ) |

2 Round 38.695 to the nearest tenth.

- |     |      |     |
|-----|------|-----|
| (1) | 38.0 |     |
| (2) | 38.6 |     |
| (3) | 38.7 |     |
| (4) | 39.0 | ( ) |

This paper consists of 7 printed pages & 1 blank page.

Score	2
-------	---

2

3 Express  $5\frac{9}{25}$  as a decimal.

- (1) 5.09
- (2) 5.25
- (3) 5.36
- (4) 5.90

( )

4 Express 2.003 as a fraction.

- (1)  $2\frac{1}{3}$
- (2)  $2\frac{3}{10}$
- (3)  $2\frac{3}{100}$
- (4)  $2\frac{3}{1000}$

( )

5 What is the missing number in the box?

$$8.175 = 8 + 0.1 + \boxed{\phantom{000}} + 0.005$$

- (1) 0.007
- (2) 0.07
- (3) 0.7
- (4) 7

( )

Score	<div style="border: 1px solid black; width: 40px; height: 40px; position: relative;"><div style="position: absolute; top: 0; right: 0; width: 100%; height: 100%; border-left: 1px solid black; border-top: 1px solid black;"></div><div style="position: absolute; bottom: 0; right: 0; width: 20px; height: 20px; text-align: center; line-height: 20;">3</div></div>
-------	---

6 3.46 is 0.1 more than \_\_\_\_\_.

- (1) 3.36
- (2) 3.45
- (3) 3.47
- (4) 3.56

( )

7 A pen cost \$2.60. Diana bought two pens and gave the cashier \$10. How much change did she get?

- (1) \$4.80
- (2) \$5.20
- (3) \$7.40
- (4) \$12.60

( )

8 The total length of one yellow ribbon and one green ribbon is 8.7 m.  
Each yellow ribbon is twice as long as the green ribbon.  
What is the length of the yellow ribbon?

- (1) 1.45 m
- (2) 2.90 m
- (3) 4.35 m
- (4) 5.80 m

( )

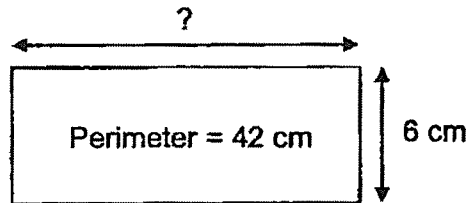
(Go on to the next page)

Score	5
-------	---

**Section B (8 marks)**


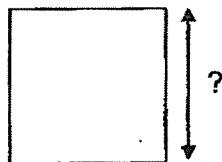
Questions 9 to 12 carry 2 marks each. Show your working clearly and write your answers in the spaces provided. For questions which require units, give your answers in the units stated.

- 9 Find the length of the rectangle given its perimeter.



Ans: \_\_\_\_\_ cm

- 10 The area of the square is twice the area of the rectangle. Find the length of one side of the square.



Ans: \_\_\_\_\_ cm

Score	4
-------	---

- 11 In a long jump competition, Aaron and Benson jumped the same distance while Caleb jumped 0.18 m more than Aaron. If the three boys jumped a total distance 4.56 m, how far did Aaron jump?

Ans: \_\_\_\_\_ m

- 12 The price of apples sold in a shop is as follows:

One apple costs \$0.90

A pack of five apples costs \$3.75

Alice wants to buy 12 apples. What is the least amount of money she has to pay?

Ans: \$ \_\_\_\_\_

(Go on to the next page)

Score	4
-------	---

**Section C (7 marks)**

Show your working clearly and write your answers in the spaces provided. For questions which require units, give your answers in the units stated.

- 13** A dress and five identical T-shirts cost \$132.50.  
A dress and two of the identical T-shirts cost \$75.80.  
What is the cost of one T-shirt?

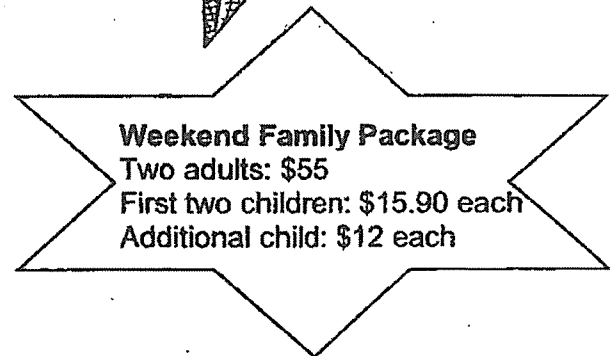
Ans: \_\_\_\_\_ [3m]

Score	3
-------	---



**Museum of Ice Cream**

Entrance fees:	
Adult:	\$28.90
Child: (12 years old and below)	\$ ?



- (a) Mrs Lim brought her two children under the age of 12 to the Museum of Ice Cream on Wednesday. She paid \$61.90 in total. What is the entrance fee for a child under 12 years old?

Ans: (a) \_\_\_\_\_ [2m]

- (b) Mr and Mrs Tan brought their three children under the age of 12 to the Museum of Ice Cream on Saturday. How much did they pay for the entrance tickets altogether?

Ans: (b) \_\_\_\_\_ [2m]

End of Paper

Score	4
-------	---



SCHOOL : NAN HUA PRIMARY SCHOOL  
 LEVEL : PRIMARY 4  
 SUBJECT : MATHEMATICS  
 TERM : 2023 WA1, WA2 AND WA3

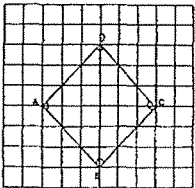
**WA1**

Q1	3	Q2	2	Q3	4	Q4	2	Q5	4
Q6	2	Q7	4	Q8	2				

Q9a	$5800 - 50 = \mathbf{5750}$
Q9b	$5800 + 49 = \mathbf{5849}$
Q10	$4u = 2400$ $1u = \mathbf{600}$
Q11	$125 \times 28 = \mathbf{3500}$
Q12	3
Q13	$80 \times 2 = 160$ $5u = 2300 - 160 = 2140$ $1u = 2140 \div 5 = \mathbf{\$428}$
Q14a	$7u = 1064$ $1u = 1064 \div 7 = \mathbf{\$152}$
Q14b	$12u = 12 \times \$152 = \mathbf{\$1824}$

**WA2**

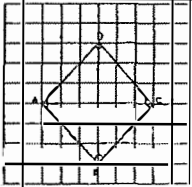
Q1	3	Q2	3	Q3	3	Q4	1	Q5	3
Q6	1	Q7	4	Q8	3				

Q9a	8 cm
Q9b	$90^\circ - 70^\circ = \mathbf{20^\circ}$
Q10	
Q11	$125 \times 28 = \mathbf{3500}$

**SCHOOL : NAN HUA PRIMARY SCHOOL**  
**LEVEL : PRIMARY 4**  
**SUBJECT : MATHEMATICS**  
**TERM : 2023 WA2**

**WA2**

Q1	3	Q2	3	Q3	3	Q4	1	Q5	3
Q6	1	Q7	4	Q8	3				

Q9a	8 cm
Q9b	$90^\circ - 70^\circ = 20^\circ$
Q10	
Q11	$125 \times 28 = 3500$
Q12	Library
Q13a	$\frac{1}{3} + \frac{3}{5} = \frac{9}{15} + \frac{5}{15} = \frac{14}{15} \text{ kg}$
Q13b	$\frac{14}{15} + \frac{3}{5} = \frac{9}{15} + \frac{14}{15} = 1\frac{8}{15} \text{ kg}$
Q14	$\frac{5}{9} - \frac{1}{3} = \frac{5}{9} - \frac{3}{9} = \frac{2}{9} \text{ kg}$ $2u = 600$ $1u = 300$ $9u = 300 \times 9 = 2700 \text{ ml}$

SCHOOL : NAN HUA PRIMARY SCHOOL  
 LEVEL : PRIMARY 4  
 SUBJECT : MATHEMATICS  
 TERM : 2023 WA3

**WA3**

Q1	4	Q2	3	Q3	3	Q4	4	Q5	2
Q6	1	Q7	1	Q8	4				

Q9	$42 \div 2 = 21$ $21 - 6 = 15 \text{ cm}$
Q10	$18 \times 2 = 36$ $6 \times 6 = 36$ Ans: <b>6 cm</b>
Q11	$4.56 - 0.18 = 4.38$ $4.38 \div 3 = 1.46 \text{ m}$
Q12	$3.75 \times 2 = 7.5$ $0.9 \times 2 = 1.8$ $1.8 + 7.5 = \$9.30$
Q13	$5 - 2 = 3$ $132.5 - 75.8 = 56.7$ $56.7 \div 3 = \$18.90$
Q14a	$61.9 - 28.9 = 33$ $33 \div 2 = \$16.50$
Q14b	$15.9 \times 2 = 31.8$ $31.8 + 12 = 43.8$ $43.8 + 55 = \$98.80$

