

**A**

**PEI CHUN PUBLIC SCHOOL**  
**End-of-Year Examination, 2023**

**MATHEMATICS**  
**PRIMARY 4**

**BOOKLET A**

Additional materials: Optical Answer Sheet (OAS)

Total Time For Booklets A & B : 1 h 45 min

Name : \_\_\_\_\_ (    )

Class : Primary 4 / \_\_\_\_\_

Date : 30 October 2023

Maths Teacher: \_\_\_\_\_

**INSTRUCTIONS TO CANDIDATES**

DO NOT TURN OVER THIS PAGE UNTIL YOU ARE TOLD TO DO SO.

FOLLOW ALL INSTRUCTIONS CAREFULLY.

ANSWER ALL THE QUESTIONS.

SHADE YOUR ANSWERS IN THE OPTICAL ANSWER SHEET (OAS) PROVIDED.



Questions 1 to 15 carry 2 marks each. For each question, four options are given. One of them is the correct answer. Make your choice (1, 2, 3 or 4). Shade the correct oval (1, 2, 3 or 4) on the Optical Answer Sheet. (30 marks)

---

1. The value of the digit 7 in 67 089 is \_\_\_\_\_.
  - (1) 70
  - (2) 700
  - (3) 7000
  - (4) 70 000
  
2. 43 852 rounded to the nearest hundred is \_\_\_\_\_.
  - (1) 43 800
  - (2) 43 850
  - (3) 43 900
  - (4) 44 000
  
3. In which of the following numbers does the digit 4 stand for 4 hundredths?
  - (1) 194.36
  - (2) 387.64
  - (3) 426.09
  - (4) 867.46
  
4. Express  $\frac{53}{1000}$  as a decimal.
  - (1) 0.53
  - (2) 0.503
  - (3) 0.053
  - (4) 0.0053

5. Which one of the following has  $\frac{1}{6}$  of the figure shaded?



(1)



(2)



(3)



(4)

6. Which of the following is **not** in its simplest form?

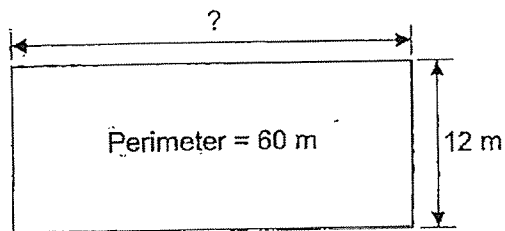
(1)  $\frac{2}{6}$

(2)  $\frac{4}{7}$

(3)  $\frac{5}{8}$

(4)  $\frac{8}{9}$

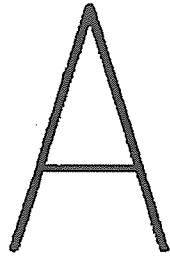
7. What is the length of the rectangle given its perimeter?



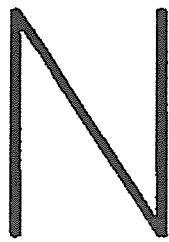
- (1) 5 m  
(2) 15 m  
(3) 18 m  
(4) 24 m

8. Which of the following figures has perpendicular lines?


(1)



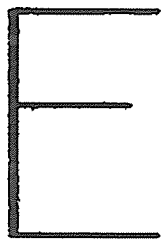
(2)



(3)




(4)



9. Which of the following figures is symmetrical?


(1)



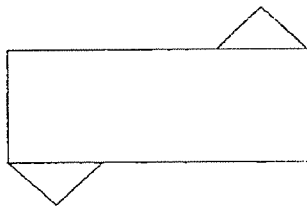
(2)



(3)



(4)



10. Jane completed her job at 01 20. She worked for 4 h 30 min. At what time did she start her job?

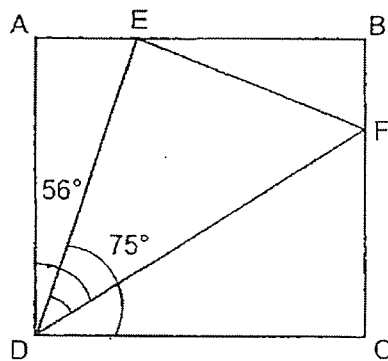
(1) 5.50 a.m.

(2) 8.50 a.m.

(3) 8.10 p.m.

(4) 8.50 p.m.

11. Mr Ling sold 8 sofas and some carpets for \$5928. The sofa cost \$645 each. How much did the carpets cost?
- (1) \$741  
(2) \$768  
(3) \$5160  
(4) \$5283
12. Mandy and William had a total of 1712 stickers at first. After Mandy gave away 92 stickers, William had 5 times as many stickers as Mandy. How many stickers did Mandy have in the end?
- (1) 270  
(2) 324  
(3) 362  
(4) 1350
13. ABCD is a square.  $\angle ADF = 56^\circ$  and  $\angle EDC = 75^\circ$ .



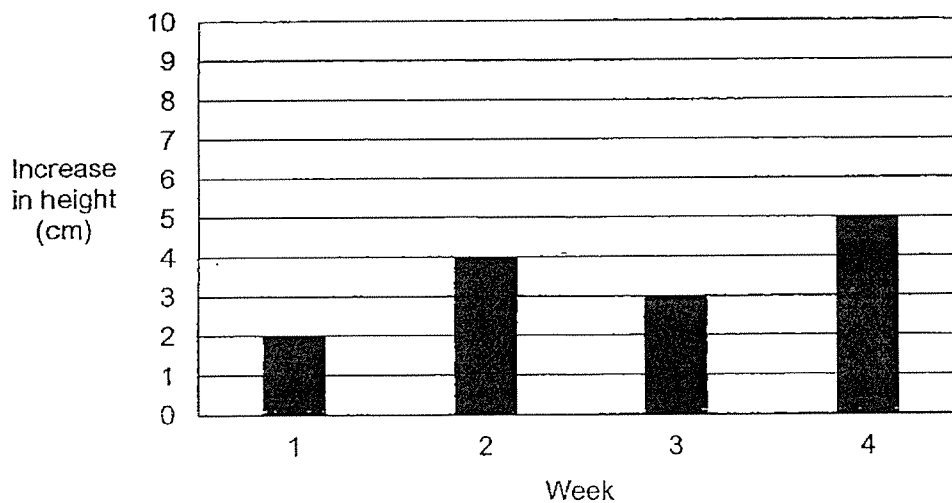
Find  $\angle EDF$ .

- (1)  $15^\circ$   
(2)  $19^\circ$   
(3)  $34^\circ$   
(4)  $41^\circ$

14. Jerry bought 3 apples and 1 orange. The cost of 3 apples was \$5.25. An apple cost \$0.60 less than an orange. What was the cost of an orange?

- (1) \$1.15
- (2) \$1.75
- (3) \$2.35
- (4) \$4.65

15. The original height of a plant was recorded at the start of week 1. The bar graph shows the increase in the height of the plant at the end of each week. The height of the plant was 22 cm by the end of week 4.



What was the height of the plant by the end of week 2?

- (1) 10 cm
- (2) 14 cm
- (3) 18 cm
- (4) 28 cm



**B**

**PEI CHUN PUBLIC SCHOOL**  
**End-of-Year Examination, 2023**

**MATHEMATICS**  
**PRIMARY 4**

**BOOKLET B**

**Total Time For Booklets A & B : 1 h 45 min**

Name : \_\_\_\_\_ (    )

Class : Primary 4 / \_\_\_\_\_

Date : 30 October 2023

Maths Teacher: \_\_\_\_\_

Parent's Signature: \_\_\_\_\_

Booklet A	30
Booklet B	70
TOTAL	100

**INSTRUCTIONS TO CANDIDATES**

DO NOT TURN OVER THIS PAGE UNTIL YOU ARE TOLD TO DO SO.

FOLLOW ALL INSTRUCTIONS CAREFULLY.

ANSWER ALL QUESTIONS.

SHOW YOUR WORKING CLEARLY AS MARKS ARE AWARDED FOR CORRECT WORKING.

Questions 16 to 35 carry 2 marks each. Show your working clearly in the space below each question and write your answers in the spaces provided. For questions which require units, give your answers in the units stated. (40 marks)

Do not write  
in this space

16. What number is 100 more than 9997?

Answer : \_\_\_\_\_

17. Two factors of 21 are 1 and 21. What are the other two factors of 21?

Answer : \_\_\_\_\_

18. Write  $3\frac{5}{8}$  as an improper fraction.

Answer : \_\_\_\_\_

19. Find the value of  $\frac{7}{9} - \frac{2}{3}$ .

Answer : \_\_\_\_\_

20. Round 78.55 to the nearest whole number.

Answer : \_\_\_\_\_

SCORE

--

21. Arrange the following fractions from the smallest to the greatest.

$$\frac{5}{6}, \quad \frac{5}{12}, \quad \frac{11}{12}$$

Answer : \_\_\_\_\_ , \_\_\_\_\_ , \_\_\_\_\_  
(smallest)


22.  $26.92 + 0.58 =$  \_\_\_\_\_.

Answer : \_\_\_\_\_

23. Find the value of  $8.26 \times 9$ .

Answer : \_\_\_\_\_

24. In the figure, ABCD is a rectangle. Find the value of  $\angle y$ .



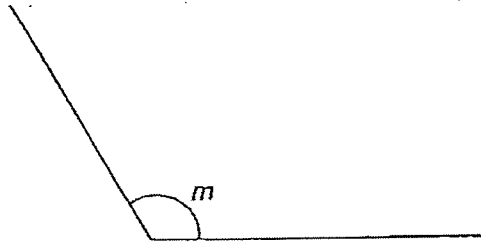
Answer : \_\_\_\_\_ °

Do not  
write in  
this space.

SCORE

25. (a) Measure and write down the size of  $\angle m$ .

Do not  
write in  
this space.



Answer : \_\_\_\_\_°

- (b) Draw  $\angle ABC = 83^\circ$ . Line AB is given.



26. (a) State the time 36 min before midnight using the 24-hour clock.

Answer : \_\_\_\_\_

- (b) What is the duration from 10 35 to 13 08?

Answer : \_\_\_\_\_ h \_\_\_\_\_ min

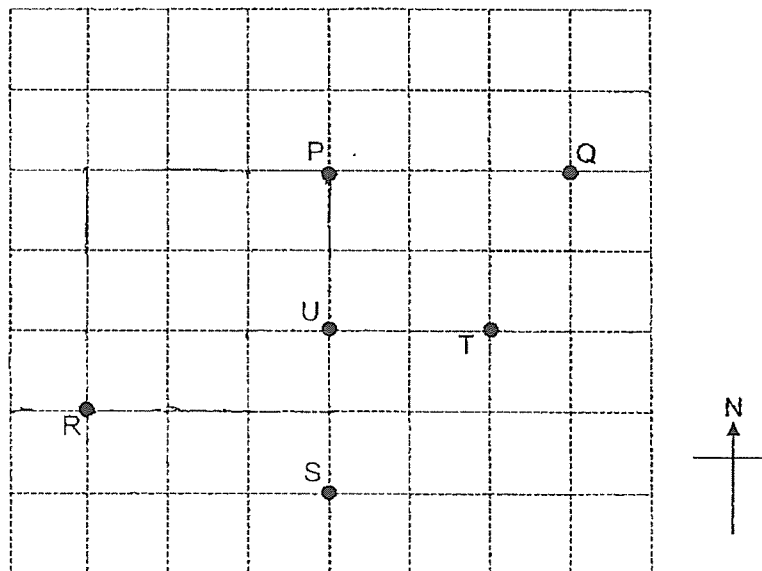
SCORE

27. The perimeter of a square is 36 m. What is the area of the square?

Do not  
write in  
this space.

Answer : \_\_\_\_\_ m<sup>2</sup>

28. Six landmarks on a map of a district are shown in the square grid below.



- (a) Which landmark is north-east of R and north of S?

Answer: (a) \_\_\_\_\_

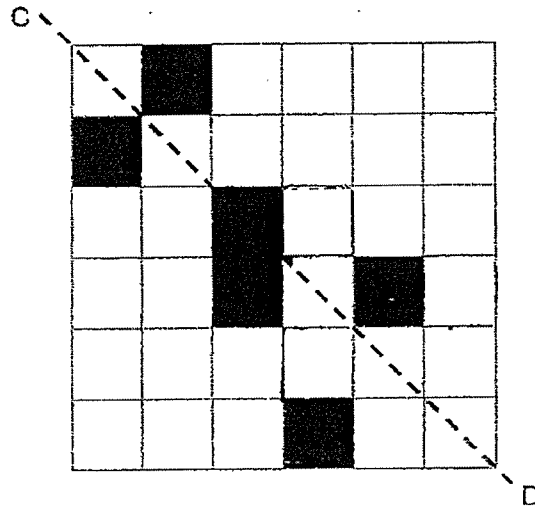
- (b) Parvati is at one of the landmarks. She is facing U and needs to turn 45° clockwise to face P. Which landmark is Parvati at?

(b) \_\_\_\_\_

SCORE

29. Shade three more squares in the figure below so that CD is the line of symmetry.

Do not  
write in  
this space.



30. Rashid and Wen Long cycled a total distance of 8.34 km. Rashid cycled 3 times as far as Wen Long did. How far did Wen Long cycle? Give your answer correct to 2 decimal places.

Answer : \_\_\_\_\_ km

31. Siva had some money. She bought 7 books for \$8.65 and had \$7.45 left. How much money did Siva have at first?

Answer : \$ \_\_\_\_\_

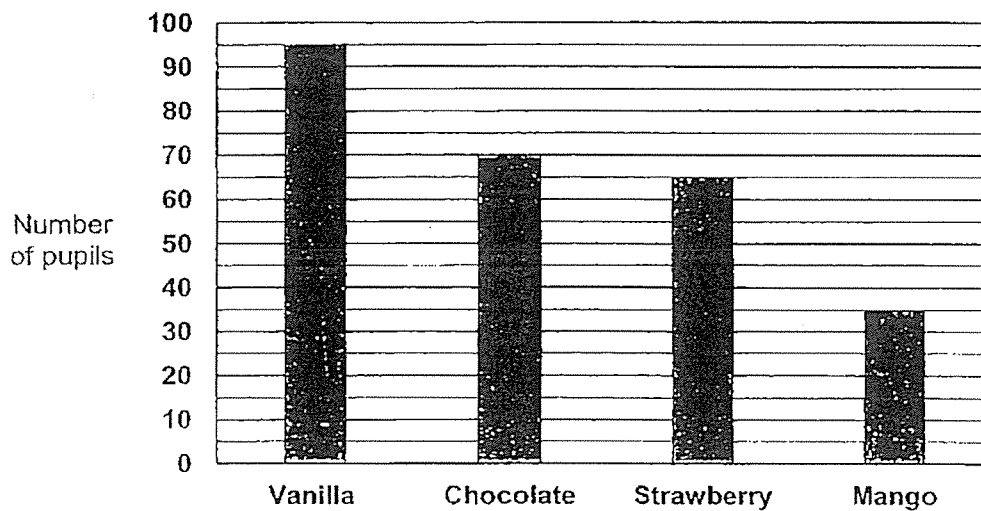
SCORE

32. Mrs Chan had 5 ℓ of orange juice. Her daughter drank  $\frac{3}{5}$  ℓ of it.  
How much orange juice had Mrs Chan left?

Do not  
write in  
this space.

Answer : \_\_\_\_\_ ℓ

33. Some pupils joined a survey to indicate their favourite ice-cream flavour.  
The bar graph below shows the results of the survey.



What was the total number of pupils who joined the survey?

Answer : \_\_\_\_\_

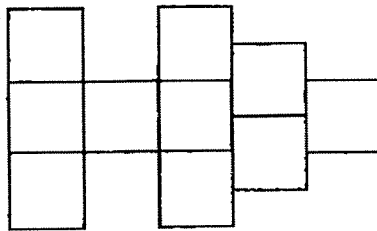
SCORE

34. At first, Mei Hua had \$48 less than Celeste. Mei Hua then gave \$36 to Celeste. How much **more** money did Celeste have than Mei Hua in the end?

Do not  
write in  
this space.

Answer : \$ \_\_\_\_\_

35. The figure is made up of 10 identical squares. The area of each square is  $49 \text{ cm}^2$ . What is the perimeter of the figure?



Answer : \_\_\_\_\_ cm

SCORE



For questions 36 to 43, show your working clearly and write your answers in the spaces provided. The number of marks available is shown in brackets [ ] at the end of each question or part-question. (30 marks)

Do not  
write in  
this space.

36. The table below shows the ticket prices to an amusement park during the weekdays and weekends.

Type of Tickets	Weekdays	Weekend
Adult	\$14.50 per ticket	\$31 for 2 tickets
Child below 12 years old	\$6.90 per ticket	\$8.90 per ticket

- (a) Mr Omar took his child, Suresh, to the park on Monday.  
Suresh was 6 years old. How much did Mr Omar pay for their tickets?

Answer : (a) \_\_\_\_\_ [1]

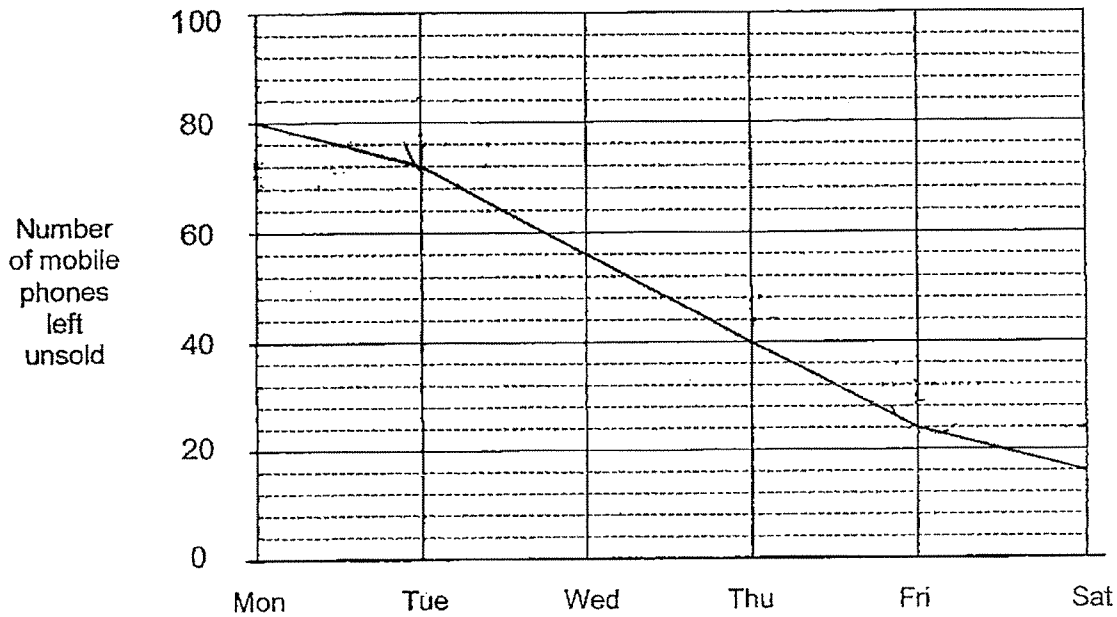
- (b) On Saturday, Mr and Mrs Johnson took their 3 children to the park.  
Their eldest child was 11 years old.  
How much did Mr Johnson pay for their tickets?

Answer : (b) \_\_\_\_\_ [2]

SCORE

37. Shop Mobile had 80 mobile phones on Monday and started selling the mobile phones from Tuesday to Friday. The graph below shows the number of mobiles phones left unsold at the end of each day.

Do not  
write in  
this space.



- (a) How many mobile phones were sold on Tuesday?

Answer : (a) \_\_\_\_\_ [1]

- (b) By which day did Shop Mobile sell  $\frac{7}{10}$  of the mobile phones?

Answer : (b) \_\_\_\_\_ [2]

SCORE

38. At a school activity, one teacher was needed to guide at most 8 pupils in a group. A total of 125 girls and 386 boys participated in the activity. The last group had fewer than 8 pupils.

Do not  
write in  
this space.

- (a) What was the least number of teachers needed to guide all the pupils?

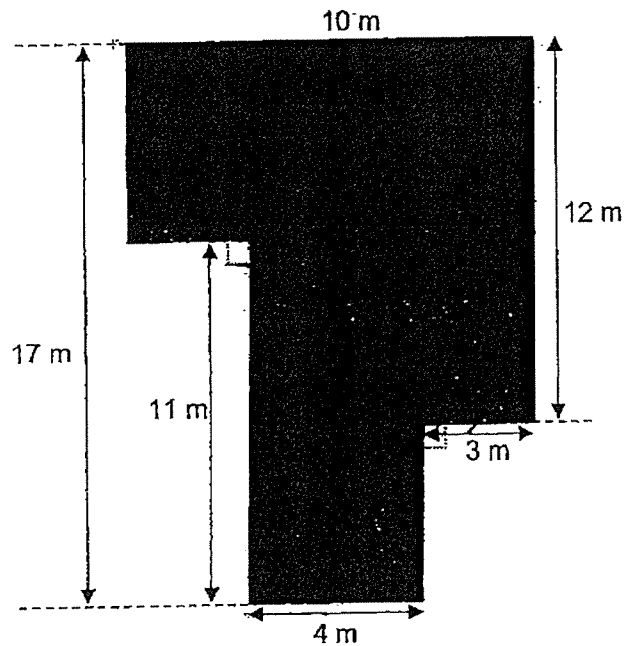
Answer : (a) \_\_\_\_\_ [3]

- (b) How many pupils were there in the last group?

Answer : (b) \_\_\_\_\_ [1]

SCORE

39. The shaded figure (not drawn to scale) below is made up of rectangles.



- (a) Find the area of the shaded figure.

Answer : (a) \_\_\_\_\_ [2]

- (b) Find the perimeter of the shaded figure.

Answer : (b) \_\_\_\_\_ [2]

Do not  
write in  
this space.

SCORE

40. There are 36 pupils in a class. There are 12 boys in the class.

- (a) What fraction of the class are girls?  
Express your answer in the simplest form.

Do not  
write in  
this space.

Answer : (a) \_\_\_\_\_ [2]

- (b)  $\frac{4}{9}$  of the pupils in the class wear spectacles.  
How many pupils **do not** wear spectacles?

Answer : (a) \_\_\_\_\_ [2]

41. An exercise book cost 4 times as much as a pencil.  
Paul paid \$7.56 for 3 pencils and 1 exercise book.

(a) What was the cost of 1 pencil?

Do not  
write in  
this space.

Answer : (a) \_\_\_\_\_ [2]

(b) What was the cost of 1 exercise book?

Answer : (b) \_\_\_\_\_ [2]

SCORE

42. Mrs Koh had 90 candies and 72 jellies. She packed all of them into as many bags as possible. Each bag contained an equal number of candies. The total number of candies and sweets in each bag was also the same.

Do not  
write in  
this space.

- (a) How many bags of candies and jellies did Mrs Koh pack?

Answer : (a) \_\_\_\_\_ [2]

- (b) What was the total number of candies and jellies in each bag?

Answer : (b) \_\_\_\_\_ [2]

SCORE

43. Mike bought 5 pens and 2 erasers. Kelly bought 2 pens and 5 erasers. Mike paid \$2.40 more than Kelly. An eraser cost \$0.95.

Do not  
write in  
this space.

- (a) How much **more** does a pen cost than an eraser?

Answer : (a) \_\_\_\_\_ [2]

- (b) What was the cost of a pen?

Answer : (b) \_\_\_\_\_ [2]

---

End of Paper

SCORE




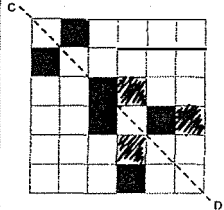
**SCHOOL :** PEI CHUN PUBLIC SCHOOL  
**LEVEL :** PRIMARY 4  
**SUBJECT :** MATHEMATICS  
**TERM :** 2023 SA2

**BOOKLET A**

Q1	3	Q2	3	Q3	2	Q4	3	Q5	2
Q6	1	Q7	3	Q8	4	Q9	1	Q10	2
Q11	2	Q12	1	Q13	4	Q14	3	Q15	2

**BOOKLET B**

Q16	10097
Q17	7 and 3
Q18	$\frac{29}{8}$
Q19	$\frac{1}{9}$
Q20	79
Q21	$\frac{3}{5}$ , $\frac{3}{5}$ , $\frac{3}{5}$
Q22	27.50
Q23	74.34
Q24	18
Q25a	121°
Q25b	
Q26	a) 2324      b) 2 hr 33 min
Q27	$36 \div 4 = 9$ $9 \times 9 = 81 \text{ m}^2$
Q28	a) P      b) T

Q29	
Q30	$4u = 8.34 \text{ km}$ $1u = 2.085 \text{ km} \approx \mathbf{2.09 \text{ km}}$
Q31	$\$8.65 + \$7.45 = \mathbf{\$16.10}$
Q32	$5 \ell - \frac{3}{5} \ell = \mathbf{4\frac{2}{5} \ell}$
Q33	$95 + 70 + 65 + 35 = \mathbf{265}$
Q34	$48 + (36 \times 2) = \mathbf{120}$
Q35	$20 \times 7 = \mathbf{140 \text{ cm}}$
Q36a	$\$14.50 + \$6.90 = \mathbf{\$21.40}$
Q36b	$\$31 + (\$8.90 \times 3) = \mathbf{\$57.70}$
Q37a	$80 - 72 = \mathbf{8}$
Q37b	$10u = 80$ $1u = 8$ $7u = 56$ $80 - 56 = \mathbf{24}$
Q38a	No. of pupils = $386 + 125 = 511$ $511 \div 8 = 63 \text{ R } 7$ $63 + 1 = \mathbf{64}$
Q38b	$7$
Q39a	Area A = $6 \times 10 = 60 \text{ m}^2$ Area B = $3 \times 6 = 18 \text{ m}^2$ Area C = $4 \times 11 = 44 \text{ m}^2$ Total area = $60 + 18 + 44 = \mathbf{122 \text{ m}^2}$
Q39b	$10 + 12 + 3 + 5 + 4 + 11 + 3 + 6 = \mathbf{54 \text{ m}}$
Q40a	No. of girls = $36 - 12 = 24$ Fraction = $\frac{\text{No. of girls}}{\text{Total pupils}} = \frac{24}{36} = \mathbf{\frac{2}{3}}$
Q40b	Do not wear spectacles = $\frac{9}{9} - \frac{4}{9} = \mathbf{\frac{5}{9}}$ $5 \times 4 = \mathbf{20}$
Q41a	$1 \text{ book} = 4 \text{ pencils}$ 7 pencils cost $\$7.56$ $1 \text{ pencil} = \$7.56 \div 7 = \mathbf{\$1.08}$

Q41b	$\$1.08 \times 4 = \mathbf{\$4.32}$
Q42a	Common factors of 90 and 72 = 1, 2, 3, 6, 9, <b>18</b> Ans is the greatest common factor because she packed them into as MANY bags as possible
Q42b	$5 + 4 = \mathbf{9}$
Q43a	3 erasers = $3 \times \$0.95 = \$2.85$ 3 pens = $\$2.85 + \$2.40 = \$5.25$ 1 pen = $\$5.25 \div 3 = \$1.75$ $\$1.75 - \$0.95 = \mathbf{\$0.80}$
Q43b	$\$0.80 + \$0.95 = \mathbf{\$1.75}$

