



**RAFFLES GIRLS' PRIMARY SCHOOL**  
**Primary Two Mathematics**  
**Revision**

**Addition and Subtraction within 1000**

Name: \_\_\_\_\_ (     )

Date: \_\_\_\_\_

Class: P 2 (     )

**SECTION A**

For each question, four options are given. Choose the correct answer and write its number (1, 2, 3 or 4) in the brackets provided.

1.  $231 + 57 =$  \_\_\_\_\_

(1) 226

(2) 282

(3) 288

(4) 298

(     )

2.  $467 + 28 =$  \_\_\_\_\_

(1) 439

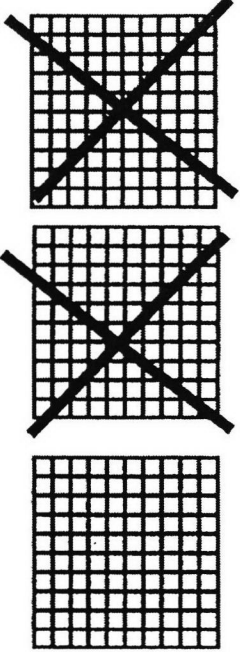


(2) 495

(3) 496

(4) 747

(     )

3. Look at the picture. Choose the correct subtraction equation.

Hundreds	Tens	Ones
		

(1)  $333 - 234 = 99$

(2)  $353 - 134 = 219$

(3)  $387 - 234 = 153$







(4)  $387 - 143 = 244$

( )

## Section B

Read the questions carefully. Write the correct answers in the spaces provided.

4. (a) Write down the value of the second number.

	Hundreds	Tens	Ones
first number (157)			
second number (     )			

- (b) Based on the diagram above, complete the **addition** equation below using the first and second numbers.

$$157 \bigcirc \boxed{\phantom{000}} = \boxed{\phantom{000}}$$

5. Find the value of  $\triangle$  .

$$\heartsuit + \heartsuit = 80$$

$$\heartsuit + \triangle = 278$$

$$\triangle = \underline{\hspace{2cm}}$$

Have you checked your work?

SCHOOL : RAFFLES GIRLS' PRIMARY SCHOOL

LEVEL : PRIMARY 2

SUBJECT : MATH

TERM :

---

BOOKLET A

Q 1	Q2	Q3
3	2	3

BOOKLET B

4)second 321

$$157 + 321 = 478$$

5)  $278 - 40 = 238$

