

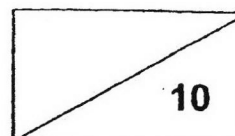
**CATHOLIC HIGH SCHOOL
MATHEMATICS
PRIMARY TWO
AMODES : CHECKPOINT 1**

NAME : _____

DATE : _____


CLASS : _____

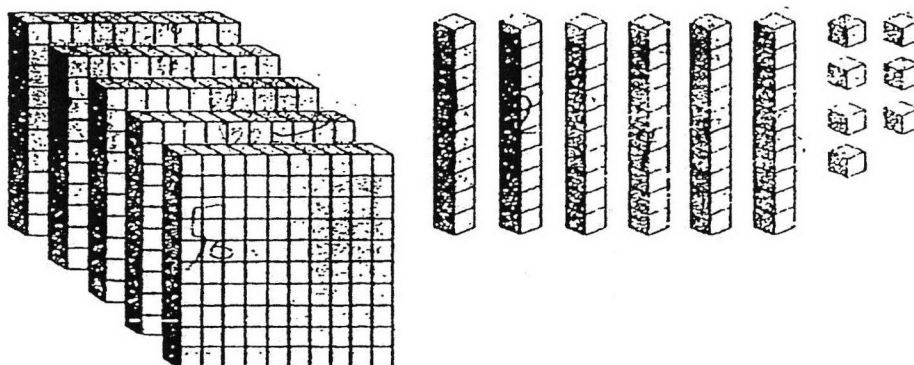
PARENT'S SIGNATURE : _____



Section A

Questions 1 to 4 carry 1 mark each. For each question, four options are given. One of them is the correct answer. Make your choice 1, 2, 3 or 4 and write your choice in the bracket provided. All diagrams are not drawn to scale. (4 marks)

1. How many  are there?



- (1) 467
(2) 557
(3) 567
(4) 657

()

2. In 867, the value of the digit 6 is ?

(1) 6

(2) 60

(3) 67

(4) 600

()

3. Which one of the following numbers is an odd number?

(1) 217

(2) 384

(3) 478

(4) 580

()

4. $367 + 231 =$?

(1) 498

(2) 588

(3) 597

(4) 598

()

Section B

Do not write
in this space

Questions 5 to 7 carry 2 marks each. Show your working clearly and write your answers in the spaces provided. For questions which require units, give your answers in the units stated. All diagrams are not drawn to scale. (6 marks)

5. Arrange the numbers from the smallest to the greatest.

781, 871, 718

Ans: _____ , _____ , _____
smallest

6. Look at the number pattern below and complete the pattern.

830, 820, 810, 800, ?, 780, 770, 760

Ans: _____

7. Subtract 68 from 908.

Ans: _____

END OF PAPER

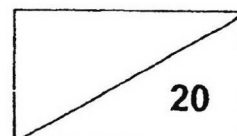
**CATHOLIC HIGH SCHOOL
MATHEMATICS
PRIMARY TWO
AMODES : CHECKPOINT 2**

NAME : _____

DATE : _____

CLASS : _____


PARENT'S SIGNATURE : _____



Section A

Questions 1 to 4 carry 1 mark each. For each question, four options are given. One of them is the correct answer. Make your choice (1, 2, 3 or 4). Write your answer in the brackets provided. All diagrams are not drawn to scale. (4 marks)

1. Look at the diagram below.



The tree is about _____ tall.

- (1) 1 m
- (2) 3 m
- (3) 3 cm
- (4) 30 m

()

2. $761 + 124 =$ _____

(1) 637


(2) 643

(3) 885

(4) 895

()

3. Study the diagram below.



Which equation below best describes the diagram above?

(1) 3×5

(2) $5 + 3$

(3) $5 \div 3$

(4) $3 - 5$

()

4. $4 \times$ _____ $= 32$

(1) 6

(2) 8

(3) 9


(4) 28

()

Section BDo not write
in this space

Questions 5 to 8 carry 2 marks each. Show your working clearly and write your answers in the spaces provided. For questions which require units, give your answers in the units stated. All diagrams are not drawn to scale. (8 marks)

5. Circle 8 groups of 3 balls.



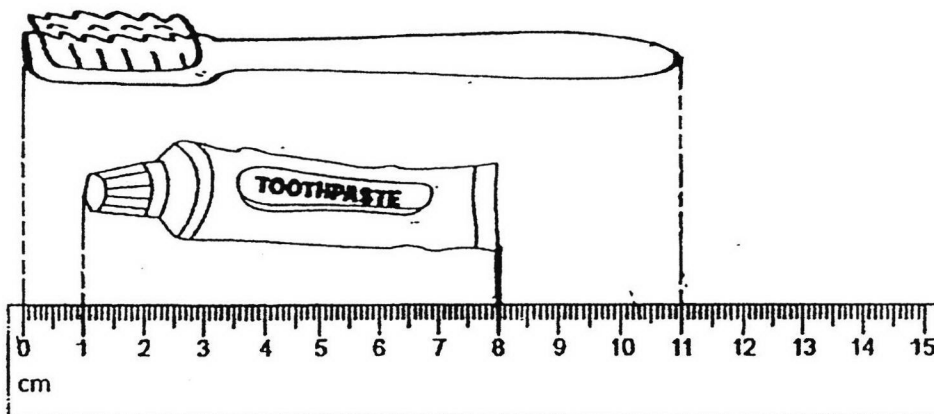
6. Look at the number pattern below and complete the pattern.

927, 922, 917, _____, 907, 902, 897

Ans: _____

Study the diagram below. Answer questions 7 and 8 based on the scale given.

Do not write
in this space



7. How long is the tube of toothpaste?

Ans: _____ cm

8. How much longer is the toothbrush than the tube of toothpaste?

Ans: _____ cm

SECTION C

Do not write
in this space

For Questions 9 to 10, show your working clearly and write your answers in the spaces provided. (2 x 4 marks)


9. 372 people visited a carnival on Friday.
29 fewer people visited the carnival on Saturday than on Friday.

a) How many people visited the carnival on Saturday?

_____ people visited the carnival on Saturday.

b) How many people visited the carnival on Friday and Saturday altogether?

_____ people visited the carnival on Saturday and Friday altogether.



10. Anne has 18 pencils. She has 2 times as many pencils as Ben.


Do not write
in this space

a) How many pencils does Ben have?

Ben has _____ pencils.

b) How many pencils do they have altogether?

They have _____ pencils altogether.



END OF PAPER

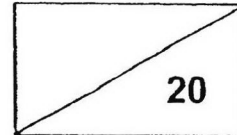
**CATHOLIC HIGH SCHOOL
MATHEMATICS
PRIMARY TWO
AMODES : CHECKPOINT 3**

NAME : _____

DATE : _____

CLASS : _____


PARENT'S SIGNATURE : _____



Section A

Questions 1 to 3 carry 1 mark each. For each question, four options are given. One of them is the correct answer. Make your choice 1, 2, 3 or 4 and write your choice in the bracket provided. All diagrams are not drawn to scale. (3 marks)

1. What is the mass of the packet of milk?

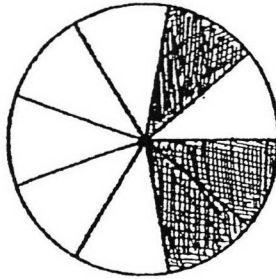


- (1) 350 g
- (2) 360 g
- (3) 370 g
- (4) 380 g

()

2. The following figure is made up of equal parts.

What fraction of the figure is not shaded?



(1) $\frac{3}{6}$

(2) $\frac{6}{6}$

(3) $\frac{3}{9}$

(4) $\frac{6}{9}$

()

-
3. Which of the following fractions is the smallest?

(1) $\frac{1}{10}$

(2) $\frac{5}{10}$

(3) $\frac{3}{10}$

(4) $\frac{8}{10}$

()

Section BDo not write
in this space

Questions 4 to 7 carry 2 marks each. Show your working clearly and write your answers in the spaces provided. For questions which require units, give your answers in the units stated. All diagrams are not drawn to scale. (8 marks)

4. $\frac{3}{11} + \frac{7}{11} =$ _____

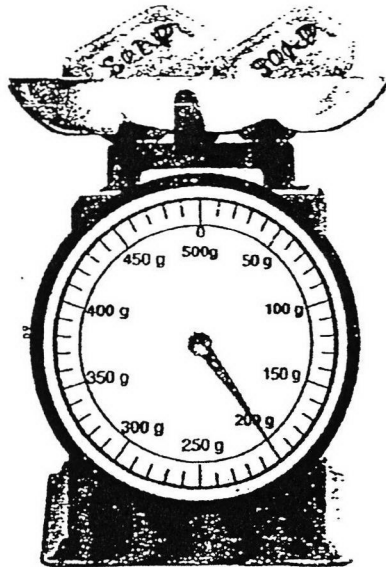
Ans: _____

- 5 Arrange the following fractions in order.
Begin with the greatest fraction.

$$\frac{1}{8}, \frac{1}{3}, \frac{1}{5}$$

Ans: _____, _____, _____
greatest

6.

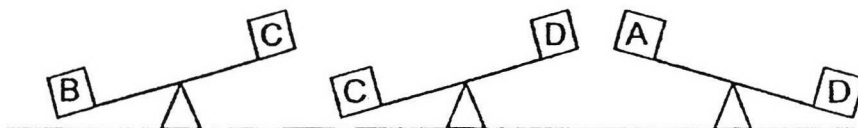


Do not write
in this space

Two identical bars of soap are placed on the kitchen scale.
Find the mass of each bar of soap.

Ans: _____ g

7. Look at the diagram below. Box A, B, C and D are placed on balances.



Which box is the lightest?

Ans: _____


SECTION C

For Questions 8 to 10, show your working clearly and write your answers in the spaces provided. (9 marks)

Do not write
in this space

8. There are a total of 40 pupils in a class.
There are 23 boys in the class.
How many more boys than girls are there in the class?


There are _____ more boys than girls in the class.



9. Bag A has a mass of 8 kg.
Bag B is twice as heavy as Bag A.
What is the total mass of the two bags?

Do not write
in this space


The total mass of the two bags is _____ kg.



10. Jane has 398 stickers.
May has 147 more stickers than Jane.
How many stickers do they have altogether?

Do not write
in this space

They have _____ stickers altogether.



END OF PAPER

ANSWER KEY

LEVEL : PRIMARY 2
SCHOOL : CATHOLIC HIGH SCHOOL
SUBJECT : MATHEMATICS

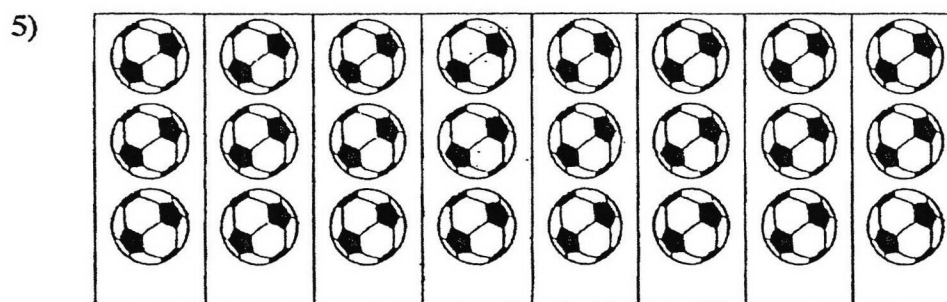
AMODES : CHECKPOINT 1

Q1	Q2	Q3	Q4
3	2	1	4

- 5) 718 , 781 . 871
6) 790
7) 840

AMODES : CHECKPOINT 2

Q1	Q2	Q3	Q4
2	3	1	2



- 6) 912
7) 7 cm
8) 4 cm
9) (a) $372 - 29 = 343$
343 people visited the carnival on Saturday.
(b) $372 + 343 = 715$
715 people visited the carnival on Saturday and Friday altogether

- 10) a) $18 \div 2 = 9$
Ben has 9 pencils.
- b) $18 + 9 = 27$
They have 27 pencils altogether.

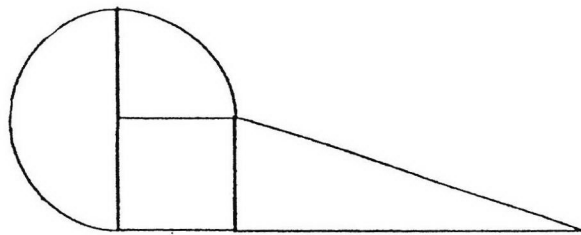
CLASS TEST 3

Section A

Q1	Q2	Q3	Q4	Q5
3	2	4	1	3

Section B

- 6) 12 cm
 7) \$122.65
 8) 3 kg
 9) bangle and ring
 10)



- 11) \$91

Section C

- 12) $160 - 65 = 95$
 $95 + 160 = 255$
 Their total height is 255 cm.
- 13) $189 - 57 = 132$
 $132 + 48 = 180$
 Miss Devi bought 180 apples at first.

