

**Nanyang Primary School**  
**Primary 1**  
**Mathematics**  
**Combined Topical Test 2**

Name: \_\_\_\_\_ (     )

Class: Primary 1 (     )

Date: 3 May 2018

Parent's Signature: \_\_\_\_\_

Duration: 45 minutes

|        |
|--------|
| Marks: |
| /30    |

Any query on marks awarded should be raised by **17 May 2018**.  
 We seek your understanding in this matter as any delay in the  
 confirmation of marks will lead to delays in the generation of  
 results.

**Section A**

Questions 1 to 8 carry 1 mark each.

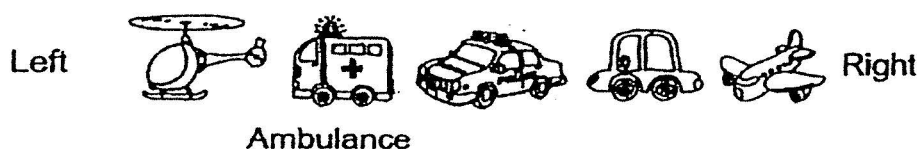
For each question, four options are given.

One of them is the correct answer.

Make your choice (1, 2, 3 or 4) and write your answer (1, 2, 3 or 4)  
 in the bracket (     ) provided.

(8 marks)

1. Look at the pictures below.



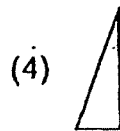
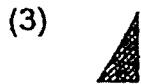
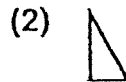
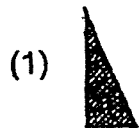
What is the position of the ambulance from the right?

- |         |                 |
|---------|-----------------|
| (1) 5th | (2) 2nd         |
| (3) 3rd | (4) 4th (     ) |

2. Study the pattern below.

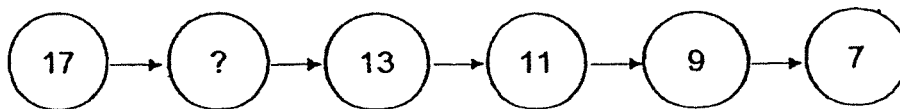


What is the next shape in the pattern?



( )

3. Look at the number pattern below.



What is the missing number in the circle?

(1) 14

(2) 15

(3) 16

(4) 19

( )

4. Which two numbers have a sum of 18?

(1) 4 and 7

(2) 6 and 8

(3) 5 and 7

(4) 9 and 9

( )

5. Look at the number cards below.

16

7

?

12

The missing number is the greatest.  
What is the missing number?

(1) 18

(2) 15

(3) 9

(4) 4

( )

6. What is the missing number?

$$10 - 7 = \boxed{?}$$

(1) 17

(2) 2

(3) 3

(4) 8

( )

7. What is 3 less than 11?



(1) 14


(2) 12

(3) 8

(4) 4

( )

8. There are 9 children singing in the hall.  
4 of them are boys.  
How many girls are there?



(1) 5  
(3) 13

(2) 6  
(4) 14

(       )

**Section B**


Questions 9 to 13 carry 2 marks each.

Show your working clearly and write your answers in the spaces provided.

For questions which require units, give your answers in the units stated.

(10 marks)

9. Look at the biscuit below.



What is the shape of the biscuit?

Tick (✓) the correct shape in one of the boxes below.

square

triangle

circle

☐☐☐


10. a) Write eleven in numeral.

\_\_\_\_\_



- b) Write 15 in words.

\_\_\_\_\_


11. a) Write one addition equation for the picture.



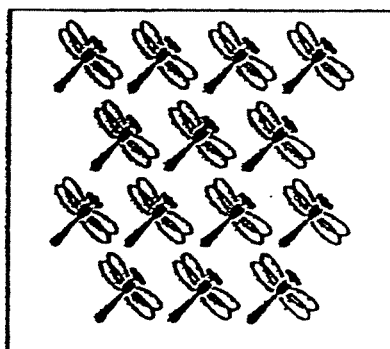
- b) Write one subtraction equation for the picture.



12.



Set A



Set B

How many more dragonflies are there in Set B than in Set A?

Answer : \_\_\_\_\_

13. At a library, Devi is in the 4th position in the queue to borrow a book.  
There are 5 people behind her.  
How many people are there in the queue?

Answer : \_\_\_\_\_

### Section C

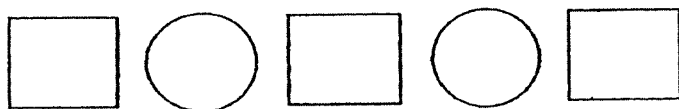

For questions 14 to 17, show your working clearly and write your answers in the spaces provided.

Only use numbers from each question to write your equation.

The number of marks available is shown in brackets [ ] at the end of each question or part-question.

(12 marks)

14. There are 13 carrots in Garden A.  
There are 5 carrots in Garden B.  
How many carrots are there altogether in the two gardens?





There are \_\_\_\_\_ carrots altogether in the two gardens.

[3]





15. Lilian has 14 flowers at first.  
Her mother gives her another 6 flowers.  
How many flowers does she have altogether now?



She has \_\_\_\_\_ flowers altogether now.

[3]

16. All the ants were on a plate at first.  
 Soon, 11 ants crawled away to look for food.  
 Then, there were 4 ants left on the plate.  
 How many ants were there on the plate at first?




There were \_\_\_\_\_ ants on the plate at first.


[3]

17. Li Wen and Deepa have some balls.  
Li Wen has 7 balls.  
Deepa has 2 fewer balls than Li Wen.  
How many balls do they have altogether?

Draw the number of balls (O) each person has in the boxes below.



Li Wen



Deepa

They have \_\_\_\_\_ balls altogether.

[3]

---

⊙ End of Paper ⊙  
Please Check Carefully

www.sgexam.com

**SCHOOL : NANYANG**

**SUBJECT : MATHEMATICS**

**TERM : Combined Topical Test 2**

| Q1 | Q2 | Q3 | Q4 | Q5 | Q6 | Q7 | Q8 |
|----|----|----|----|----|----|----|----|
| 4  | 4  | 2  | 4  | 1  | 3  | 3  | 1  |

**Q9) circle**

**Q10) a) 11**

**b) fifteen**

**Q11) a)  $4 + 4 = 8$**

**b)  $8 - 3 = 5$**


**Q12) 4**


**Q13) 9 people**

**Q14)  $13 + 5 = 18$**

**Q15)  $14 + 6 = 20$**

**Q16)  $11 + 4 = 15$**

Q17) Li Wen : 

Deepa : 

**They have 12 balls altogether.**