



Maha Bodhi School
2022 Topical Review 3
Primary 1 Mathematics

Name: _____ ()

Class: Primary 1 _____


Duration: 30 minutes

Date: _____

Parent's Signature: _____

Write your answers in the spaces provided.

1. Study the picture below.




There are _____ groups of 4 balls.

2. Fill in the blank with the correct answer.

$$2 \times 6 = \underline{\hspace{2cm}}$$

3. $7 + 7 + 7 + 7 + 7 = \underline{\hspace{1cm}}$ sevens

4. There are 16 stamps.
Circle groups of 8.



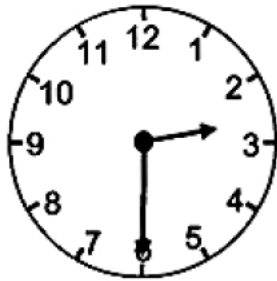
There are _____ groups of 8.

5. Sarah has 15 apples.
She puts an equal number of apples in each bag.



There are _____ apples in each bag.

6. Write the time shown on the clock.



It is _____.

7. Tick (✓) the correct answer 'am' or 'pm' in the box.



Samy had his breakfast at 7.00


am	<input type="checkbox"/>
pm	<input type="checkbox"/>

8. Complete the equation with '+', '-' or '×'.



$$3 \bigcirc 3 = 9$$

9. Sue has 6 packets of sweets. There are 5 sweets in each packet.
How many sweets are there altogether?



Write a multiplication equation to show the answer.

$$\square \times \square = \square$$

10. Mrs Tan bought 20 slices of cake.
She packed 2 slices of cake into each box.
How many boxes did she use?



She used _____ boxes.

11. John has 16 stickers.

He gives the stickers to 4 friends to share equally.

How many stickers does each friend get?



Each friend gets _____ stickers.

12. There are 18 candles on Meiling's birthday cake.

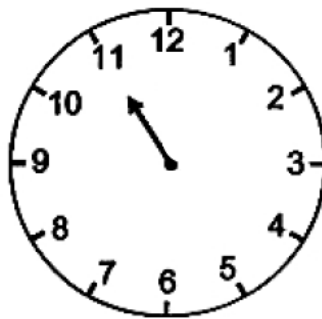
The candles are placed equally in 3 rows.

How many candles are there in each row?



There are _____ candles in each row.

13. Draw the missing minute hand to show 11 o'clock.



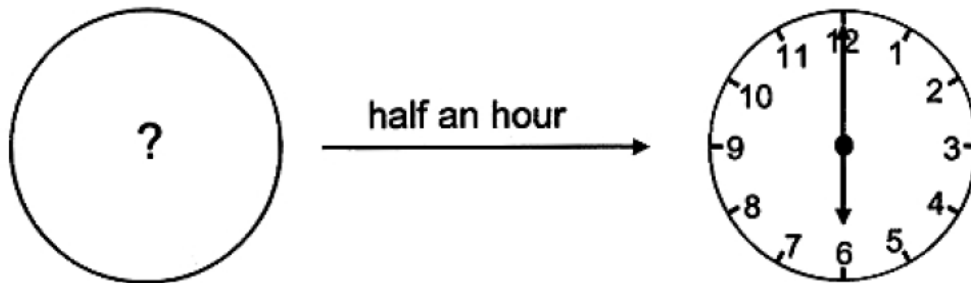
14. Read Lily's daily timetable.

How long does she spend doing her homework?

Time	Activity
2:00 pm to 2:30 pm	Lunch
2:30 pm to 3:45 pm	Shower
3:45 pm to 4:45 pm	Homework
4:45 pm to 5:15 pm	Read

Lily spends _____ doing her homework.

15. Max played at the playground for half an hour.
He stopped playing at 6:00 pm.
At what time did he start playing at the playground?



Max started playing at the playground at _____ .

----- The End -----



Remember to check your work!


SCHOOL : **MAHA BODHI** PRIMARY SCHOOL
LEVEL : **PRIMARY 1**
SUBJECT : **MATH**
TERM : **Review 3 2022**

1) There are 3 groups of 4 balls.

2) $2 \times 6 = 12$

3) $7 + 7 + 7 + 7 + 7 = 5$ sevens

4)



There are 2 groups of 8

5) There are 3 apples in each bag.


6) It is 2 : 30

7) am

8) $3 \times 3 = 9$


9) $6 \times 5 = 30$

10)




She used 10 boxes.

11)



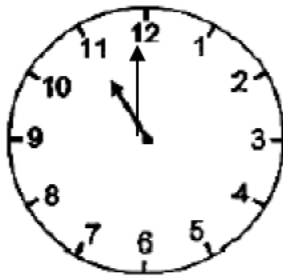
Each friend gets 4 stickers

12)



There are 6 candles in each row.

13)



14) Lily spends 1 hour doing her homework

15) Max started playing at the playground at 5:30pm.

