



**Maha Bodhi School**  
**2022 Topical Review 2**  
**Primary 1 Mathematics**

Name: \_\_\_\_\_ (     )

Class: Primary 1 \_\_\_\_\_

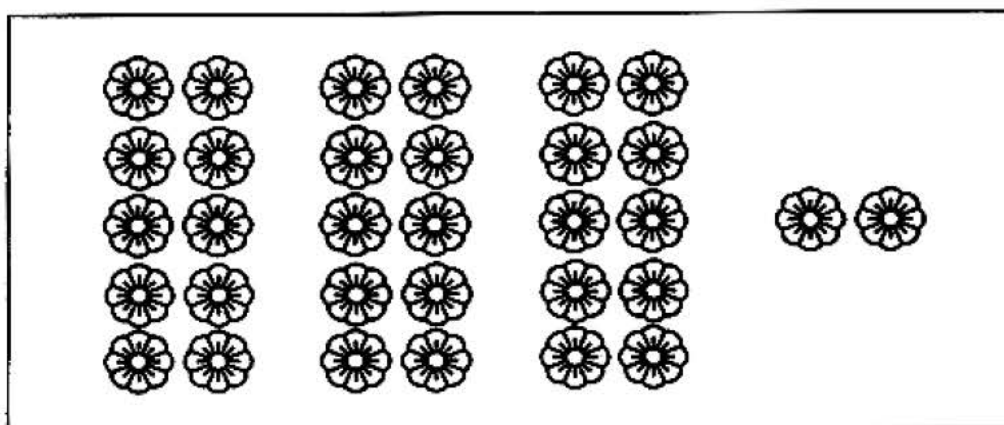
Duration: 30 minutes

Date: \_\_\_\_\_ Parent's Signature: \_\_\_\_\_

---

Write your answers in the spaces provided.

1. Count the flowers in the box below.



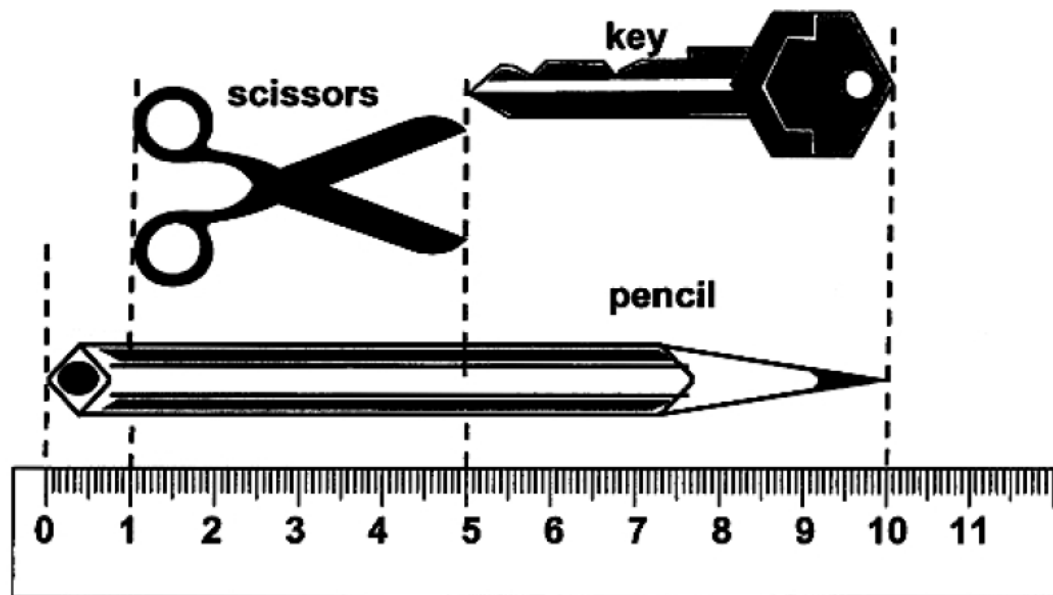
There are  flowers altogether.

2. Write the number in words.

57	
----	--

3.  $6 + 5 + 7 =$

Look at the objects below and answer questions 4 and 5.



4. The pair of scissors is \_\_\_\_\_ cm long.


5. The \_\_\_\_\_ is the longest object.

6. Subtract

	Tens	Ones
	5	0
-	3	1

The picture graph shows the number of animals in a farm.

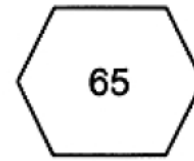
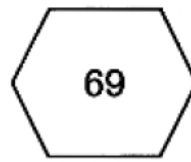
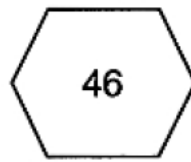
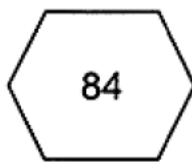
Use it to answer questions 7 and 8.



7. There are  pigs in the farm.

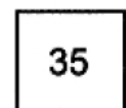
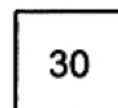

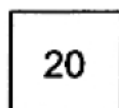
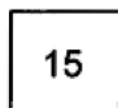

8. There are  fewer cows than ducks.

9. Arrange the numbers in order. Begin with the **biggest** number.



\_\_\_\_\_, \_\_\_\_\_, \_\_\_\_\_, \_\_\_\_\_  
biggest

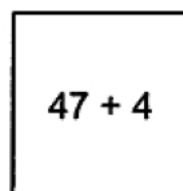
10. Write the missing number in the number pattern below.



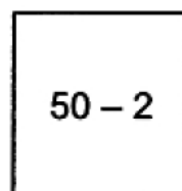
11. Anna and Betty are playing a Math game.

The person with the bigger number as the answer is the winner.

Look at their cards. Who is the winner?



Anna

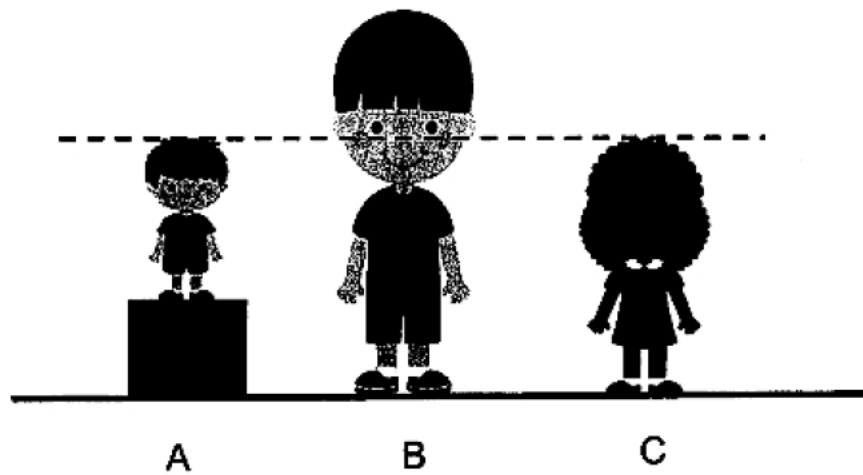


Betty

\_\_\_\_\_ is the winner

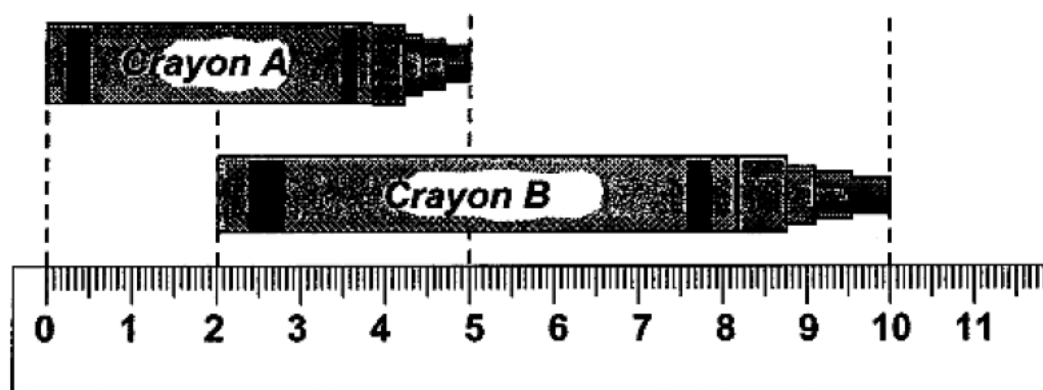
12.  $25 + \boxed{\phantom{000}} = 89$

13. Arrange the people from the tallest to the shortest.



,  ,   
tallest

14.



Crayon B is \_\_\_\_\_ cm longer than Crayon A.

15. James buys 9 toy cars.

Tom buys 25 toy cars.

How many more toy cars does Tom buy than James?

$$\square \bigcirc \square = \square$$

Tom buys \_\_\_\_\_ more toy cars than James.

----- The End -----



***Remember to check your work!***

**SCHOOL : MAHA BODHI PRIMARY SCHOOL**  
**LEVEL : PRIMARY 1**  
**SUBJECT : MATH**  
**TERM : Review 2 2022**

- 1) There are 32 flowers altogether.
- 2) Fifty-seven
- 3)  $6 + 5 + 7 = 18$
- 4) The pair of scissors is 4 cm long.
- 5) The pencil is the longest object.
- 6) 19
- 7) There are 5 pigs in the farm.
- 8) There are 2 fewer cows than ducks.
- 9) 84, 69, 65, 46
- 10) 25
- 11) Anna is the winner
- 12)  $25 + 64 = 89$
- 13) B, C, A
- 14) Crayon B is 3 cm longer than Crayon A.
- 15)  $25 - 9 = 16$

Tom buys 16 more toy cars than James.

