



2022 PRIMARY 1 HOLISTIC ASSESSMENT
MATHEMATICS REVIEW 2

Name: _____ ()

Date: 26 August 2022

Class: Primary 1 ()

Duration: 45 min


Parent's Signature: _____

Marks: _____ / **20**

Read the questions carefully.

Write the answer in the space provided.

1. Count.



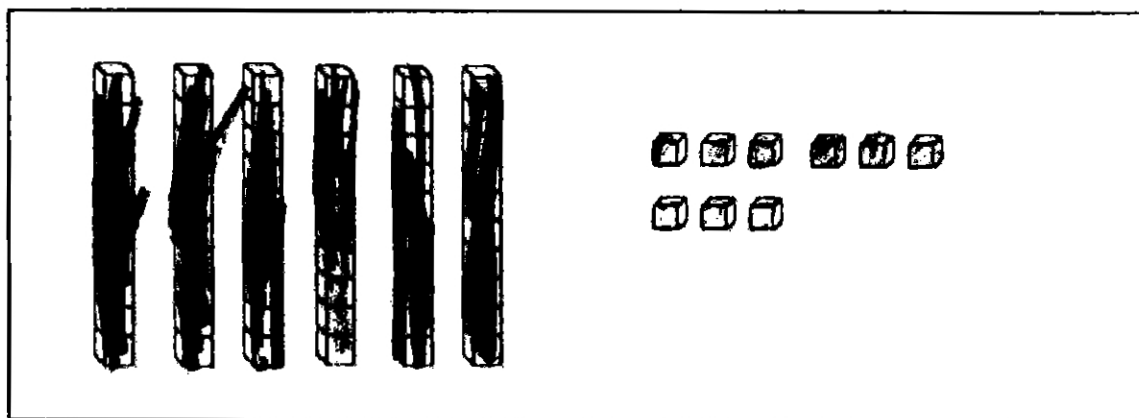
There are

stars.

There are

moons.


2. Look at the cubes below.



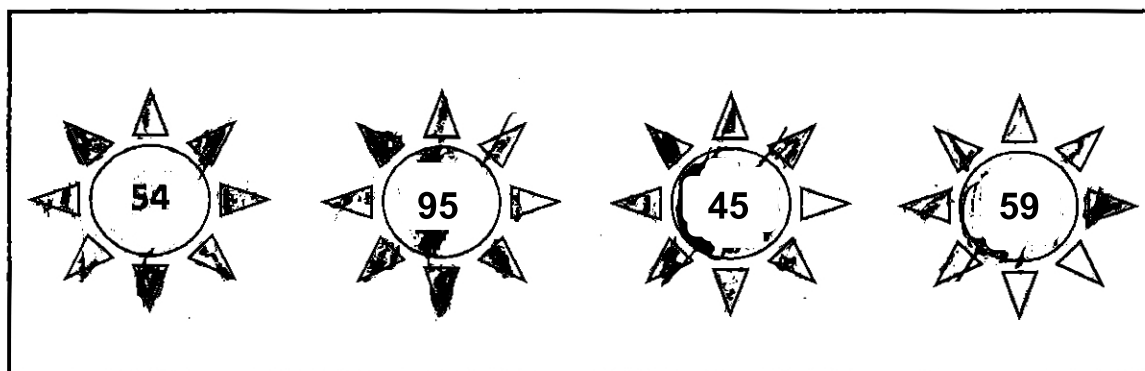
is tens and ones.

3. is smaller than 60 but greater than 58.

4. **Circle** the bear with the **greatest number**.



5. Arrange the numbers below from the **smallest** to the **greatest**.



Smallest

6. Complete the number pattern below.

69, 73, 75, 77, 81, 83

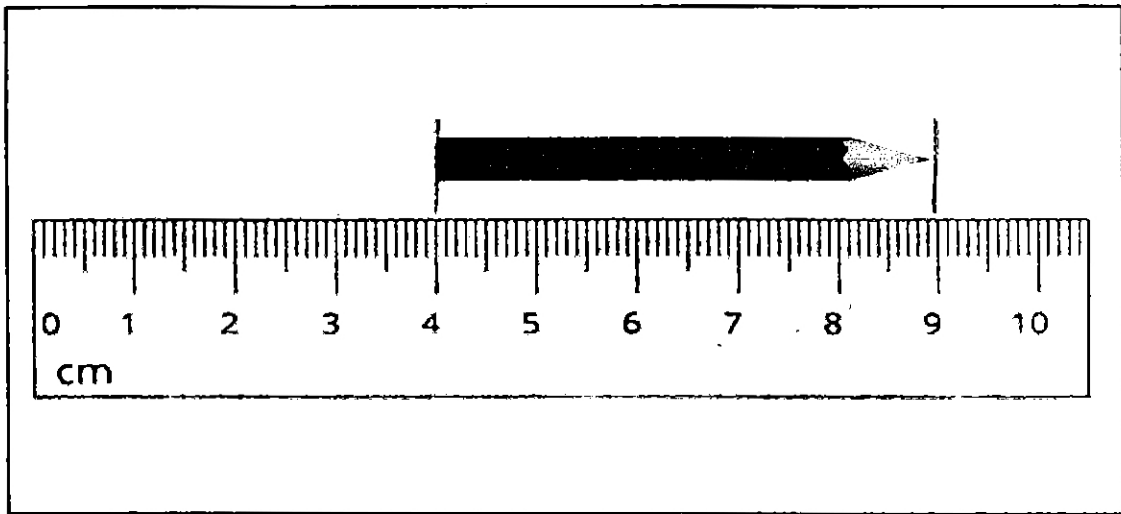
7. $6 + 9 + 7 =$

8. $34 + 25 =$

tens

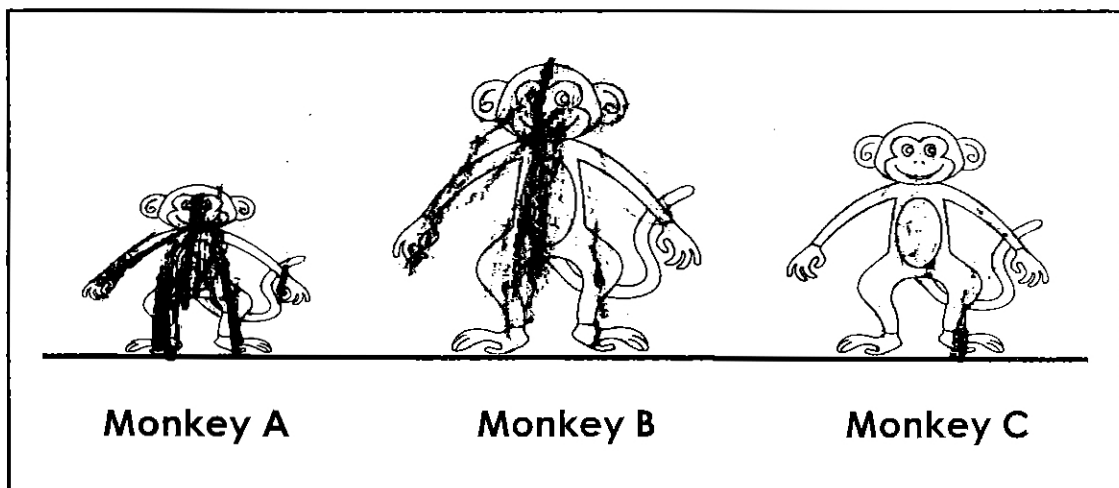
ones

7. Study the picture below carefully.



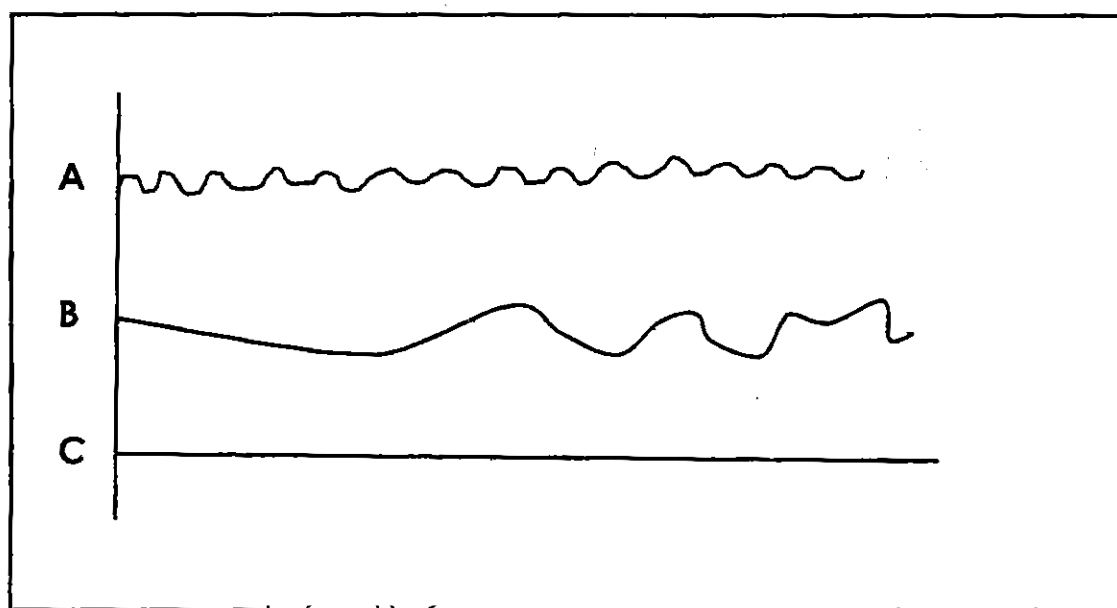
The pencil is cm.

10. Study the picture below carefully and fill in the blanks with "shorter" or "taller".



Monkey C is _____ than Monkey A but
_____ than Monkey B.

11. Study the picture below carefully.



String is the shortest. It is about cm.


12.

$$\text{Apple} + \text{Apple} = 10$$

$$\text{Apple} + \text{Apple} = 20$$

$$\text{Apple} = \boxed{}$$


13. The picture graph below shows the different animals that the students keep as pets.



Each 😊 stands for 1 student

- (a) Most students like to keep as pets.
- (b) The same number of children keep and as pets.

14. The picture graph below shows the favourite fruits of Class 1M.



Each ☆ stands for 1 student.

- (a) There are students in Class 1M.
- (b) fewer children like oranges than mangoes.


15.

$$\begin{array}{r} 39 \\ + 21 \\ \hline \square \square \\ \hline \end{array}$$

16.

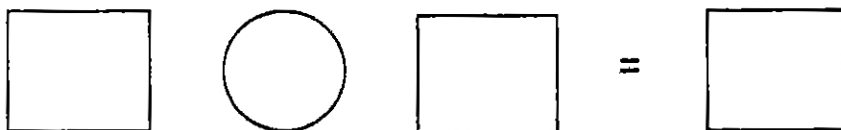
$$\begin{array}{r} 95 \\ - 2\square \\ \hline \square 5 \\ \hline \end{array}$$

17. David has 57 marbles.
His classmate gives him 27 more marbles.
How many marbles does David have now?



David has marbles now.

18. Linda bakes 48 cupcakes.
She bakes 12 cupcakes more than her mother.
How many cupcakes does Linda's mother bake?



Linda's mother bakes cupcakes.

End of Paper

SCHOOL : TAO NAN PRIMARY SCHOOL

LEVEL : PRIMARY 1

SUBJECT : MATH

TERM : REVIEW 2

1)	There are 37 stars. There are 3 moons.
2)	69 is 6 tens and 9 ones
3)	59
4)	96
5)	45, 54, 59, 95
6)	71, 79
7)	22
8)	5, 9
9)	5cm
10)	Monkey C is taller than Monkey A but shorter than Monkey B.
11)	String C is the shortest. It is about 11 cm.
12)	15
13)	a)Hamster b)cats / Rabbit
14)	a)20 b)2
15)	60
16)	$95 - 20 = 75$

17)	$57 + 27 = 84$ David has 84 marbles now.
18)	$48 - 12 = 36$ Linda's mother bakes 36 cupcakes.