

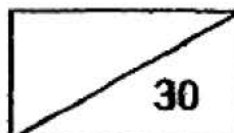
Pei Chun Public School
Holistic Assessment – 2
Mini Test 4
Mathematics
Primary 1

Name: _____ ()

Class: Primary 1/ _____ Parent's Signature: _____

Time: 50 min

Marks:




Maths Teacher: _____

Section A (10 × 1 marks)

Questions 1 to 10 carry 1 mark each. Write your answers in the spaces provided. For questions which require units, give your answers in the units stated. (10 marks)

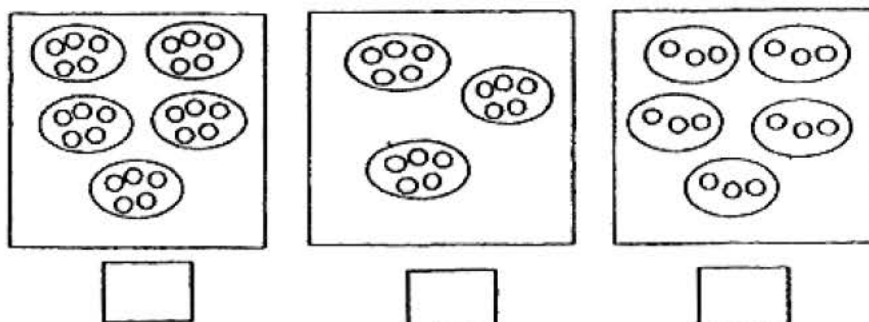
1. Write a multiplication equation for the picture below.




$$\boxed{} \times \boxed{} = \boxed{}$$

2. Which of the following shows 3 fives?

Tick (✓) the correct box.




3. Put 14 pears into groups of 2.




There are groups of 2.

4. There are 4 rabbits.
20 carrots are shared equally among the rabbits.
How many carrots does each rabbit get?



Each rabbit gets carrots.

5. Circle the coins needed to exchange the amount of money on the left.



6. Ravi wants to buy a tub of ice cream that costs \$5.


He has \$3.

How much more money does he need?

Ravi needs \$ more.


Mr Wong makes a picture graph of the favourite food of his pupils.

Study the graph and answer questions 7 and 8.



7. The number of pupils who likes hamburger is the same as the number of pupils who likes _____ .
8. The most number of pupils choose _____ as their favourite food.

The picture graph shows some of the animals there are at a pet shop.
Study the graph and answer questions 9 and 10.



9. There are _____ fewer tortoises than fish.
10. There are _____ more rabbits than dogs.

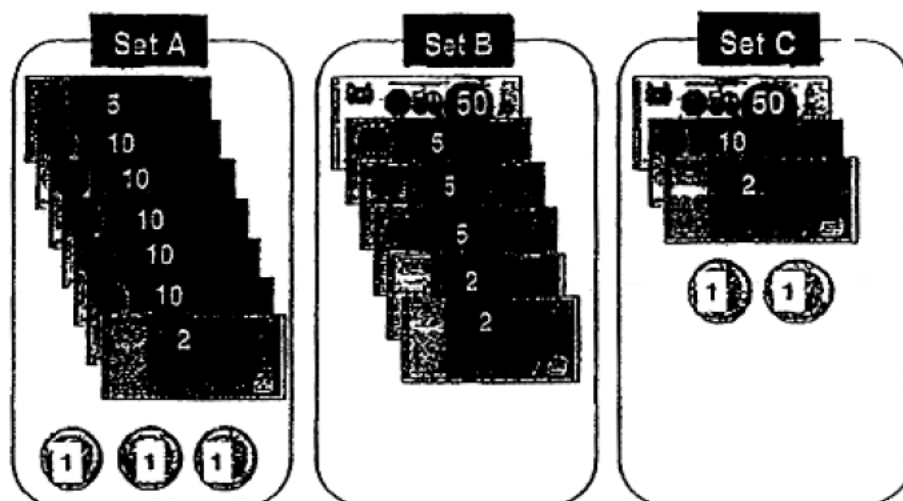
Section B (10 x 2 marks)

Questions 11 to 20 carry 2 marks each. Show your working clearly in the space below each question and write your answers in the spaces provided. For questions which require units, give your answers in the units stated.

(20 marks)

11. Compare the amount of money in each set.

Fill in the boxes below.



Set has the greatest amount of money.

Set has the least amount of money.

12. Harry buys 1 of the items below.

He pays the cashier \$12.

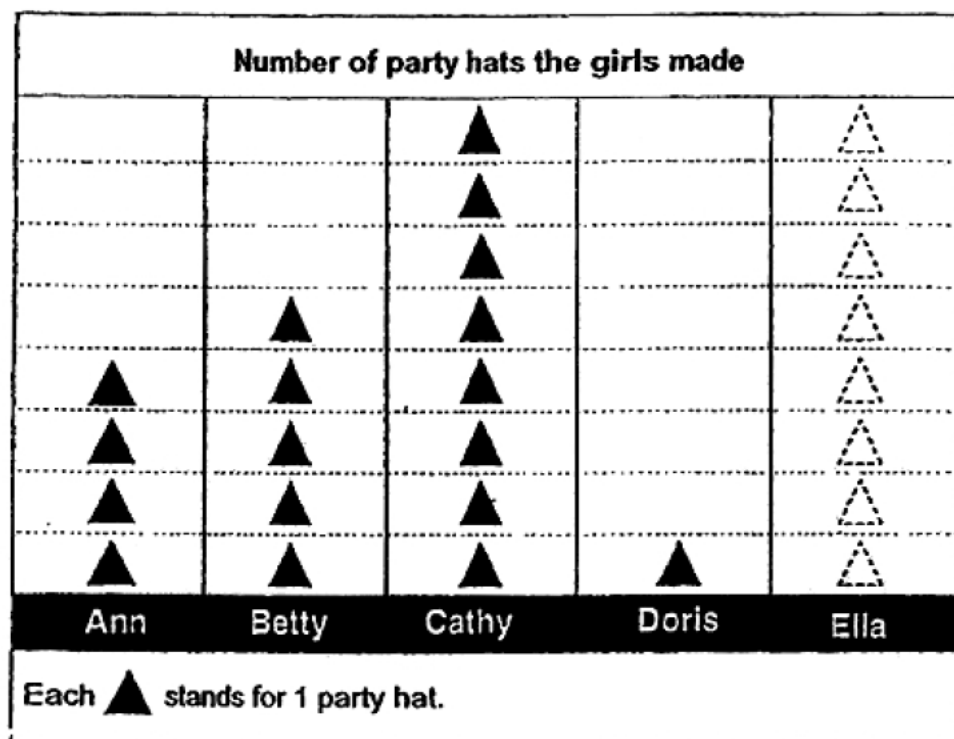
He gets back \$1 from the cashier.

Circle the item that he buys.



The picture graph shows the number of party hats 5 girls make.

Study the graph and answer questions 13, 14 and 15.




13. Ann, Betty and Cathy make _____ party hats altogether.
14. Cathy sells 2 party hats.
She has _____ party hats left.
15. Ella makes 3 fewer party hats than Betty.
Colour the number of party hats that Ella has made in the graph above.

16. There are 2 plates.

There are 9 apples on each plate.

Mandy wants to share all the apples equally with Janice and Emily.

How many apples does each girl get?



Each girl gets _____ apples.

The picture below shows the items that are for sale in a toy shop.
Study the picture and answer questions 17 and 18.



17. Janice has \$14.

Which item can she buy?

She can buy a _____.

18. Peter buys a soccer ball.

He gives the cashier \$20.

How much money does he get back?

$$\$ \boxed{} \bigcirc \$ \boxed{} = \$ \boxed{}$$

Peter gets \$ _____ back.

19. Mrs Devi bakes 6 cakes.

She puts 5 candles on each cake.

How many candles are there altogether on the 6 cakes?



$$\square \bigcirc \square = \square$$


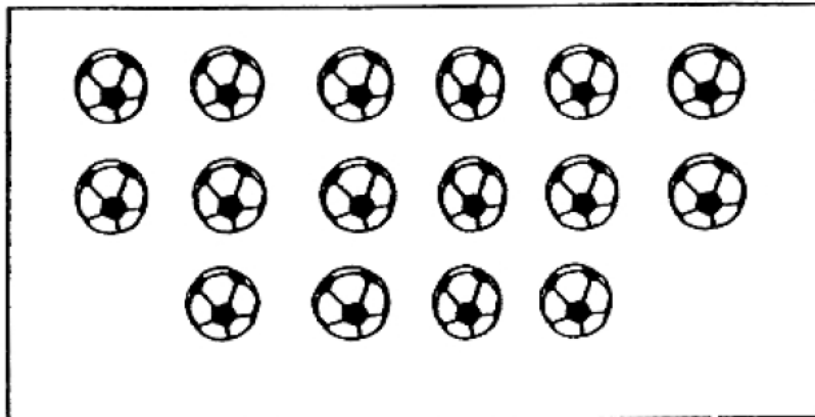
There are _____ candles on the 6 cakes altogether.

20. There are 16 balls.

Andrew put all the balls equally into 8 baskets.

How many balls are there in each basket?

Draw the balls in the baskets below.



There are _____ balls in each basket.

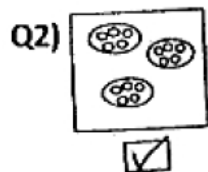
End of Paper

SCHOOL : PEI CHUN

SUBJECT : MATHEMATICS

TERM : Holistic Assessment (Mini Test 4)

Q1) $4 \times 6 = 24$



Q3) There are 7 groups of 2

Q4) Each rabbit gets 5 carrots.

Q5) 50¢ , 20¢ , 20¢ , 10¢

Q6) Ravi needs \$2 more

Q7) The number of pupils who likes hamburger is the same as the number of pupils who likes pizza.

Q8) The most number of pupils who choose French fries as their favourite food.

Q9) There are 3 fewer tortoises than fish.

Q10) There are 2 more rabbits than dogs.

Q11) Set B has the greatest amount of money.

Set A has the least amount of money.

Q12)



Q13) Ann , Betty and Cathy make 17 party hats altogether.

Q14) She has 6 party hats left.

Q15) Ella :



Q16) Each girl gets 6 apples.

Q17) She can buy a toy car.

Q18) $20 - 15 = 5$

Q19) There are 30 candles on the 6 cakes altogether.

Q20) There are 2 balls in each basket.