

# JEE MAINS PAPER 1 2025

Test Date	23/01/2025
Test Time	9:00 AM - 12:00 PM
Subject	B. Tech

## Section : Mathematics Section A

**Q.1**  
 Let  $I(x) = \int \frac{dx}{(x-11)^{\frac{11}{13}} (x+15)^{\frac{15}{13}}}$ . If  $I(37) - I(24) = \frac{1}{4} \left( \frac{1}{b^{\frac{1}{13}}} - \frac{1}{c^{\frac{1}{13}}} \right)$ ,  $b, c \in \mathbb{N}$ , then  $3(b+c)$  is equal to

- Options**
1. 26
  2. 40
  3. 39
  4. 22

Question Type : **MCQ**

Question ID : **736475993**

Option 1 ID : **7364753385**

Option 2 ID : **7364753387**

Option 3 ID : **7364753386**

Option 4 ID : **7364753384**

**Q.2**  
 Let  $f(x) = \log_e x$  and  $g(x) = \frac{x^4 - 2x^3 + 3x^2 - 2x + 2}{2x^2 - 2x + 1}$ .

Then the domain of  $f \circ g$  is

- Options**
1.  $\mathbb{R}$
  2.  $[0, \infty)$
  3.  $(0, \infty)$
  4.  $[1, \infty)$

Question Type : **MCQ**

Question ID : **736475976**

Option 1 ID : **7364753316**

Option 2 ID : **7364753317**

Option 3 ID : **7364753318**

Option 4 ID : **7364753319**

**Q.3** One die has two faces marked 1, two faces marked 2, one face marked 3 and one face marked 4. Another die has one face marked 1, two faces marked 2, two faces marked 3 and one face marked 4. The probability of getting the sum of numbers to be 4 or 5, when both the dice are thrown together, is

- Options**
1.  $\frac{4}{9}$
  2.  $\frac{2}{3}$
  3.  $\frac{1}{2}$
  4.  $\frac{3}{5}$

Question Type : **MCQ**

Question ID : **736475983**

Option 1 ID : **7364753346**

Option 2 ID : **7364753344**

Option 3 ID : **7364753345**

Option 4 ID : **7364753347**

**Q.4** Let  $\left| \frac{\bar{z}-i}{2\bar{z}+i} \right| = \frac{1}{3}$ ,  $z \in \mathbb{C}$ , be the equation of a circle with center at C. If the area of the triangle, whose vertices are at the points (0, 0), C and ( $\alpha$ , 0) is 11 square units, then  $\alpha^2$  equals:

- Options**
1.  $\frac{81}{25}$
  2. 50
  3.  $\frac{121}{25}$
  4. 100

Question Type : **MCQ**

Question ID : **736475978**

Option 1 ID : **7364753326**

Option 2 ID : **7364753324**

Option 3 ID : **7364753327**

Option 4 ID : **7364753325**

**Q.5** Let P be the foot of the perpendicular from the point Q(10, -3, -1) on the line  $\frac{x-3}{7} = \frac{y-2}{-1} = \frac{z+1}{-2}$ .

Then the area of the right angled triangle PQR, where R is the point (3, -2, 1), is

- Options**
1.  $\sqrt{30}$
  2.  $3\sqrt{30}$
  3.  $8\sqrt{15}$
  4.  $9\sqrt{15}$

Question Type : MCQ

Question ID : 736475990

Option 1 ID : 7364753372

Option 2 ID : 7364753375

Option 3 ID : 7364753373

Option 4 ID : 7364753374

**Q.6** If the first term of an A.P. is 3 and the sum of its first four terms is equal to one-fifth of the sum of the next four terms, then the sum of the first 20 terms is equal to

- Options**
1. -1020
  2. -1200
  3. -1080
  4. -120

Question Type : MCQ

Question ID : 736475981

Option 1 ID : 7364753337

Option 2 ID : 7364753339

Option 3 ID : 7364753336

Option 4 ID : 7364753338

**Q.7** The number of words, which can be formed using all the letters of the word "DAUGHTER", so that all the vowels never come together, is

- Options**
1. 36000
  2. 35000
  3. 34000
  4. 37000

Question Type : MCQ

Question ID : 736475982

Option 1 ID : 7364753342

Option 2 ID : 7364753341

Option 3 ID : 7364753340

Option 4 ID : 7364753343

**Q.8** Let the arc AC of a circle subtend a right angle at the centre O. If the point B on the arc AC, divides the arc AC such that  $\frac{\text{length of arc AB}}{\text{length of arc BC}} = \frac{1}{5}$ , and  $\overrightarrow{OC} = \alpha \overrightarrow{OA} + \beta \overrightarrow{OB}$ , then  $\alpha + \sqrt{2}(\sqrt{3} - 1)\beta$  is equal to

- Options
1.  $5\sqrt{3}$
  2.  $2\sqrt{3}$
  3.  $2 - \sqrt{3}$
  4.  $2 + \sqrt{3}$

Question Type : **MCQ**

Question ID : **736475988**

Option 1 ID : **7364753367**

Option 2 ID : **7364753364**

Option 3 ID : **7364753366**

Option 4 ID : **7364753365**

**Q.9** The value of

$$\int_{e^2}^{e^4} \frac{1}{x} \left( \frac{e^{((\log_e x)^2 + 1)^{-1}}}{e^{((\log_e x)^2 + 1)^{-1}} + e^{((6 - \log_e x)^2 + 1)^{-1}}} \right) dx \text{ is}$$

- Options
1.  $\log_e 2$
  2. 1
  3. 2
  4.  $e^2$

Question Type : **MCQ**

Question ID : **736475994**

Option 1 ID : **7364753390**

Option 2 ID : **7364753388**

Option 3 ID : **7364753389**

Option 4 ID : **7364753391**

**Q.10** Let the position vectors of the vertices A, B and C of a tetrahedron ABCD be  $\hat{i} + 2\hat{j} + \hat{k}$ ,  $\hat{i} + 3\hat{j} - 2\hat{k}$  and  $2\hat{i} + \hat{j} - \hat{k}$  respectively. The altitude from the vertex D to the opposite face ABC meets the median line segment through A of the triangle ABC at the point E. If the length of AD is  $\frac{\sqrt{110}}{3}$  and the volume of the tetrahedron is  $\frac{\sqrt{805}}{6\sqrt{2}}$ , then the position vector of E is

- Options**
1.  $\frac{1}{6}(12\hat{i} + 12\hat{j} + \hat{k})$
  2.  $\frac{1}{2}(\hat{i} + 4\hat{j} + 7\hat{k})$
  3.  $\frac{1}{6}(7\hat{i} + 12\hat{j} + \hat{k})$
  4.  $\frac{1}{12}(7\hat{i} + 4\hat{j} + 3\hat{k})$

Question Type : **MCQ**

Question ID : **736475989**

Option 1 ID : **7364753370**

Option 2 ID : **7364753371**

Option 3 ID : **7364753369**

Option 4 ID : **7364753368**

**Q.11** If the system of equations  
 $(\lambda - 1)x + (\lambda - 4)y + \lambda z = 5$   
 $\lambda x + (\lambda - 1)y + (\lambda - 4)z = 7$   
 $(\lambda + 1)x + (\lambda + 2)y - (\lambda + 2)z = 9$   
 has infinitely many solutions, then  $\lambda^2 + \lambda$  is equal to

- Options**
1. 10
  2. 12
  3. 6
  4. 20

Question Type : **MCQ**

Question ID : **736475979**

Option 1 ID : **7364753329**

Option 2 ID : **7364753331**

Option 3 ID : **7364753328**

Option 4 ID : **7364753330**

**Q.12** If the line  $3x - 2y + 12 = 0$  intersects the parabola  $4y = 3x^2$  at the points A and B, then at the vertex of the parabola, the line segment AB subtends an angle equal to

**Options**

1.  $\tan^{-1}\left(\frac{4}{5}\right)$
2.  $\tan^{-1}\left(\frac{11}{9}\right)$
3.  $\tan^{-1}\left(\frac{9}{7}\right)$
4.  $\frac{\pi}{2} - \tan^{-1}\left(\frac{3}{2}\right)$

Question Type : **MCQ**

Question ID : **736475987**

Option 1 ID : **7364753360**

Option 2 ID : **7364753363**

Option 3 ID : **7364753362**

Option 4 ID : **7364753361**

**Q.13** If A, B, and  $(\text{adj}(A^{-1}) + \text{adj}(B^{-1}))$  are non-singular matrices of same order, then the inverse of  $A(\text{adj}(A^{-1}) + \text{adj}(B^{-1}))^{-1}B$ , is equal to

**Options**

1.  $\frac{1}{|AB|}(\text{adj}(B) + \text{adj}(A))$
2.  $AB^{-1} + A^{-1}B$
3.  $\frac{AB^{-1}}{|A|} + \frac{BA^{-1}}{|B|}$
4.  $\text{adj}(B^{-1}) + \text{adj}(A^{-1})$

Question Type : **MCQ**

Question ID : **736475980**

Option 1 ID : **7364753334**

Option 2 ID : **7364753332**

Option 3 ID : **7364753335**

Option 4 ID : **7364753333**

Q.14

If  $\frac{\pi}{2} \leq x \leq \frac{3\pi}{4}$ , then  $\cos^{-1}\left(\frac{12}{13}\cos x + \frac{5}{13}\sin x\right)$  is equal to

Options

1.  $x - \tan^{-1}\frac{4}{3}$
2.  $x + \tan^{-1}\frac{4}{5}$
3.  $x - \tan^{-1}\frac{5}{12}$
4.  $x + \tan^{-1}\frac{5}{12}$

Question Type : MCQ

Question ID : 736475985

Option 1 ID : 7364753352

Option 2 ID : 7364753353

Option 3 ID : 7364753354

Option 4 ID : 7364753355

**Q.15** Let a curve  $y = f(x)$  pass through the points  $(0, 5)$  and  $(\log_e 2, k)$ . If the curve satisfies the differential equation  $2(3 + y)e^{2x} dx - (7 + e^{2x})dy = 0$ , then  $k$  is equal to

Options

1. 4
2. 8
3. 32
4. 16

Question Type : MCQ

Question ID : 736475995

Option 1 ID : 7364753392

Option 2 ID : 7364753393

Option 3 ID : 7364753395

Option 4 ID : 7364753394

**Q.16** Marks obtained by all the students of class 12 are presented in a frequency distribution with classes of equal width. Let the median of this grouped data be 14 with median class interval 12-18 and median class frequency 12. If the number of students whose marks are less than 12 is 18, then the total number of students is

Options

1. 40
2. 44
3. 48
4. 52

Question Type : MCQ

Question ID : 736475992

Option 1 ID : 7364753380

Option 2 ID : 7364753381

Option 3 ID : 7364753382

Option 4 ID : 7364753383

**Q.17** Let the area of a  $\Delta PQR$  with vertices  $P(5, 4)$ ,  $Q(-2, 4)$  and  $R(a, b)$  be 35 square units. If its orthocenter and centroid are  $O(2, \frac{14}{5})$  and  $C(c, d)$  respectively, then  $c + 2d$  is equal to

- Options**
1. 3
  2. 2
  3.  $\frac{7}{3}$
  4.  $\frac{8}{3}$

Question Type : **MCQ**

Question ID : **736475984**

Option 1 ID : **7364753351**

Option 2 ID : **7364753348**

Option 3 ID : **7364753349**

Option 4 ID : **7364753350**

**Q.18** The value of  $(\sin 70^\circ)(\cot 10^\circ \cot 70^\circ - 1)$  is

- Options**
1. 1
  2.  $\frac{3}{2}$
  3.  $\frac{2}{3}$
  4. 0

Question Type : **MCQ**

Question ID : **736475986**

Option 1 ID : **7364753357**

Option 2 ID : **7364753358**

Option 3 ID : **7364753359**

Option 4 ID : **7364753356**



Q.19 If the function

$$f(x) = \begin{cases} \frac{2}{x} \{\sin(k_1 + 1)x + \sin(k_2 - 1)x\}, & x < 0 \\ 4, & x = 0 \\ \frac{2}{x} \log_e \left( \frac{2 + k_1 x}{2 + k_2 x} \right), & x > 0 \end{cases}$$

is continuous at  $x = 0$ , then  $k_1^2 + k_2^2$  is equal to

- Options
- 5
  - 8
  - 20
  - 10

Question Type : MCQ

Question ID : 736475991

Option 1 ID : 7364753376

Option 2 ID : 7364753377

Option 3 ID : 7364753379

Option 4 ID : 7364753378

Q.20 Let  $R = \{(1, 2), (2, 3), (3, 3)\}$  be a relation defined on the set  $\{1, 2, 3, 4\}$ . Then the minimum number of elements, needed to be added in  $R$  so that  $R$  becomes an equivalence relation, is:

- Options
- 8
  - 10
  - 9
  - 7

Question Type : MCQ

Question ID : 736475977

Option 1 ID : 7364753321

Option 2 ID : 7364753323

Option 3 ID : 7364753322

Option 4 ID : 7364753320

Section : Mathematics Section B

Q.21 The sum of all rational terms in the expansion of  $(1 + 2^{1/3} + 3^{1/2})^6$  is equal to \_\_\_\_\_

Question Type : SA

Question ID : 736475998

**Q.22** If the area of the larger portion bounded between the curves  $x^2 + y^2 = 25$  and  $y = |x - 1|$  is  $\frac{1}{4}(b\pi + c)$ ,  $b, c \in \mathbb{N}$ , then  $b + c$  is equal to \_\_\_\_\_

Question Type : SA

Question ID : 736475997

**Q.23** Let the circle  $C$  touch the line  $x - y + 1 = 0$ , have the centre on the positive  $x$ -axis, and cut off a chord of length  $\frac{4}{\sqrt{13}}$  along the line  $-3x + 2y = 1$ . Let  $H$  be the hyperbola  $\frac{x^2}{\alpha^2} - \frac{y^2}{\beta^2} = 1$ , whose one of the foci is the centre of  $C$  and the length of the transverse axis is the diameter of  $C$ . Then  $2\alpha^2 + 3\beta^2$  is equal to \_\_\_\_\_

Question Type : SA

Question ID : 736475999

**Q.24** If the set of all values of  $a$ , for which the equation  $5x^3 - 15x - a = 0$  has three distinct real roots, is the interval  $(\alpha, \beta)$ , then  $\beta - 2\alpha$  is equal to \_\_\_\_\_

Question Type : SA

Question ID : 7364751000

**Q.25** If the equation  $a(b - c)x^2 + b(c - a)x + c(a - b) = 0$  has equal roots, where  $a + c = 15$  and  $b = \frac{36}{5}$ , then  $a^2 + c^2$  is equal to \_\_\_\_\_

Question Type : SA

Question ID : 736475996

### Section : Physics Section A

**Q.26** A light hollow cube of side length 10 cm and mass 10g, is floating in water. It is pushed down and released to execute simple harmonic oscillations. The time period of oscillations is  $y\pi \times 10^{-2}$  s, where the value of  $y$  is

(Acceleration due to gravity,  $g = 10 \text{ m/s}^2$ , density of water =  $10^3 \text{ kg/m}^3$ )

Options 1. 1

2. 2

3. 4

4. 6

Question Type : MCQ

Question ID : 7364751009

Option 1 ID : 7364753433

Option 2 ID : 7364753436

Option 3 ID : 7364753434

Option 4 ID : 7364753435

**Q.27** Consider a circular disc of radius 20 cm with centre located at the origin. A circular hole of radius 5 cm is cut from this disc in such a way that the edge of the hole touches the edge of the disc. The distance of centre of mass of residual or remaining disc from the origin will be

- Options**
1. 1.0 cm
  2. 2.0 cm
  3. 1.5 cm
  4. 0.5 cm

Question Type : **MCQ**

Question ID : **7364751005**

Option 1 ID : **7364753418**

Option 2 ID : **7364753420**

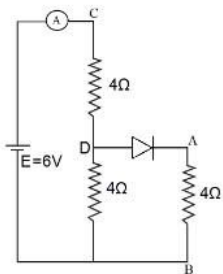
Option 3 ID : **7364753419**

Option 4 ID : **7364753417**

**Q.28** Refer to the circuit diagram given in the figure. which of the following observations are correct?

- A. Total resistance of circuit is  $6\ \Omega$
- B. Current in Ammeter is 1A
- C. Potential across AB is 4 Volts.
- D. Potential across CD is 4 Volts
- E. Total resistance of the circuit is  $8\ \Omega$ .

Choose the correct answer from the options given below:



- Options**
1. A, C and D Only
  2. B, C and E Only
  3. A, B and C Only
  4. A, B and D Only

Question Type : **MCQ**

Question ID : **7364751020**

Option 1 ID : **7364753478**

Option 2 ID : **7364753479**

Option 3 ID : **7364753477**

Option 4 ID : **7364753480**

**Q.29** Given below are two statements:

**Statement I:** The hot water flows faster than cold water

**Statement II:** Soap water has higher surface tension as compared to fresh water.

In the light above statements, choose the *correct* answer from the options given below

- Options
1. Both Statement I and Statement II are false
  2. Both Statement I and Statement II are true
  3. Statement I is false but Statement II is true
  4. Statement I is true but Statement II is false

Question Type : MCQ

Question ID : 7364751006

Option 1 ID : 7364753422

Option 2 ID : 7364753421

Option 3 ID : 7364753424

Option 4 ID : 7364753423

**Q.30** A radioactive nucleus  $n_2$  has 3 times the decay constant as compared to the decay constant of another radioactive nucleus  $n_1$ . If initial number of both nuclei are the same, what is the ratio of number of nuclei of  $n_2$  to the number of nuclei of  $n_1$ , after one half-life of  $n_1$ ?

- Options
1. 8
  2.  $1/4$
  3. 4
  4.  $1/8$

Question Type : MCQ

Question ID : 7364751019

Option 1 ID : 7364753475

Option 2 ID : 7364753474

Option 3 ID : 7364753473

Option 4 ID : 7364753476

**Q.31** What is the lateral shift of a ray refracted through a parallel-sided glass slab of thickness 'h' in terms of the angle of incidence 'i' and angle of refraction 'r', if the glass slab is placed in air medium?

Options

1.  $\frac{h \tan(i-r)}{\tan r}$
2.  $\frac{h \cos(i-r)}{\sin r}$
3. h
4.  $\frac{h \sin(i-r)}{\cos r}$

Question Type : **MCQ**

Question ID : **7364751016**

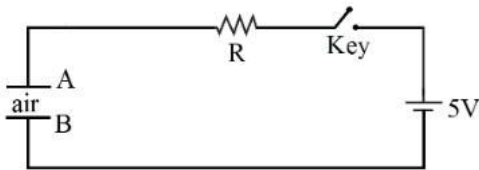
Option 1 ID : **7364753462**

Option 2 ID : **7364753463**

Option 3 ID : **7364753461**

Option 4 ID : **7364753464**

**Q.32** Identify the valid statements relevant to the given circuit at the instant when the key is closed.



- A. There will be no current through resistor R.
- B. There will be maximum current in the connecting wires.
- C. Potential difference between the capacitor plates A and B is minimum.
- D. Charge on the capacitor plates is minimum.

Choose the correct answer from the options given below:

Options

1. A, B, D Only
2. B, C, D Only
3. C, D Only
4. A, C Only

Question Type : **MCQ**

Question ID : **7364751010**

Option 1 ID : **7364753438**

Option 2 ID : **7364753440**

Option 3 ID : **7364753437**

Option 4 ID : **7364753439**

**Q.33** A solid sphere of mass 'm' and radius 'r' is allowed to roll without slipping from the highest point of an inclined plane of length 'L' and makes an angle  $30^\circ$  with the horizontal. The speed of the particle at the bottom of the plane is  $v_1$ . If the angle of inclination is increased to  $45^\circ$  while keeping L constant. Then the new speed of the sphere at the bottom of the plane is  $v_2$ . The ratio  $v_1^2 : v_2^2$  is

**Options** 1.  $1 : 3$

2.  $1 : \sqrt{2}$

3.  $1 : \sqrt{3}$

4.  $1 : 2$

Question Type : **MCQ**

Question ID : **7364751003**

Option 1 ID : **7364753412**

Option 2 ID : **7364753409**

Option 3 ID : **7364753410**

Option 4 ID : **7364753411**

**Q.34** Given a thin convex lens (refractive index  $\mu_2$ ), kept in a liquid (refractive index  $\mu_1$ ,  $\mu_1 < \mu_2$ ) having radii of curvatures  $|R_1|$  and  $|R_2|$ . Its second surface is silver polished. Where should an object be placed on the optic axis so that a real and inverted image is formed at the same place?

**Options**

1. 
$$\frac{\mu_1 |R_1| \cdot |R_2|}{\mu_2 (|R_1| + |R_2|) - \mu_1 |R_2|}$$

2. 
$$\frac{(\mu_2 + \mu_1) |R_1|}{(\mu_2 - \mu_1)}$$

3. 
$$\frac{\mu_1 |R_1| \cdot |R_2|}{\mu_2 (2|R_1| + |R_2|) - \mu_1 \sqrt{|R_1| \cdot |R_2|}}$$

4. 
$$\frac{\mu_1 |R_1| \cdot |R_2|}{\mu_2 (|R_1| + |R_2|) - \mu_1 |R_1|}$$

Question Type : **MCQ**

Question ID : **7364751015**

Option 1 ID : **7364753460**

Option 2 ID : **7364753457**

Option 3 ID : **7364753458**

Option 4 ID : **7364753459**

**Q.35** The position of a particle moving on x-axis is given by  $x(t) = A \sin t + B \cos^2 t + Ct^2 + D$ , where  $t$  is time. The dimension of  $\frac{ABC}{D}$  is

- Options**
1.  $L^3 T^{-2}$
  2.  $L$
  3.  $L^2$
  4.  $L^2 T^{-2}$

Question Type : **MCQ**

Question ID : **7364751001**

Option 1 ID : **7364753404**

Option 2 ID : **7364753401**

Option 3 ID : **7364753402**

Option 4 ID : **7364753403**

**Q.36** A gun fires a lead bullet of temperature 300 K into a wooden block. The bullet having melting temperature of 600 K penetrates into the block and melts down. If the total heat required for the process is 625 J, then the mass of the bullet is \_\_\_\_\_ grams.  
(Latent heat of fusion of lead =  $2.5 \times 10^4 \text{ J Kg}^{-1}$  and specific heat capacity of lead =  $125 \text{ J Kg}^{-1} \text{ K}^{-1}$ )

- Options**
1. 10
  2. 15
  3. 5
  4. 20

Question Type : **MCQ**

Question ID : **7364751007**

Option 1 ID : **7364753426**

Option 2 ID : **7364753427**

Option 3 ID : **7364753425**

Option 4 ID : **7364753428**



Q.37 Match the **LIST-I** with **LIST-II**

LIST-I		LIST-II	
A.	Pressure varies inversely with volume of an ideal gas.	I.	Adiabatic process
B.	Heat absorbed goes partly to increase internal energy and partly to do work.	II.	Isochoric process
C.	Heat is neither absorbed nor released by a system.	III.	Isothermal process
D.	No work is done on or by a gas.	IV.	Isobaric process

Choose the **correct** answer from the options given below:

- Options
1. A-I, B-IV, C-II, D-III
  2. A-I, B-III, C-II, D-IV
  3. A-III, B-IV, C-I, D-II
  4. A-III, B-I, C-IV, D-II

Question Type : MCQ

Question ID : 7364751008

Option 1 ID : 7364753432

Option 2 ID : 7364753429

Option 3 ID : 7364753430

Option 4 ID : 7364753431

Q.38 The electric field of an electromagnetic wave in free space is

$$\vec{E} = 57 \cos[7.5 \times 10^6 t - 5 \times 10^{-3} (3x + 4y)] (4\hat{i} - 3\hat{j}) \text{ N/C}.$$

The associated magnetic field in Tesla is

- Options
1.  $\vec{B} = -\frac{57}{3 \times 10^8} \cos[7.5 \times 10^6 t - 5 \times 10^{-3} (3x + 4y)] (\hat{k})$
  2.  $\vec{B} = \frac{57}{3 \times 10^8} \cos[7.5 \times 10^6 t - 5 \times 10^{-3} (3x + 4y)] (\hat{k})$
  3.  $\vec{B} = \frac{57}{3 \times 10^8} \cos[7.5 \times 10^6 t - 5 \times 10^{-3} (3x + 4y)] (5\hat{k})$
  4.  $\vec{B} = -\frac{57}{3 \times 10^8} \cos[7.5 \times 10^6 t - 5 \times 10^{-3} (3x + 4y)] (5\hat{k})$

Question Type : MCQ

Question ID : 7364751014

Option 1 ID : 7364753453

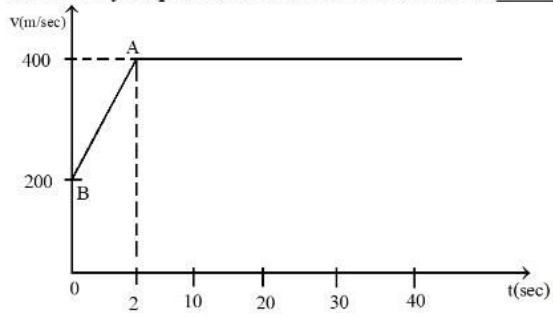
Option 2 ID : 7364753454

Option 3 ID : 7364753456

Option 4 ID : 7364753455



**Q.39** The motion of an airplane is represented by velocity-time graph as shown below. The distance covered by airplane in the first 30.5 second is \_\_\_\_\_ km.



- Options
1. 6
  2. 3
  3. 12
  4. 9

Question Type : MCQ

Question ID : 7364751004

Option 1 ID : 7364753414

Option 2 ID : 7364753413

Option 3 ID : 7364753416

Option 4 ID : 7364753415

**Q.40** The electric flux is  $\phi = \alpha\sigma + \beta\lambda$

where  $\lambda$  and  $\sigma$  are linear and surface charge density, respectively.  $\left(\frac{\alpha}{\beta}\right)$  represents

- Options
1. area
  2. displacement
  3. electric field
  4. charge

Question Type : MCQ

Question ID : 7364751002

Option 1 ID : 7364753407

Option 2 ID : 7364753408

Option 3 ID : 7364753405

Option 4 ID : 7364753406

**Q.41** Regarding self-inductance:

- A. The self-inductance of the coil depends on its geometry.
- B. Self-inductance does not depend on the permeability of the medium.
- C. Self-induced e.m.f. opposes any change in the current in a circuit.
- D. Self-inductance is electromagnetic analogue of mass in mechanics.
- E. Work needs to be done against self-induced e.m.f. in establishing the current.

Choose the correct answer from the options given below:

- Options**
- 1. B, C, D, E only
  - 2. A, C, D, E only
  - 3. A, B, C, D only
  - 4. A, B, C, E only

Question Type : **MCQ**

Question ID : **7364751012**

Option 1 ID : **7364753446**

Option 2 ID : **7364753448**

Option 3 ID : **7364753445**

Option 4 ID : **7364753447**

**Q.42** A sub-atomic particle of mass  $10^{-30}$  kg is moving with a velocity  $2.21 \times 10^6$  m/s. Under the matter wave consideration, the particle will behave closely like \_\_\_\_\_.  
( $h = 6.63 \times 10^{-34}$  J.s)

- Options**
- 1. Gamma rays
  - 2. X-rays
  - 3. Visible radiation
  - 4. Infra-red radiation

Question Type : **MCQ**

Question ID : **7364751018**

Option 1 ID : **7364753472**

Option 2 ID : **7364753471**

Option 3 ID : **7364753470**

Option 4 ID : **7364753469**

**Q.43** A spherical surface of radius of curvature  $R$ , separates air from glass (refractive index = 1.5). The centre of curvature is in the glass medium. A point object 'O' placed in air on the optic axis of the surface, so that its real image is formed at 'I' inside glass. The line OI intersects the spherical surface at P and  $PO = PI$ . The distance PO equals to

- Options**
1.  $1.5 R$
  2.  $3 R$
  3.  $2 R$
  4.  $5 R$

Question Type : **MCQ**

Question ID : **7364751017**

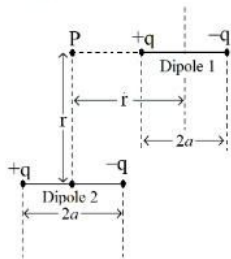
Option 1 ID : **7364753468**

Option 2 ID : **7364753466**

Option 3 ID : **7364753467**

Option 4 ID : **7364753465**

**Q.44** A point particle of charge  $Q$  is located at P along the axis of an electric dipole 1 at a distance  $r$  as shown in the figure. The point P is also on the equatorial plane of a second electric dipole 2 at a distance  $r$ . The dipoles are made of opposite charge  $q$  separated by a distance  $2a$ . For the charge particle at P not to experience any net force, which of the following correctly describes the situation?



- Options**
1.  $\frac{a}{r} \sim 3$
  2.  $\frac{a}{r} \sim 20$
  3.  $\frac{a}{r} \sim 10$
  4.  $\frac{a}{r} \sim 0.5$

Question Type : **MCQ**

Question ID : **7364751011**

Option 1 ID : **7364753443**

Option 2 ID : **7364753442**

Option 3 ID : **7364753444**

Option 4 ID : **7364753441**

**Q.45** Consider a moving coil galvanometer (MCG):

- A. The torsional constant in moving coil galvanometer has dimensions  $[ML^2T^{-2}]$
- B. Increasing the current sensitivity may not necessarily increase the voltage sensitivity.
- C. If we increase number of turns (N) to its double (2N), then the voltage sensitivity doubles.
- D. MCG can be converted into an ammeter by introducing a shunt resistance of large value in parallel with galvanometer.
- E. Current sensitivity of MCG depends inversely on number of turns of coil.

Choose the correct answer from the options given below:

- Options**
1. A, D Only
  2. B, D, E Only
  3. A, B, E Only
  4. A, B Only

Question Type : **MCQ**

Question ID : **7364751013**

Option 1 ID : **7364753451**

Option 2 ID : **7364753450**

Option 3 ID : **7364753449**

Option 4 ID : **7364753452**

**Section : Physics Section B**

**Q.46** A force  $\vec{f} = x^2y\hat{i} + y^2\hat{j}$  acts on a particle in a plane  $x + y = 10$ . The work done by this force during a displacement from (0, 0) to (4m, 2m) is \_\_\_\_ Joule (round off to the nearest integer)

Question Type : **SA**

Question ID : **7364751022**

**Q.47** Two particles are located at equal distance from origin. The position vectors of those are represented by  $\vec{A} = 2\hat{i} + 3n\hat{j} + 2\hat{k}$  and  $\vec{B} = 2\hat{i} - 2\hat{j} + 4p\hat{k}$ , respectively. If both the vectors are at right angle to each other, the value of  $n^{-1}$  is \_\_\_\_.

Question Type : **SA**

Question ID : **7364751021**

**Q.48** An ideal gas initially at  $0^\circ\text{C}$  temperature, is compressed suddenly to one fourth of its volume. If the ratio of specific heat at constant pressure to that at constant volume is  $3/2$ , the change in temperature due to the thermodynamic process is \_\_\_\_ K.

Question Type : **SA**

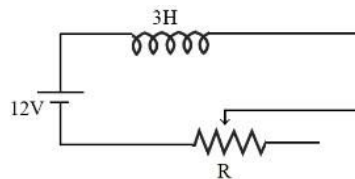
Question ID : **7364751023**

- Q.49** A positive ion A and a negative ion B has charges  $6.67 \times 10^{-19} \text{ C}$  and  $9.6 \times 10^{-10} \text{ C}$ , and masses  $19.2 \times 10^{-27} \text{ kg}$  and  $9 \times 10^{-27} \text{ kg}$  respectively. At an instant, the ions are separated by a certain distance  $r$ . At that instant the ratio of the magnitudes of electrostatic force to gravitational force is  $P \times 10^{-13}$ , where the value of  $P$  is \_\_\_\_\_.  
(Take  $\frac{1}{4\pi\epsilon_0} = 9 \times 10^9 \text{ Nm}^2\text{C}^{-1}$  and universal gravitational constant as  $6.67 \times 10^{-11} \text{ Nm}^2 \text{ kg}^{-2}$ )

Question Type : **SA**

Question ID : **7364751025**

**Q.50**



In the given circuit the sliding contact is pulled outwards such that electric current in the circuit changes at the rate of  $8 \text{ A/s}$ . At an instant when  $R$  is  $12 \Omega$ , the value of the current in the circuit will be \_\_\_\_\_ A.

Question Type : **SA**

Question ID : **7364751024**

Section : **Chemistry Section A**

**Q.51** Given below are two statements:

Statement I: In Lassaigne's test, the covalent organic molecules are transformed into ionic compounds.

Statement II: The sodium fusion extract of an organic compound having N and S gives prussian blue colour with  $\text{FeSO}_4$  and  $\text{Na}_4[\text{Fe}(\text{CN})_6]$

In the light of the above statements, choose the *correct* answer from the options given below

- Options**
1. Statement I is false but Statement II is true
  2. Both Statement I and Statement II are true
  3. Statement I is true but Statement II is false
  4. Both Statement I and Statement II are false

Question Type : **MCQ**

Question ID : **7364751045**

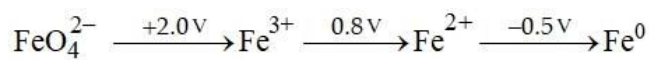
Option 1 ID : **7364753565**

Option 2 ID : **7364753562**

Option 3 ID : **7364753564**

Option 4 ID : **7364753563**

Q.52



In the above diagram, the standard electrode potentials are given in volts (over the arrow).

The value of  $E^\ominus_{\text{FeO}_4^{2-}/\text{Fe}^{2+}}$  is

- Options
1. 2.1 V
  2. 1.2 V
  3. 1.4 V
  4. 1.7 V

Question Type : MCQ

Question ID : 7364751032

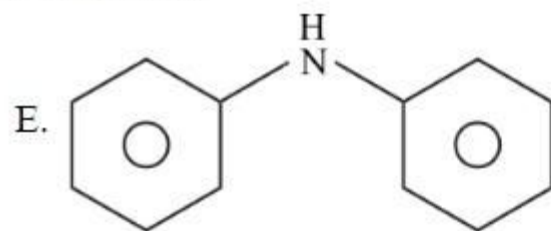
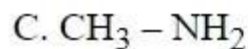
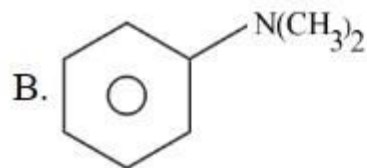
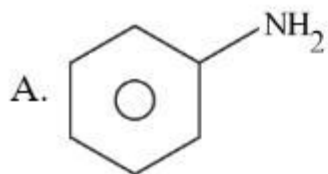
Option 1 ID : 7364753513

Option 2 ID : 7364753510

Option 3 ID : 7364753512

Option 4 ID : 7364753511

Q.53 Which among the following react with Hinsberg's reagent?



Choose the correct answer from the options given below:

- Options
1. C and D Only
  2. A, B and E Only
  3. B and D Only
  4. A, C and E Only

Question Type : MCQ

Question ID : 7364751043

Option 1 ID : 7364753556

Option 2 ID : 7364753555

Option 3 ID : 7364753557

Option 4 ID : 7364753554

Q.54 The **incorrect** statement among the following is

- Options
1.  $\text{PH}_3$  shows lower proton affinity than  $\text{NH}_3$ .
  2.  $\text{PF}_3$  exists but  $\text{NF}_5$  does not.
  3.  $\text{NO}_2$  can dimerise easily.
  4.  $\text{SO}_2$  can act as an oxidizing agent, but not as a reducing agent.

Question Type : MCQ

Question ID : 7364751034

Option 1 ID : 7364753519

Option 2 ID : 7364753518

Option 3 ID : 7364753520

Option 4 ID : 7364753521



**Q.55** What amount of bromine will be required to convert 2 g of phenol into 2,4,6-tribromophenol?  
(Given molar mass in  $\text{g mol}^{-1}$  of C, H, O, Br are 12, 1, 16, 80 respectively )

- Options**
1. 20.44 g
  2. 6.0 g
  3. 4.0 g
  4. 10.22 g

Question Type : **MCQ**

Question ID : **7364751041**

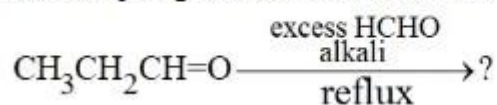
Option 1 ID : **7364753549**

Option 2 ID : **7364753547**

Option 3 ID : **7364753546**

Option 4 ID : **7364753548**

**Q.56** The major product of the following reaction is:



- Options**
1.  $\text{CH}_3 - \underset{\text{CH}_2}{\overset{\text{||}}{\text{C}}} - \text{CH}=\text{O}$
  2.  $\text{CH}_3 - \text{C} \begin{array}{l} \nearrow \text{CH}_2 - \text{OH} \\ \text{---} \text{CH}_2 - \text{OH} \\ \searrow \text{CH}_2 - \text{OH} \end{array}$
  3.  $\text{CH}_3 - \text{CH}_2 - \text{CH}_2 - \text{OH}$
  4.  $\text{CH}_3 - \underset{\text{CH}_2 - \text{OH}}{\text{CH}} - \text{CH}=\text{O}$

Question Type : **MCQ**

Question ID : **7364751042**

Option 1 ID : **7364753552**

Option 2 ID : **7364753550**

Option 3 ID : **7364753553**

Option 4 ID : **7364753551**



Q.57 The complex that shows Facial - Meridional isomerism is:

- Options
1.  $[\text{Co}(\text{NH}_3)_4\text{Cl}_2]^+$
  2.  $[\text{Co}(\text{en})_3]^{3+}$
  3.  $[\text{Co}(\text{NH}_3)_3\text{Cl}_3]$
  4.  $[\text{Co}(\text{en})_2\text{Cl}_2]^+$

Question Type : MCQ

Question ID : 7364751037

Option 1 ID : 7364753533

Option 2 ID : 7364753530

Option 3 ID : 7364753532

Option 4 ID : 7364753531

Q.58 Match the LIST-I with LIST-II

LIST-I (Classification of molecules based on octet rule)		LIST-II (Example)	
A.	Molecules obeying octet rule	I.	$\text{NO}, \text{NO}_2$
B.	Molecules with incomplete octet	II.	$\text{BCl}_3, \text{AlCl}_3$
C.	Molecules with incomplete octet with odd electron	III.	$\text{H}_2\text{SO}_4, \text{PCl}_5$
D.	Molecules with expanded octet	IV.	$\text{CCl}_4, \text{CO}_2$

Choose the *correct* answer from the options given below:

- Options
1. A-IV, B-I, C-III, D-II
  2. A-IV, B-II, C-I, D-III
  3. A-III, B-II, C-I, D-IV
  4. A-II, B-IV, C-III, D-I

Question Type : MCQ

Question ID : 7364751028

Option 1 ID : 7364753495

Option 2 ID : 7364753497

Option 3 ID : 7364753496

Option 4 ID : 7364753494

**Q.59** Heat treatment of muscular pain involves radiation of wavelength of about 900 nm. Which spectral line of H atom is suitable for this?

Given : Rydberg constant  $R_H = 10^5 \text{ cm}^{-1}$ ,  $h = 6.6 \times 10^{-34} \text{ J s}$ ,  $c = 3 \times 10^8 \text{ m/s}$

- Options**
1. Balmer series,  $\infty \rightarrow 2$
  2. Paschen series,  $5 \rightarrow 3$
  3. Paschen series,  $\infty \rightarrow 3$
  4. Lyman series,  $\infty \rightarrow 1$

Question Type : MCQ

Question ID : 7364751027

Option 1 ID : 7364753492

Option 2 ID : 7364753491

Option 3 ID : 7364753490

Option 4 ID : 7364753493

**Q.60**  $2.8 \times 10^{-3}$  mol of  $\text{CO}_2$  is left after removing  $10^{21}$  molecules from its 'x' mg sample. The mass of  $\text{CO}_2$  taken initially is

Given:  $N_A = 6.02 \times 10^{23} \text{ mol}^{-1}$

- Options**
1. 196.2 mg
  2. 98.3 mg
  3. 48.2 mg
  4. 150.4 mg

Question Type : MCQ

Question ID : 7364751026

Option 1 ID : 7364753489

Option 2 ID : 7364753487

Option 3 ID : 7364753486

Option 4 ID : 7364753488

**Q.61** The correct set of ions (aqueous solution) with same colour from the following is:

- Options**
1.  $\text{Sc}^{3+}$ ,  $\text{Ti}^{3+}$ ,  $\text{Cr}^{2+}$
  2.  $\text{V}^{2+}$ ,  $\text{Cr}^{3+}$ ,  $\text{Mn}^{3+}$
  3.  $\text{Ti}^{4+}$ ,  $\text{V}^{4+}$ ,  $\text{Mn}^{2+}$
  4.  $\text{Zn}^{2+}$ ,  $\text{V}^{3+}$ ,  $\text{Fe}^{3+}$

Question Type : MCQ

Question ID : 7364751035

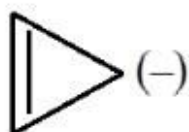
Option 1 ID : 7364753522

Option 2 ID : 7364753523

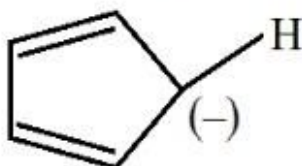
Option 3 ID : 7364753524

Option 4 ID : 7364753525

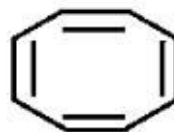
Q.62 The correct stability order of the following species/molecules is:



p



q



r

- Options
1.  $r > q > p$
  2.  $p > q > r$
  3.  $q > r > p$
  4.  $q > p > r$

Question Type : MCQ

Question ID : 7364751039

Option 1 ID : 7364753539

Option 2 ID : 7364753538

Option 3 ID : 7364753540

Option 4 ID : 7364753541

Q.63 Match the LIST-I with LIST-II

LIST-I Name reaction		LIST-II Product obtainable	
A.	Swarts reaction	I.	Ethyl benzene
B.	Sandmeyer's reaction	II.	Ethyl iodide
C.	Wurtz Fittig reaction	III.	Cyanobenzene
D.	Finkelstein reaction	IV.	Ethyl fluoride

Choose the *correct* answer from the options given below:

- Options
1. A-IV, B-I, C-III, D-II
  2. A-II, B-I, C-III, D-IV
  3. A-II, B-III, C-I, D-IV
  4. A-IV, B-III, C-I, D-II

Question Type : MCQ

Question ID : 7364751040

Option 1 ID : 7364753543

Option 2 ID : 7364753545

Option 3 ID : 7364753542

Option 4 ID : 7364753544

**Q.64** Given below are two statements:

**Statement I:** Fructose does not contain an aldehydic group but still reduces Tollen's reagent

**Statement II:** In the presence of base, fructose undergoes rearrangement to give glucose.

In the light of the above statements, choose the **correct** answer from the options given below

- Options**
1. Both Statement I and Statement II are true
  2. Statement I is true but Statement II is false
  3. Both Statement I and Statement II are false
  4. Statement I is false but Statement II is true

Question Type : **MCQ**

Question ID : **7364751044**

Option 1 ID : **7364753558**

Option 2 ID : **7364753560**

Option 3 ID : **7364753559**

Option 4 ID : **7364753561**

**Q.65** The element that does not belong to the same period of the remaining elements (modern periodic table) is:

- Options**
1. Osmium
  2. Palladium
  3. Iridium
  4. Platinum

Question Type : **MCQ**

Question ID : **7364751033**

Option 1 ID : **7364753514**

Option 2 ID : **7364753516**

Option 3 ID : **7364753515**

Option 4 ID : **7364753517**

**Q.66** Which of the following happens when  $\text{NH}_4\text{OH}$  is added gradually to the solution containing 1M  $\text{A}^{2+}$  and 1M  $\text{B}^{3+}$  ions?

Given :  $K_{\text{sp}}[\text{A}(\text{OH})_2] = 9 \times 10^{-10}$  and  $K_{\text{sp}}[\text{B}(\text{OH})_3] = 27 \times 10^{-18}$  at 298 K.

- Options**
1.  $\text{A}(\text{OH})_2$  will precipitate before  $\text{B}(\text{OH})_3$
  2.  $\text{A}(\text{OH})_2$  and  $\text{B}(\text{OH})_3$  will precipitate together
  3.  $\text{B}(\text{OH})_3$  will precipitate before  $\text{A}(\text{OH})_2$
  4. Both  $\text{A}(\text{OH})_2$  and  $\text{B}(\text{OH})_3$  do not show precipitation with  $\text{NH}_4\text{OH}$

Question Type : **MCQ**

Question ID : **7364751031**

Option 1 ID : **7364753507**

Option 2 ID : **7364753508**

Option 3 ID : **7364753506**

Option 4 ID : **7364753509**

**Q.67** The d– electronic configuration of an octahedral Co(II) complex having magnetic moment of 3.95 BM is:

- Options**
1.  $e^4 t_2^3$
  2.  $t_{2g}^6 e_g^1$
  3.  $t_{2g}^3 e_g^0$
  4.  $t_{2g}^5 e_g^2$

Question Type : **MCQ**

Question ID : **7364751036**

Option 1 ID : **7364753527**

Option 2 ID : **7364753528**

Option 3 ID : **7364753529**

Option 4 ID : **7364753526**

**Q.68** Ice at  $-5^\circ\text{C}$  is heated to become vapor with temperature of  $110^\circ\text{C}$  at atmospheric pressure. The entropy change associated with this process can be obtained from

**Options**

1.  $\int_{268\text{K}}^{273\text{K}} \frac{C_{p,m}}{T} dT + \frac{\Delta H_{m,\text{fusion}}}{T_f} + \frac{\Delta H_{m,\text{vaporisation}}}{T_b} + \int_{273\text{K}}^{373\text{K}} \frac{C_{p,m}}{T} dT + \int_{373\text{K}}^{383\text{K}} \frac{C_{p,m}}{T} dT$
2.  $\int_{268\text{K}}^{383\text{K}} C_p dT + \frac{\Delta H_{\text{melting}}}{273} + \frac{\Delta H_{\text{boiling}}}{373}$
3.  $\int_{268\text{K}}^{273\text{K}} C_{p,m} dT + \frac{\Delta H_{m,\text{fusion}}}{T_f} + \frac{\Delta H_{m,\text{vaporisation}}}{T_b} + \int_{273\text{K}}^{373\text{K}} C_{p,m} dT + \int_{373\text{K}}^{383\text{K}} C_{p,m} dT$
4.  $\int_{268\text{K}}^{383\text{K}} C_p dT + \frac{q_{\text{rev}}}{T}$

Question Type : **MCQ**

Question ID : **7364751029**

Option 1 ID : **7364753501**

Option 2 ID : **7364753499**

Option 3 ID : **7364753500**

Option 4 ID : **7364753498**



**Q.69** Propane molecule on chlorination under photochemical condition gives two di-chloro products, "x" and "y". Amongst "x" and "y", "x" is an optically active molecule. How many tri-chloro products (consider only structural isomers) will be obtained from "x" when it is further treated with chlorine under the photochemical condition?

- Options
1. 3
  2. 4
  3. 2
  4. 5

Question Type : MCQ

Question ID : 7364751038

Option 1 ID : 7364753534

Option 2 ID : 7364753535

Option 3 ID : 7364753537

Option 4 ID : 7364753536

**Q.70**  $\text{CrCl}_3 \cdot x\text{NH}_3$  can exist as a complex. 0.1 molal aqueous solution of this complex shows a depression in freezing point of  $0.558^\circ\text{C}$ . Assuming 100% ionisation of this complex and coordination number of Cr is 6, the complex will be  
(Given  $K_f = 1.86 \text{ K kg mol}^{-1}$ )

- Options
1.  $[\text{Cr}(\text{NH}_3)_3\text{Cl}_3]$
  2.  $[\text{Cr}(\text{NH}_3)_5\text{Cl}] \text{Cl}_2$
  3.  $[\text{Cr}(\text{NH}_3)_4\text{Cl}_2] \text{Cl}$
  4.  $[\text{Cr}(\text{NH}_3)_6] \text{Cl}_3$

Question Type : MCQ

Question ID : 7364751030

Option 1 ID : 7364753505

Option 2 ID : 7364753503

Option 3 ID : 7364753504

Option 4 ID : 7364753502

Section : Chemistry Section B

**Q.71** If 1 mM solution of ethylamine produces  $\text{pH} = 9$ , then the ionization constant ( $K_b$ ) of ethylamine is  $10^{-x}$ . The value of x is \_\_\_\_\_ (nearest integer).  
[The degree of ionization of ethylamine can be neglected with respect to unity.]

Question Type : SA

Question ID : 7364751047

**Q.72** The standard enthalpy and standard entropy of decomposition of  $\text{N}_2\text{O}_4$  to  $\text{NO}_2$  are  $55.0 \text{ kJ mol}^{-1}$  and  $175.0 \text{ J/K/mol}$  respectively. The standard free energy change for this reaction at  $25^\circ\text{C}$  in  $\text{J mol}^{-1}$  is \_\_\_\_\_ (Nearest integer)

Question Type : SA

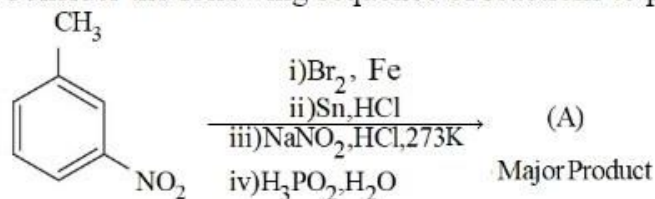
Question ID : 7364751046

**Q.73** During "S" estimation, 160 mg of an organic compound gives 466 mg of barium sulphate. The percentage of Sulphur in the given compound is \_\_\_\_\_.  
(Given molar mass in  $\text{g mol}^{-1}$  of Ba : 137, S : 32, O : 16)

Question Type : SA

Question ID : 7364751050

**Q.74** Consider the following sequence of reactions to produce major product (A)



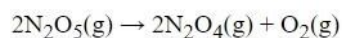
Molar mass of product (A) is \_\_\_\_\_  $\text{g mol}^{-1}$ .

(Given molar mass in  $\text{g mol}^{-1}$  of C : 12, H: 1, O :16, Br : 80, N : 14, P:31)

Question Type : SA

Question ID : 7364751049

**Q.75** For the thermal decomposition of  $\text{N}_2\text{O}_5(\text{g})$  at constant volume, the following table can be formed, for the reaction mentioned below.



Sr.No	Time/s	Total pressure/(atm)
1	0	0.6
2	100	'x'

$x = \text{_____} \times 10^{-3} \text{ atm}$  [nearest integer]

Given : Rate constant for the reaction is  $4.606 \times 10^{-2} \text{ s}^{-1}$ .

Question Type : SA

Question ID : 7364751048