



CONTACT US

7737653468, 9509908468 [www.theonlineguru.in](http://www.theonlineguru.in) [THEONLINEGURU@ZOHOMAIL.IN](mailto:THEONLINEGURU@ZOHOMAIL.IN), [SUNILKUMARSHARMA415@GMAIL.C](mailto:SUNILKUMARSHARMA415@GMAIL.C)

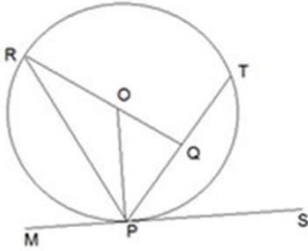
Thursday, 14 May 2026

1. In a  $\Delta PQR$ , the angle bisector of  $\angle Q$  and Direction (6 – 8): The given table graph shows external angle bisector of  $\angle R$  meet at point S. If the monthly income (in Rs. thousand) of five different companies in five different years.

- (A)  $108^\circ$
- (B)  $124^\circ$
- (C)  $72^\circ$
- (D)  $96^\circ$

	A	B	C	D	E
2010	3600	16800	1050	21000	14400
2011	6000	12000	18000	19200	10800
2012	13200	4800	13500	16800	16800
2013	10800	21600	9000	9000	18000
2014	9600	7200	12000	7200	21600

2. In a circle with a radius of 5 cm and center 'O', PT is a chord whose length is 8 cm. Find the value of  $\angle ROP$  if  $\angle QPS = 60^\circ$ .



- (A)  $80^\circ$
- (B)  $120^\circ$
- (C)  $60^\circ$
- (D)  $40^\circ$

3. A sum amounts to Rs. 29538 in 3 years and Rs. 44307 in 6 years at a certain rate of interest when the interest is compounded annually. Find the initial sum.

- (A) Rs. 19530
- (B) Rs. 14308
- (C) Rs. 18365
- (D) Rs. 19692

4. If  $x^3 + 1/x^3 = 198$  then find the value of  $(x^2 - 1/x^2)$ .

- (A)  $24\sqrt{2}$
- (B)  $26\sqrt{2}$
- (C)  $12\sqrt{2}$
- (D)  $12\sqrt{10}$

5. Let x be the smallest number, which when added to 2000 makes the resulting number divisible by 12, 16, 18, and 21. The sum of the digits of x is:

- (A) 4
- (B) 5
- (C) 6
- (D) 7

6. Find the central angle of the income of company 'A' in 2010, if the income of company 'A' in all the five years is represented in a pie-chart.

- (A)  $20^\circ$
- (B)  $45^\circ$
- (C)  $30^\circ$
- (D)  $36^\circ$

7. Find the difference between the average income of company 'B' and company 'E', in all the five years together.

- (A) Rs. 3240 thousand
- (B) Rs. 1400 thousand
- (C) Rs. 3632 thousand
- (D) Rs. 3840 thousand

8. The monthly income of company 'C' in 2010 and 2012 together is what fraction of monthly income of company 'D' in 2011 and 2012 together?

- (A)  $7/8$
- (B)  $5/6$
- (C)  $2/3$
- (D)  $4/5$

9. PQRS is a trapezium in which PQ is parallel to RS and  $PQ = 4(RS)$ . The diagonals of the trapezium intersect at O. What is the ratio of the area of triangle SRO to the area of the triangle PQO?

- (A) 1 : 4
- (B) 1 : 2
- (C) 1 : 8
- (D) 1 : 16

1-{A}-2-{B}-3-{D}-4-{A}-5-{D}-6-{C}-7-{D}-8-{C}-9-{D}



CONTACT US

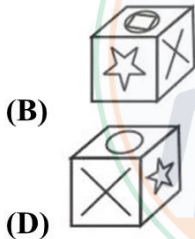
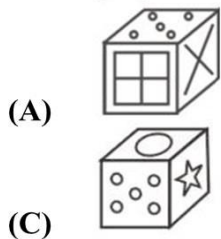
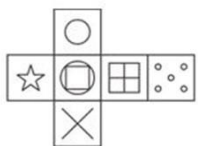
7737653468, 9509908468 [www.theonlineguru.in](http://www.theonlineguru.in) [THEONLINEGURU@ZOHOMAIL.IN](mailto:THEONLINEGURU@ZOHOMAIL.IN), [SUNILKUMARSHARMA415@GMAIL.C](mailto:SUNILKUMARSHARMA415@GMAIL.C)

Thursday, 14 May 2026

1. If in a certain code language, SITUATION is written as 133 and RIGHT is written as 67, then how will CONSTITUTION be written as in that language?

- (A) 167
- (B) 179
- (C) 184
- (D) 132

2. Which of the following cube in the answer figure cannot be made based on the unfolded cube in the question figure?



3. There are 6 boys in a class of 11 students. A student is chosen from the class at random to be made the class monitor. What is the probability that the class monitor is a girl?

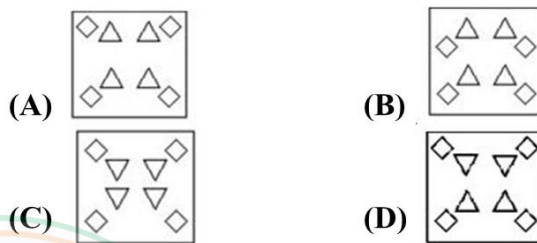
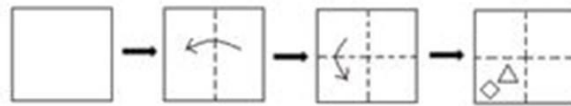
- (A) 5/11
- (B) 1
- (C) 6/11
- (D) 7/11

4. Which two signs should be interchanged in the following equation to make it correct?

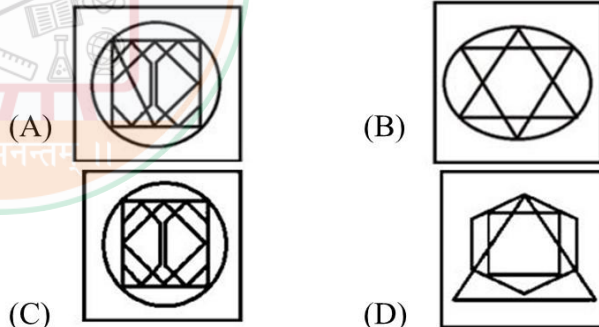
$$6 + 7 \times 8 - 21 \div 7 = 47$$

- (A) + and -
- (B) ÷ and ×
- (C) ÷ and -
- (D) + and ×

5. The sequence of folding a paper and the manner in which the folded paper has been cut is shown in the following figures. How this paper look when unfolded?



6. Select the option in which the given figure is embedded. (Rotation is not allowed)



7. Select the option that is related to the third term in the same way as the second term is related to the first term.

Mirage : Illusion :: Genuine : ?

- (A) coir
- (B) Hideout
- (C) Authentic
- (D) Image

8. In the following question, select the related letter/letters from the given alternatives.

HIK : KLN :: PQS : ?

- (A) TUW
- (B) STV
- (C) STU
- (D) TUX

1-{C}-2-{D}-3-{A}-4-{D}-5-{D}-6-{C}-7-{C}-8-{B}



CONTACT US

7737653468, 9509908468 [www.theonlineguru.in](http://www.theonlineguru.in) [THEONLINEGURU@ZOHOMAIL.IN](mailto:THEONLINEGURU@ZOHOMAIL.IN),  
[SUNILKUMARSHARMA415@GMAIL.COM](mailto:SUNILKUMARSHARMA415@GMAIL.COM)

Thursday, 14 May 2026

### (VOCABULARY)

#### 1. Expeditions

**Meaning:** . a journey undertaken by a group of people with a particular purpose, especially that of exploration, research, or war.

**Synonyms:** peregrination, voyage, commission, enterprise

**Antonyms:** hindrance, shortage, reatrdation

**Usage:** Ghulam Rasool remained attached with the British expeditions as a guide

#### 2. intrusions

**Meaning:** the action of intruding, invading, entering illegally

**Synonyms:** invasion, encroachment

**Antonyms:** withdraw, retreat, digress, recoil

**Usage:** frequent Chinese intrusions into our territoryas also the building of roads started receiving attention

#### 3. Reconnoitre

**Meaning:** make a military observation of (a region).

**Synonyms:** examine, scrutinize, pore

**Antonyms:** overlook, neglect

**Usage:** .We should reconnoitre the Galwan River valley

#### 4. austere

**Meaning:** severe or strict in manner or attitude.

**Synonyms:** distant, solemn, unyielding, grim.

**Antonyms:** genial, friendly, lenient

**Usage:** London Olympics, the austere post-

war games that saw the English fill the stands to the brim

### (WORD SUBSTITUTION)

5. Branch of medicine concerned with children and their illness - **Pediatrics**

6. Pay attention - **Glance at**

### (MISPELT WORDS)

**Find the correctly spelt word.**

7. (A) Polythiesm

(C) Poletheism

8. (A) Chimistry

(C) Chemisitry

(B) Polytheissm

(D) Polytheism

(B) Chemistry

(D) Chimestry

### (IDIOMS AND PHRASES)

9. **Cheap as chips:** If something is very inexpensive, it is as cheap as chips.

**Meaning:**

**Example:** Oh, you could definitely afford an apartment in my building—the rent is cheap as chips.

#### 10. Cheek by jowl:

**Meaning:** If things or people are cheek by jowl, they are very close together.

**Example:** You couldn't fit a piece of paper in the storage room now—all those boxes are stacked in there cheek by jowl.



CONTACT US

7737653468, 9509908468 [www.theonlineguru.in](http://www.theonlineguru.in) [THEONLINEGURU@ZOHOMAIL.IN](mailto:THEONLINEGURU@ZOHOMAIL.IN), [SUNILKUMARSHARMA415@GMAIL.COM](mailto:SUNILKUMARSHARMA415@GMAIL.COM)

Thursday, 14 May 2026

- Dr. Ashok Kumar Panda has recently taken charge as the Chairman & Managing Director of which company?**  
(A) NMDC Limited  
(B) Steel Authority of India Limited  
(C) Rashtriya Ispat Nigam Limited  
(D) Coal India Limited
- International Nurses Day 2026, observed globally on 12 May, commemorates the birth anniversary of which personality associated with modern nursing?**  
(A) Clara Barton (B) Marie Curie  
(C) Florence Nightingale (D) Mother Teresa
- In 2026, the Government of India notified what rate of construction welfare cess under the Code on Social Security, 2020 for building and other construction works?**  
(A) 0.5% (B) 1%  
(C) 2% (D) 5%
- Which state government ordered the formation of the Singappen Special Task Force in May 2026?**  
(A) Tamil Nadu (B) Kerala  
(C) Karnataka (D) Andhra Pradesh
- What is the official theme of the International Day of Plant Health (IDPH) 2026?**  
(A) Plants for Climate Action  
(B) Healthy Crops, Healthy Planet  
(C) Plant Biosecurity for Food Security  
(D) Green Agriculture for Future
- Which country will host the Fourth India-Africa Forum Summit (IAFS-IV) in May 2026?**  
(A) South Africa (B) Kenya  
(C) Egypt (D) India
- Who was appointed as the first Chairman of the National Federation of Churches in India (NFCI) launched in May 2026?**  
(A) Archbishop Joseph D'Souza  
(B) Bishop Vincent Vinod Kumar  
(C) Father Anthonyraj Thumma  
(D) Cardinal Anthony Poola
- Kulwinder Parhi, who was honoured with the National Florence Nightingale Award 2026 for nearly three decades of nursing service, is associated with which Union Territory?**  
(A) Ladakh (B) Lakshadweep  
(C) Sikkim (D) Delhi
- The Indian Cyber Crime Coordination Centre (I4C) signed an MoU with which institution to tackle mule accounts and cyber fraud?**  
(A) SIDBI (B) RBI  
(C) SEBI (D) SBI
- Who took oath as the Chief Minister of Puducherry for the fifth time in May 2026?**  
(A) N. Rangasamy (B) V. Narayanasamy  
(C) A. Namassivayam (D) K. Kailashnathan

1-{B} - 2-{C} - 3-{B} - 4-{A} - 5-{C} - 6-{D} - 7-{D} - 8-{A} - 9-{B} - 10-{A}



CONTACT US

7737653468, 9509908468 [www.theonlineguru.in](http://www.theonlineguru.in) [THEONLINEGURU@ZOHOMAIL.IN](mailto:THEONLINEGURU@ZOHOMAIL.IN), [SUNILKUMARSHARMA415@GMAIL.COM](mailto:SUNILKUMARSHARMA415@GMAIL.COM)

Thursday, 14 May 2026

## APEDA

### Why in News?

The **Agricultural and Processed Food Products Export Development Authority (APEDA)** facilitated the **first-ever export** of 20 metric tons of **One District One Product (ODOP)** honey from Baksa district of Assam to the United States.

#### Expository: -

#### Key Points

- **Export Initiative:** APEDA facilitated the export of 20 metric tons of ODOP honey from Baksa district, an Aspirational District in Assam, to the USA.
- The honey consignment was exported by APEDA-registered exporter M/s Salt Range Foods Pvt. Ltd. based in Assam.
- Important honey-producing districts in Assam include Baksa, Kokrajhar, Chirang, Udalguri, and Tamulpur in the Bodoland Territorial Region (BTR).
- **ODOP Initiative:** Baksa honey has been identified under the One District One Product (ODOP) initiative to promote district-specific products, value addition, and exports.
- **Baksa Honey:** Honey from Baksa is known for its natural purity, floral diversity, high nutritional value, and near-organic characteristics due to eco-friendly and pesticide-free environments.

- **APEDA:** It stands for Agricultural and Processed Food Products Export Development Authority
- **Ministry:** It functions under the Ministry of Commerce and Industry.
- It is a **statutory body** established by the Government of India under the Agricultural and Processed Food Products Export Development Authority Act, enacted by Parliament in **December 1985**.
- It succeeded the **Processed Food Export Promotion Council (PFEPCC)**.





CONTACT US

☎ 7737653468, 9509908468 🌐 [www.theonlineguru.in](http://www.theonlineguru.in) ✉ [THEONLINEGURU@ZOHOMAIL.IN](mailto:THEONLINEGURU@ZOHOMAIL.IN), [SUNILKUMARSHARMA415@GMAIL.C](mailto:SUNILKUMARSHARMA415@GMAIL.C)

Thursday, 14 May 2026

Rivers	Origin	Length (km)	End
Beas	Rises at Himalayas in central Himachal Pradesh	470	Joins Sutlej river in Punjab, India
Parbati	Mantalai Glacier near Pin Prabati Pass	-	Mixes with Beas River at Bhuntar, near Kullu of Himachal Pradesh
Suru	Panzella Glacier, Pensi La Pass, Kargil	185	Indus, Nurla, Skardu, Pakistan
Dras	Machoi Glacier, Zoji La, ear Sonamarg, Jammu & Kashmir	86	Suru River at Kharul, Kargil
Zanskar	Doda River (First Branch), Kargyag and Tsarap River (Second Branch)	-	Indus River near Nimmu in Ladakh
Tsarap	Pankpo La, Sarchu	182	Zanskar River, Padum, Kargil
Doda	Drang-Drung Glacier, Pensi La	79	Zanskar River, Padum, Kargil
Kaveri	Talakaveri in Western Ghats in Karnataka	765	Ends in Bay of Bengal