



**CADERNO**  
**VAMOS**  
**SOMAR?**

$$1 + 1 =$$



NOME: \_\_\_\_\_ DATA: \_\_\_\_\_



VAMOS SOMAR ?

$$\begin{array}{r} + 5 \\ 2 \\ \hline \end{array}$$

$$\begin{array}{r} + 8 \\ 2 \\ \hline \end{array}$$

$$\begin{array}{r} + 6 \\ 3 \\ \hline \end{array}$$

$$\begin{array}{r} + 3 \\ 3 \\ \hline \end{array}$$

$$\begin{array}{r} + 4 \\ 5 \\ \hline \end{array}$$

$$\begin{array}{r} + 5 \\ 3 \\ \hline \end{array}$$

$$\begin{array}{r} + 7 \\ 3 \\ \hline \end{array}$$

$$\begin{array}{r} + 9 \\ 4 \\ \hline \end{array}$$

$$\begin{array}{r} + 8 \\ 3 \\ \hline \end{array}$$

$$\begin{array}{r} + 6 \\ 6 \\ \hline \end{array}$$

$$\begin{array}{r} + 5 \\ 8 \\ \hline \end{array}$$

$$\begin{array}{r} + 5 \\ 3 \\ \hline \end{array}$$

$$\begin{array}{r} + 2 \\ 2 \\ \hline \end{array}$$


$$\begin{array}{r} + 3 \\ 2 \\ \hline \end{array}$$

$$\begin{array}{r} + 1 \\ 2 \\ \hline \end{array}$$

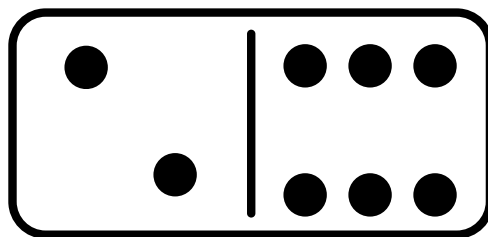
$$\begin{array}{r} + 1 \\ 9 \\ \hline \end{array}$$

NOME: \_\_\_\_\_ DATA: \_\_\_\_\_


VAMOS PINTAR QUANTIDADES?



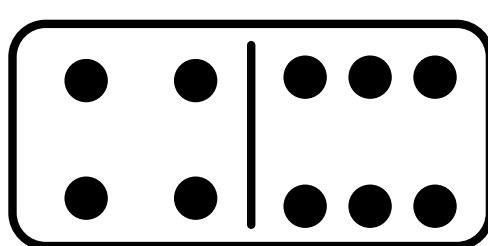
$$1 + 6 = \underline{\quad}$$




$$2 + 6 = \underline{\quad}$$



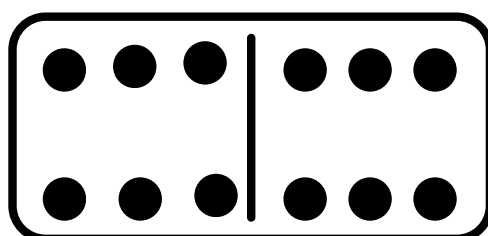
$$3 + 6 = \underline{\quad}$$



$$4 + 6 = \underline{\quad}$$



$$5 + 6 = \underline{\quad}$$



$$6 + 6 = \underline{\quad}$$

NOME: \_\_\_\_\_ DATA: \_\_\_\_\_

PINTE CADA MAÇÃ DE ACORDO COM  
O RESULTADO DA ADIÇÃO:

VERMELHO










10

AMARELO

6


VERDE

8




NOME: \_\_\_\_\_ DATA: \_\_\_\_\_


O BEBÊ TINHA 4 CHUPETAS E GANHOU MAIS UMA.  
QUANTAS ELE TEM AGORA?



BRUNO TINHA 5 BALAS E GANHOU MAIS UMA.  
QUANTAS ELE TEM AGORA?


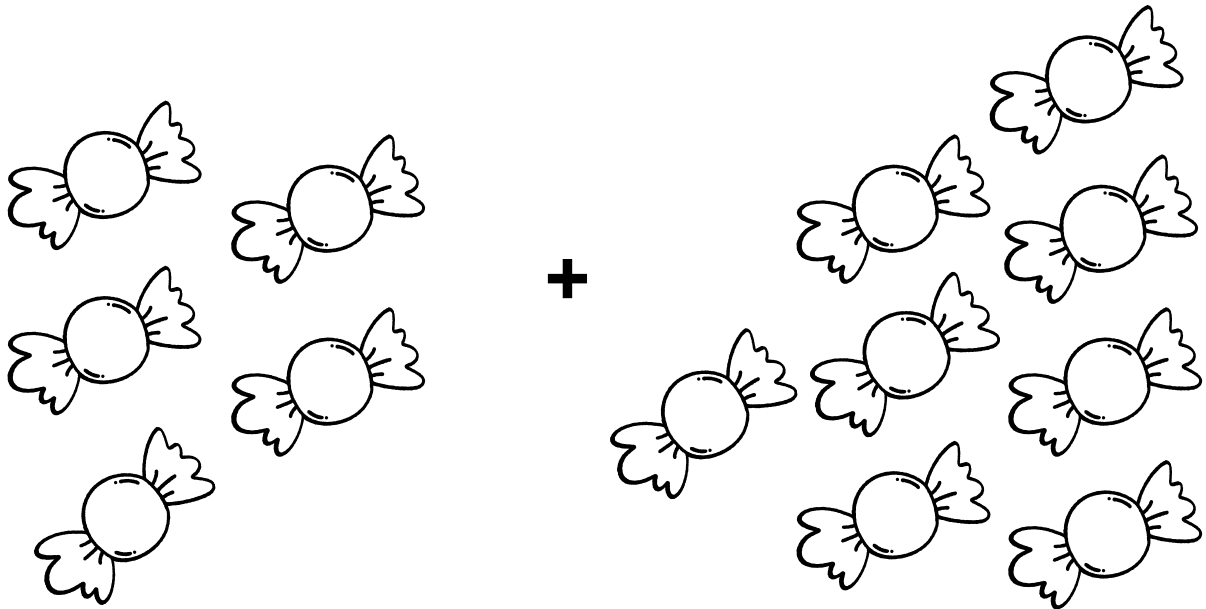


O CACHORRO TINHA 6 OSSOS E GANHOU MAIS UM.  
QUANTOS ELE TEM AGORA?






NOME: \_\_\_\_\_ DATA: \_\_\_\_\_

BIA TINHA 5 BOMBONS, GANHOU MAIS ALGUNS  
BOMBONS DE JÚLIA. AGORA BIA TEM 8  
BOMBONS, QUANTOS BOMBONS ELA GANHOU?








NOME: \_\_\_\_\_ DATA: \_\_\_\_\_

CAIO TINHA 3 CARRINHOS . GANHOU MAIS 4 DA  
SUA MÃE. QUANTOS CARRINHOS ELE TEM  
AGORA?





+



NOME: \_\_\_\_\_ DATA: \_\_\_\_\_


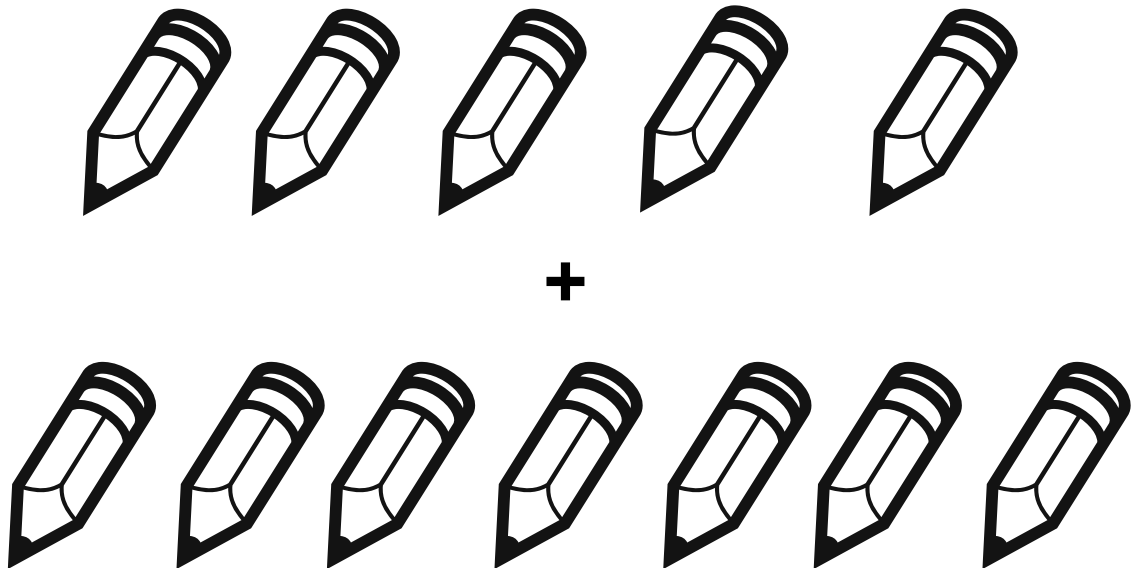
MARIA COMPROU UM BICHO DE PELÚCIA POR  
R\$25,00. PAGOU UMA NOTA DE R\$50,00.  
QUANTOS ELA RECEBEU DE TROCO?






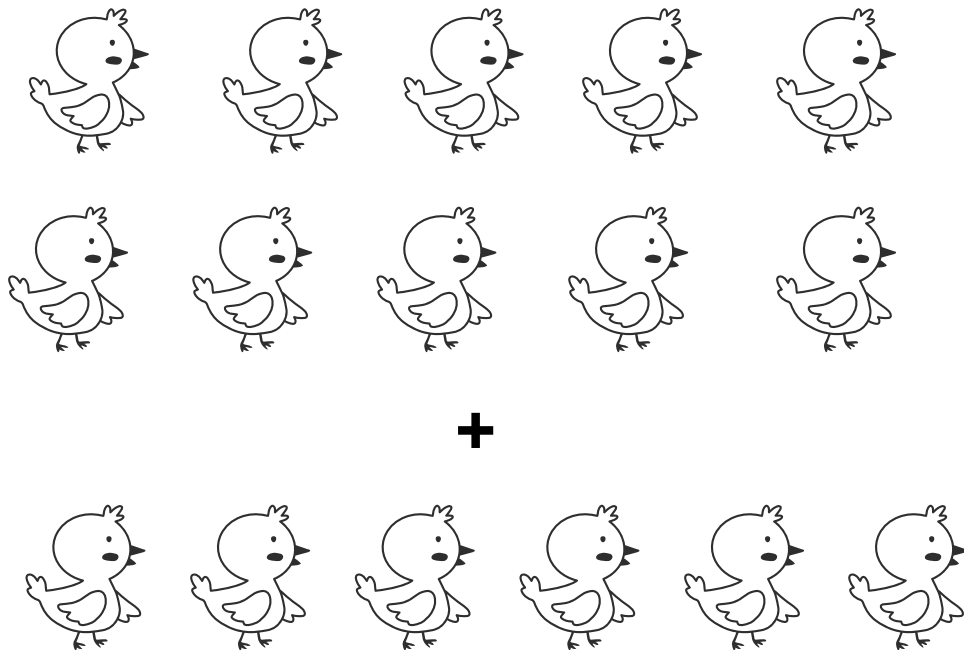
NOME: \_\_\_\_\_ DATA: \_\_\_\_\_

ANA TEM 5 LÁPIS DE COR. QUANTOS ELA  
PRECISARÁ GANHAR PARA FICAR COM 12  
LÁPIS?




NOME: \_\_\_\_\_ DATA: \_\_\_\_\_

EM UM GALINHEIRO HAVIAM 10 PINTINHOS.  
NASCERAM MAIS 6. QUANTOS PINTINHOS HÁ  
AGORA NO GALINHEIRO?





NOME: \_\_\_\_\_ DATA: \_\_\_\_\_


VOVÔ COMPROU 2 CAIXAS DE MORANGOS. EM  
UMA CAIXA HÁ 7 MORANGOS E NA OUTRA HÁ 8.  
QUANTOS MORANGOS TEM AO TODO?



+



NOME: \_\_\_\_\_ DATA: \_\_\_\_\_



VAMOS SUBTRAIR ?

$$\begin{array}{r} 10 \\ - 2 \\ \hline \end{array}$$

$$\begin{array}{r} 5 \\ - 1 \\ \hline \end{array}$$

$$\begin{array}{r} 6 \\ - 3 \\ \hline \end{array}$$

$$\begin{array}{r} 9 \\ - 7 \\ \hline \end{array}$$

$$\begin{array}{r} 10 \\ - 5 \\ \hline \end{array}$$

$$\begin{array}{r} 4 \\ - 3 \\ \hline \end{array}$$

$$\begin{array}{r} 8 \\ - 2 \\ \hline \end{array}$$

$$\begin{array}{r} 4 \\ - 4 \\ \hline \end{array}$$

$$\begin{array}{r} 9 \\ - 2 \\ \hline \end{array}$$

$$\begin{array}{r} 10 \\ - 1 \\ \hline \end{array}$$

$$\begin{array}{r} 6 \\ - 4 \\ \hline \end{array}$$

$$\begin{array}{r} 7 \\ - 3 \\ \hline \end{array}$$

NOME: \_\_\_\_\_ DATA: \_\_\_\_\_

PINTE CADA MAÇÃ DE ACORDO COM O  
RESULTADO DA ADIÇÃO:

VERMELHO










4

AMARELO

6


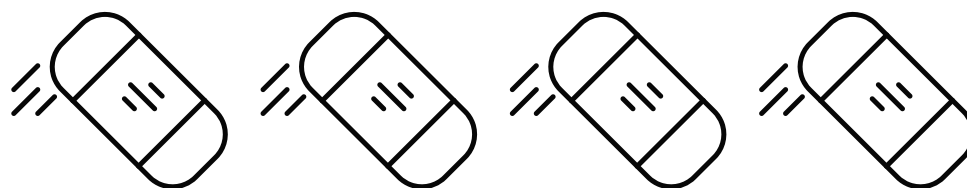
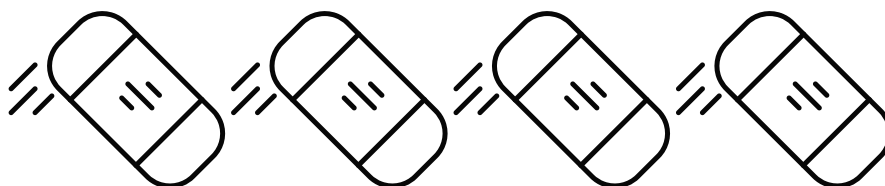
VERDE

2






NOME: \_\_\_\_\_ DATA: \_\_\_\_\_

JOSÉ TINHA 8 BORRACHAS. DEU 3 PARA SEUS  
AMIGOS.COM QUANTAS BORRACHAS JOSÉ  
FICOU?





NOME: \_\_\_\_\_ DATA: \_\_\_\_\_

CAROL COMPROU 8 BANANAS. MAS NO MEIO  
DO CAMINHO COMEU 2. QUANTAS BANANAS  
AINDA TEM?



NOME: \_\_\_\_\_ DATA: \_\_\_\_\_


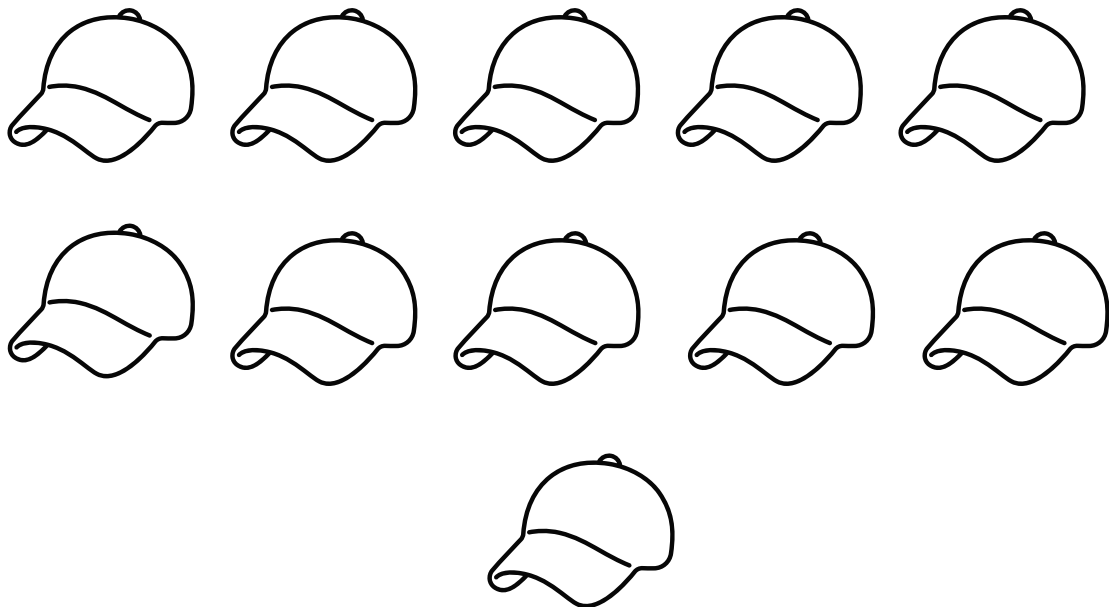
LUCAS TINHA 6 BALÕES. ESTOURARAM 3. COM  
QUANTAS BALÕES ELE FICOU?












NOME: \_\_\_\_\_ DATA: \_\_\_\_\_

ANDRÉ TINHA 12 BONÉS, DEU ALGUNS PARA  
SEU PRIMO E FICOU COM 7. QUANTOS BONÉS  
ANDRÉ DEU PARA SEU PRIMO?



NOME: \_\_\_\_\_ DATA: \_\_\_\_\_

NO JARDIM DA CASA DE ALANA HÁ 6  
JOANINHAS. SE 4 DELAS FOREM EMBORA  
QUANTAS JOANINHAS FICARÃO NO JARDIM?



NOME: \_\_\_\_\_ DATA: \_\_\_\_\_

CONTE A QUANTIDADE DE PEIXES E ESCREVA OS  
NUMERAIS CORRESPONDENTES

